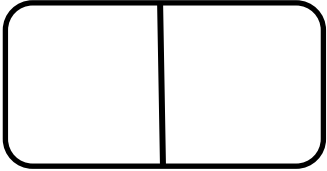
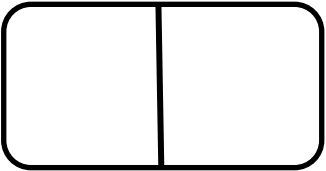
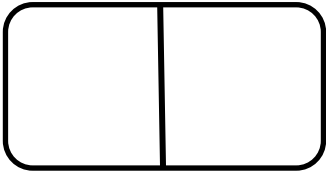
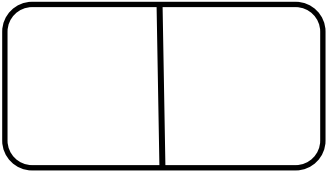
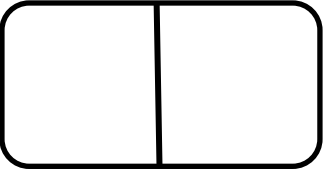
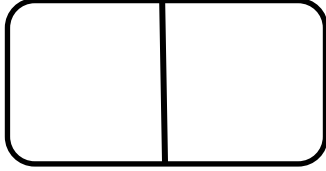
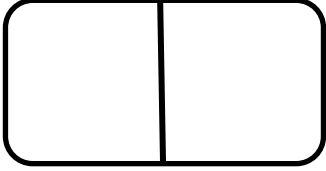
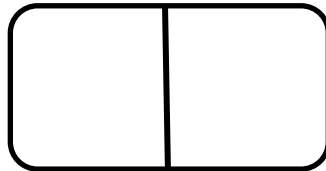


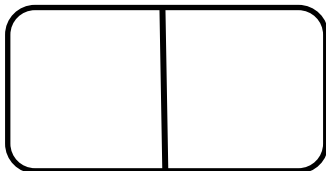
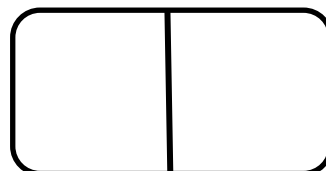


Name: \_\_\_\_\_

# DOMINO SUBTRACTION

Pick a domino. Draw the dots to show your domino. Write a subtraction sentence and find the difference.

 ____ - ____ = ____	 ____ - ____ = ____	 ____ - ____ = ____	 ____ - ____ = ____
 ____ - ____ = ____	 ____ - ____ = ____	 ____ - ____ = ____	 ____ - ____ = ____
 ____ - ____ = ____	 ____ - ____ = ____	 ____ - ____ = ____	 ____ - ____ = ____