

Name: _____

Addition With Regrouping Practice



1.



2.

3.

4.


5.

6.



7.

8.





9.

10.

11.

12.



Name: _____



Addition With Regrouping Practice

1.

	tens	ones
+		
<hr/>		

2.

	tens	ones
+		
<hr/>		

3.

	tens	ones
+		
<hr/>		

4.



	tens	ones
+		
<hr/>		

5.

	tens	ones
+		
<hr/>		

6.

	tens	ones
+		
<hr/>		





7.

	tens	ones
+		

8.

	tens	ones
+		

9.

	tens	ones
+		

10.


	tens	ones
+		

11.

	tens	ones
+		

12.

	tens	ones
+		



Name: _____



Addition With Regrouping Practice

1. Do I need to regroup? yes no

	tens	ones
+		
<hr/>		

2. Do I need to regroup? yes no

	tens	ones
+		
<hr/>		

3. Do I need to regroup? yes no

	tens	ones
+		
<hr/>		

4. Do I need to regroup? yes no



	tens	ones
+		
<hr/>		

5. Do I need to regroup? yes no

	tens	ones
+		
<hr/>		

6. Do I need to regroup? yes no

	tens	ones
+		
<hr/>		



7. Do I need to regroup? yes no

	tens	ones
+		

8. Do I need to regroup? yes no

	tens	ones
+		



9. Do I need to regroup? yes no

	tens	ones
+		

10. Do I need to regroup? yes no



	tens	ones
+		

11. Do I need to regroup? yes no

	tens	ones
+		

12. Do I need to regroup? yes no

	tens	ones
+		



Name: _____

Addition With Regrouping Practice

Use counters to add the numbers.



1. The addition problem is:

The answer is:

2. The addition problem is:

The answer is:

3. The addition problem is:

The answer is:

4. The addition problem is:



The answer is:

5. The addition problem is:

The answer is:

6. The addition problem is:

The answer is:





7. The addition problem is:

The answer is:

8. The addition problem is:

The answer is:

9. The addition problem is:

The answer is:

10. The addition problem is:



The answer is:

11. The addition problem is:

The answer is:


12. The addition problem is:

The answer is:



1.

$$\begin{array}{r} 35 \\ + 27 \\ \hline \end{array}$$



$$\begin{array}{r} 47 \\ + 36 \\ \hline \end{array}$$

2.

3.

$$\begin{array}{r} 58 \\ + 34 \\ \hline \end{array}$$



$$\begin{array}{r} 74 \\ + 29 \\ \hline \end{array}$$



4.

5.

$$\begin{array}{r} 62 \\ + 29 \\ \hline \end{array}$$




$$\begin{array}{r} 46 \\ + 38 \\ \hline \end{array}$$

6.

7.

$$\begin{array}{r} 29 \\ + 36 \\ \hline \end{array}$$



$$\begin{array}{r} 54 \\ + 28 \\ \hline \end{array}$$


8.

9.

$$\begin{array}{r} 63 \\ + 29 \\ \hline \end{array}$$



$$\begin{array}{r} 45 \\ + 26 \\ \hline \end{array}$$



10.

11.

$$\begin{array}{r} 47 \\ + 35 \\ \hline \end{array}$$




$$\begin{array}{r} 17 \\ + 18 \\ \hline \end{array}$$

12.

1.

$$\begin{array}{r} 28 \\ + 37 \\ \hline \end{array}$$



$$\begin{array}{r} 35 \\ + 24 \\ \hline \end{array}$$


2.

3.

$$\begin{array}{r} 62 \\ + 29 \\ \hline \end{array}$$



$$\begin{array}{r} 74 \\ + 23 \\ \hline \end{array}$$



4.

5.

$$\begin{array}{r} 26 \\ + 38 \\ \hline \end{array}$$




$$\begin{array}{r} 52 \\ + 35 \\ \hline \end{array}$$

6.

7.

$$\begin{array}{r} 38 \\ + 23 \\ \hline \end{array}$$



$$\begin{array}{r} 73 \\ + 25 \\ \hline \end{array}$$


8.

9.

$$\begin{array}{r} 72 \\ + 24 \\ \hline \end{array}$$



$$\begin{array}{r} 63 \\ + 37 \\ \hline \end{array}$$



10.

11.

$$\begin{array}{r} 56 \\ + 27 \\ \hline \end{array}$$



$$\begin{array}{r} 13 \\ + 15 \\ \hline \end{array}$$

12.