

4th Grade Emergency Sub Plans

created by

The Curriculum Corner

Name: _____

Find Your Match

Rounding Activity

My number is: _____

The number rounds to: _____

My partner's number is: _____

The number rounds to: _____

Make and solve an addition
problem using the numbers.

Make and solve a subtraction
problem using the numbers.

Write your number in expanded form and word form below.

1,374

1,368

1,835

1,842

2,106

2,114

2,244

2,239

2,869

2,874

3,609

3,614

3,728

3,731

3,914

3,912

4,288

4,293

4,712

4,713

5,757

5,762

5,799

5,802

6,365

6,371

6,689

3,694

7,143

7,142

7,621

7,624

8,746

8,753

8,989

8,913

9,326

9,331

9,611

9,609

Name: _____

Pick 2 and Add!

Pick 2 cards. Make an addition problem.
Write the problem. Find the sum.

1.

2.

3.

4.

5.

6.

Name: _____

Pick 3 and Add!

Pick 3 cards. Make an addition problem.
Write the problem. Find the sum.

1.

2.

3.

4.

5.

6.

Name: _____

Pick 2 and Subtract!

Pick 2 cards. Make a subtraction problem.

Write the problem. Find the difference.

1.

2.

3.

4.

5.

6.

Name: _____

Favorite Part About Camping

	campfire	sleeping in a tent	fishing	hiking	swimming in lake
Nala					
Camden					
Michelle					
Alex					
Nigel					

1. Nala and Nigel don't like activities that involve water.
2. Camden only likes to stay at the campsite.
3. Michelle and Alex are afraid of fire.
4. Nigel hurt his ankle last summer and has trouble walking.
5. Michelle is the only one who brought a swimsuit.
6. Nigel's favorite part of camping involves making s'mores and telling stories.

****ANSWER KEY****

Favorite Part About Camping

	campfire	sleeping in a tent	fishing	hiking	swimming in lake
Nala	X	X	X	✓	X
Camden	X	✓	X	X	X
Michelle	X	X	X	X	✓
Alex	X	X	✓	X	X
Nigel	✓	X	X	X	X

1. Nala and Nigel don't like activities that involve water.
2. Camden only likes to stay at the campsite.
3. Michelle and Alex are afraid of fire.
4. Nigel hurt his ankle last summer and has trouble walking.
5. Michelle is the only one who brought a swimsuit.
6. Nigel's favorite part of camping involves making s'mores and telling stories.

Name: _____

Be prepared!

	fishing poles	tent	hiking sticks	Friday	Saturday	Sunday
Josh						
Anton						
Malia						
Friday						
Saturday						
Sunday						

Three campers (Josh, Anton & Malia) showed up at a campsite on different days (Friday, Saturday & Sunday) for a week-long camping trip. Each one brought different supplies for the group (fishing poles, tents, hiking sticks). Figure out which camper showed up on which day and what supplies he/she brought.

1. Josh did not bring the tent, nor did he show up on the last day of the weekend.
2. The tent didn't show up until the second night of the camping trip. (Oops! Not good planning, huh?!)
3. Neither Anton nor Malia brought the fishing poles.
4. Malia did not show up until Sunday.

****ANSWERKEY****

Be prepared!

	fishing poles	tent	hiking sticks	Friday	Saturday	Sunday
Josh	✓	X	X	✓	X	X
Anton	X	✓	X	X	✓	X
Malia	X	X	✓	X	X	✓
Friday	✓	X	X			
Saturday	X	✓	X			
Sunday	X	X	✓			

Three campers (Josh, Anton & Malia) showed up at a campsite on different days (Friday, Saturday & Sunday) for a week-long camping trip. Each one brought different supplies for the group (fishing poles, tents, hiking sticks). Figure out which camper showed up on which day and what supplies he/she brought.

1. Josh did not bring the tent, nor did he show up on the last day of the weekend.
2. The tent didn't show up until the second night of the camping trip. (Oops! Not good planning, huh?!)
3. Neither Anton nor Malia brought the fishing poles.
4. Malia did not show up until Sunday.


Name: _____

Find the area & perimeter

1.

16 cm

21 cm



The perimeter is:

The area is:

2.

_____ in

23 in



The perimeter is:

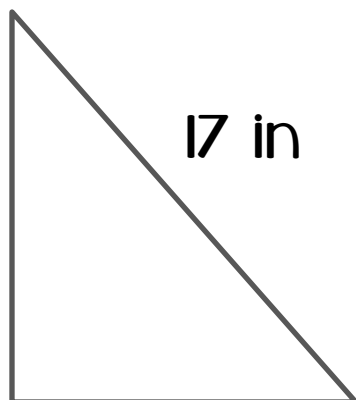
76 cm

The area is:

3.

9 in

17 in



9 in

The perimeter is:

The area is:

4.

_____ cm

27 cm



The perimeter is:

86 cm

The area is:

Name: _____

Addition Practice

$$\begin{array}{r} 4,427 \\ +2,885 \\ \hline \end{array}$$

$$\begin{array}{r} 9,210 \\ +7,158 \\ \hline \end{array}$$

$$\begin{array}{r} 8,408 \\ +7,293 \\ \hline \end{array}$$

$$\begin{array}{r} 6,219 \\ +3,812 \\ \hline \end{array}$$

$$\begin{array}{r} 5,736 \\ +4,274 \\ \hline \end{array}$$

$$\begin{array}{r} 7,327 \\ +1,934 \\ \hline \end{array}$$

$$\begin{array}{r} 3,824 \\ +2,371 \\ \hline \end{array}$$

$$\begin{array}{r} 7,461 \\ +5,741 \\ \hline \end{array}$$

$$\begin{array}{r} 4,639 \\ +7,481 \\ \hline \end{array}$$

Name: _____

Story Map

The title is: _____

The author is: _____

main character(s)

setting

beginning

problem

middle

solution

end

Name: _____

I CAN READ INFORMATIONAL TEXT!

The title is: _____

The author is: _____

The author's purpose for writing this book was:

Three things I learned from reading the book are:

1.

2.

3.

Another place I can look to learn more is:

My advice for Scaredy is
to _____



I think this would help
because:

Help for Scaredy Squirrel!



Written by:

Scaredy is afraid of all the troublemakers he could encounter.

Scaredy is afraid of:



Reasons why Scaredy Squirrel shouldn't be afraid of this:

- 1.
- 2.
- 3.

I think Scaredy should pack _____ to help him survive.



I think this would help because:

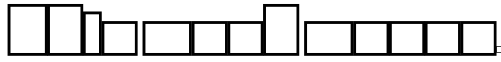
I think Scaredy should pack _____ to help him survive.



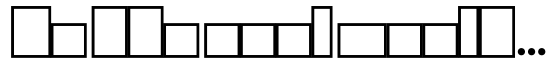
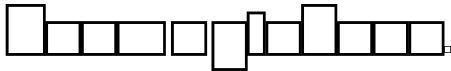
I think this would help because:

Building understanding

The word is:



(in my own words)



Where would you see
this in the real world?



Name: _____

Making Words


Write the words you make in the boxes below.

A	O	U	C
D	G	M	N
P	R		

A	O	U	C
D	G	M	N
P	R		

Name: _____

Camping Boggle



p	r	g	e	t	r	e	e	s	t
a	t	n	e	t	f	i	s	h	s
m	s	i	l	c	r	e	w	d	s
t	g	p	a	a	s	r	s	c	a
s	n	m	n	m	n	i	p	a	p
e	i	a	t	p	i	f	a	n	m
r	k	c	e	e	b	p	m	o	o
o	i	r	r	r	a	m	l	e	c
m	h	i	n	s	c	a	o	e	f
s	t	r	a	i	l	c	g	a	x

Write the words you find in the boxes below.

Name: _____

Camping Words

Make a list of words that make you think about camping.
Put each word in the correct category below.

noun	
verb	
adjective	
adverb	

I went camping.

I built a fire.

I ate marshmallows.

I went on a hike.

It was dark.

I slept in my tent.

I saw a bear.

I heard a raccoon.

I went fishing.

It was cold.

I told a story.

I looked at the sky.


Name: _____

You are going camping this weekend. Tell how you feel about the trip. Use descriptive adjectives and verbs.



Name: _____

You are in your tent at night and hear an animal outside your tent. Describe what the animal is doing.



Name: _____

Write a story you would tell around the campfire.
Draw a picture to accompany your story.



Name: _____

How to Make the Very Best S'mores!



A simple line drawing of a tent. A roll of paper with a small square attached is on top of the tent. A cup is on the ground next to the tent.



Name: _____



A worksheet template featuring a dashed black border. Inside the border, there are 15 horizontal solid black lines for writing, evenly spaced. The lines start from the top left and extend to the right, leaving a small gap from the right border. The bottom line is the last of the 15 lines.

Classify the Animals

Find ways to group the animals. You may use an animal more than once. Add a page to write about adaptations

Adaptations

Draw one of the animals. Label adaptations on the animal. You may also add more details in writing at the bottom.

frog

cricket

bear

snake

fox

salmon

squirrel

raccoon

deer

bat

mosquito

eagle

toad

beaver

skunk

lightning
bug

woodpecker

crayfish

bee

wasp

rabbit

chipmunk

owl

robin

Name: _____

Compare & Contrast

