

It's About Time

Name: _____

Telling Time Practice Booklet

CCSS.1.MD.3: Tell time to the hour and half hour

CCSS.2.MD.7: Tell time to five minutes using a.m. and p.m.

www.thecurriculumcorner.com

Directions: Complete each sentence about time.

There are _____ seconds in a minute.

There are _____ minutes in an hour.

There are _____ hours in a day.

There are _____ days in a week.

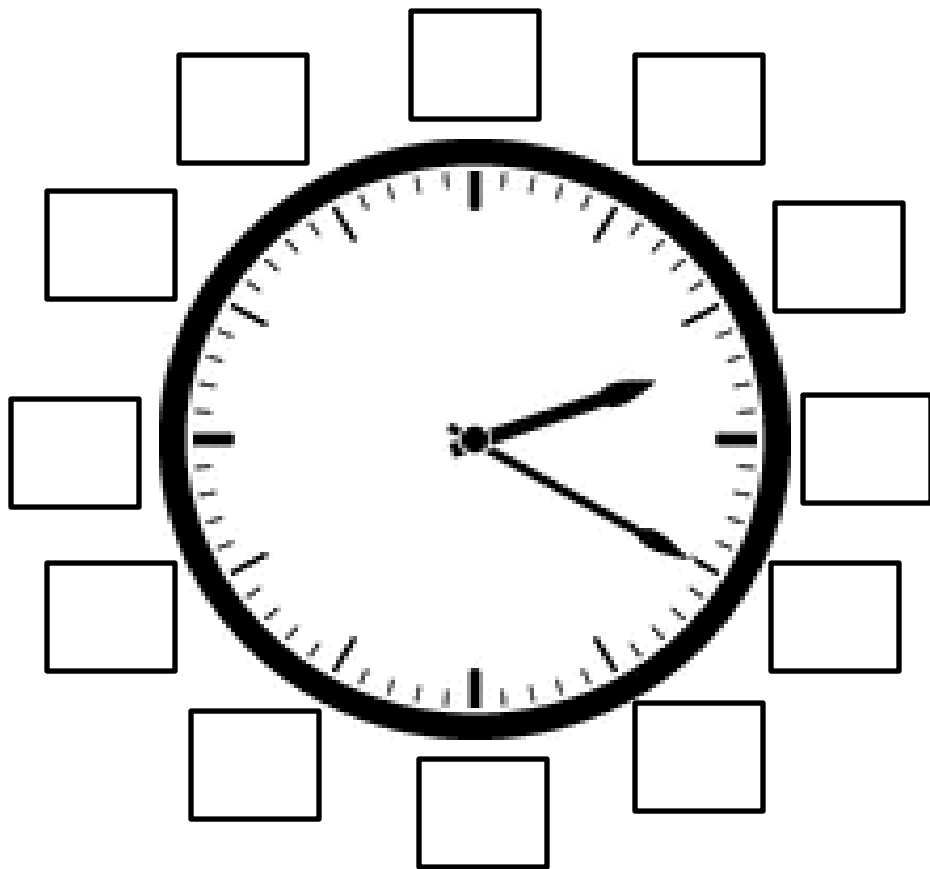
Problem Solving: Write a number sentence to solve each problem.

How many seconds are in two minutes?

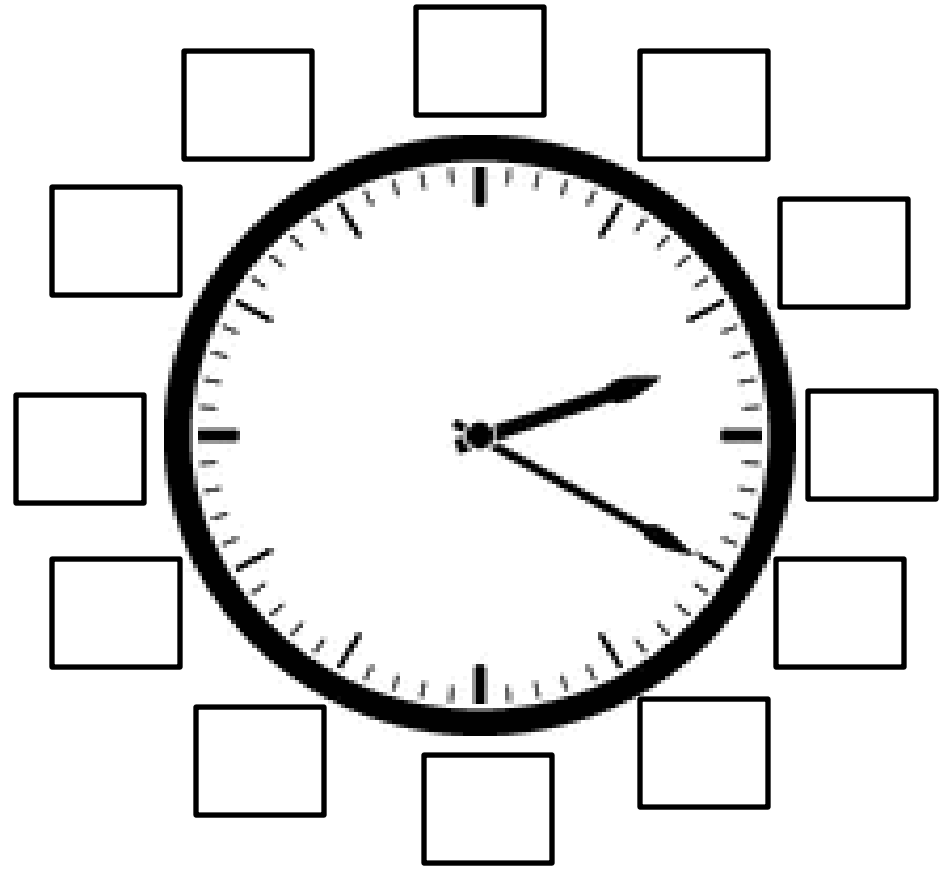
How many minutes are in three hours?

How many days are in two weeks?

Write the hours on the clock



Write the minutes on the clock



On a clock, the hour hand is the short hand. The minute hand is the long hand. Trace the hour hand in blue and the minute hand in red.



AM is an abbreviation for ante meridian

PM is an abbreviation for post meridian

ante means before and post means after

AM means _____ noon

PM means _____ noon

Write AM or PM before each event to tell when it occurs.

_____ The sun comes up.

_____ The sun goes down.

_____ I wake up.

_____ I go to sleep.

_____ I eat dinner.

_____ I eat breakfast.


_____ I go to school.

_____ I do my homework.


_____ I read a bedtime story.

_____ I get dressed for school.

Draw a picture to show
something you do in the *AM*



Draw a picture to show
something you do in the *PM*



Telling Time to the Hour



Telling Time to the Half Hour



Telling Time to the Quarter Hour



Another way of saying 6:15 is quarter after 6.

Another way of saying 6:30 is half past 6.

Another way of saying 6:45 is quarter til 7.

Write another way to say the times below.

3:15 _____

7:45 _____

10:45 _____

2:30 _____

9:15 _____

1:45 _____


12:30 _____

8:45 _____


Telling Time to 5 Minutes




Draw the hands to show the times. Remember the hour hand is the _____ hand and the minute hand is the _____ hand.
(Fill in each blank with long or short.)



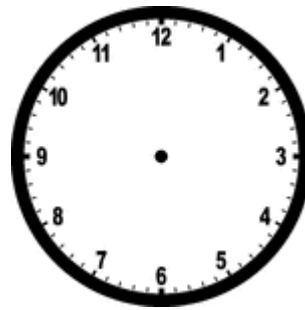
7:35



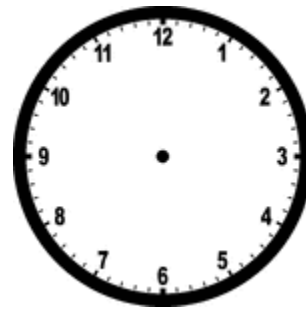
11:20



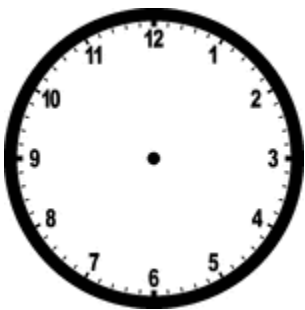
9:15




1:55




3:45




10:05



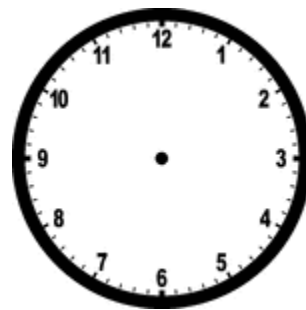
1:40



2:10



4:50



6:25

Problem Solving 1

Chaleen went to the park at 4:00.
She stayed for one hour. What time
did she leave?

Keller went to the movies at 1:00.
The movie was two hours long. What
time was it over?

My friend Ian came over to my house
at 4:30. He stayed for two hours.
What time did he go home?

Rylee had a basketball game at 3:00.
It lasted one hour. What time was it
over?

Stella woke up at 7:00. She had to
leave for school an hour later. What
time did she leave for school?

Gavin started playing video games at
2:00. His mom said he could play for
one hour. What time did he have to
stop?

Problem Solving 2

Quinn started playing a game with her friend at 3:00. They finished at 3:45. How long did the game last over??

Luke was reading a book. He started at 4:00. He finished the book at 5:15. How long did it take him to read the book?

It started raining at noon. It stopped at 1:30. How long did it rain?

Jamie was doing his homework after school. He started at 5:15. He finished at 5:45. How long did his homework take?

Hadley is going to her friend's house at 7:00. It is 5:30 right now. How long does she have to wait?

It is 6:00. Lilly's mom said she could have a cookie at 7:15. How long does she have to wait?