


Rainforest






Name: _____

©www.thecurriculumcorner.com












Find your way
to the end.




Find your way
to the end.






Name: _____


How Many?



Count the tens and ones.
Write the number.






TENS	ONES
	


TENS	ONES
	



TENS	ONES
	


TENS	ONES
	

TENS	ONES
	

TENS	ONES
	

TENS	ONES
	

TENS	ONES
	

TENS	ONES
	

Name: _____

How Many?

Count the tens and ones.
Write the number.



TENS	ONES

TENS	ONES

TENS	ONES

TENS	ONES

TENS	ONES

TENS	ONES

TENS	ONES

TENS	ONES

TENS	ONES

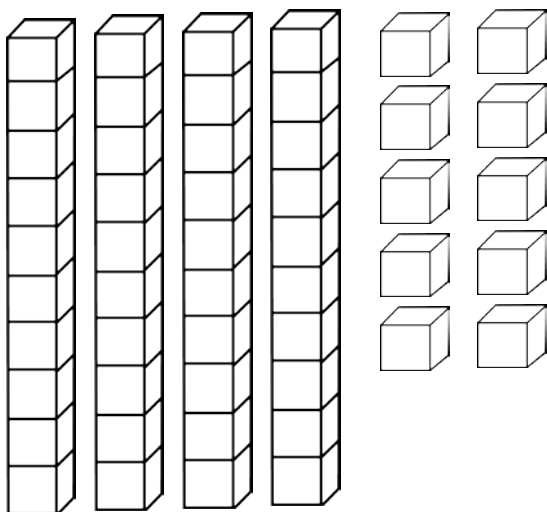
Name: _____

Color the Number

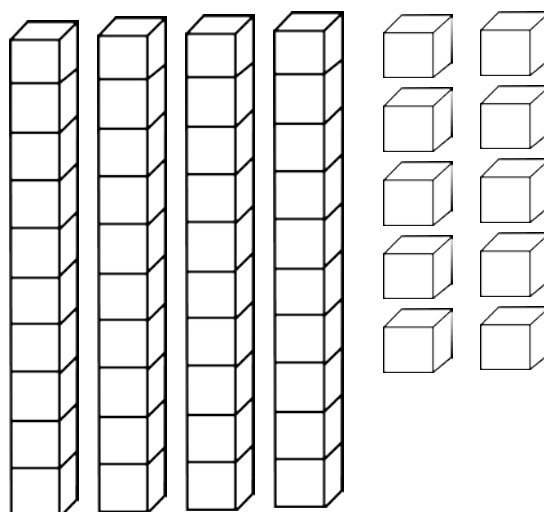
Color the tens and ones
to show each number.




14



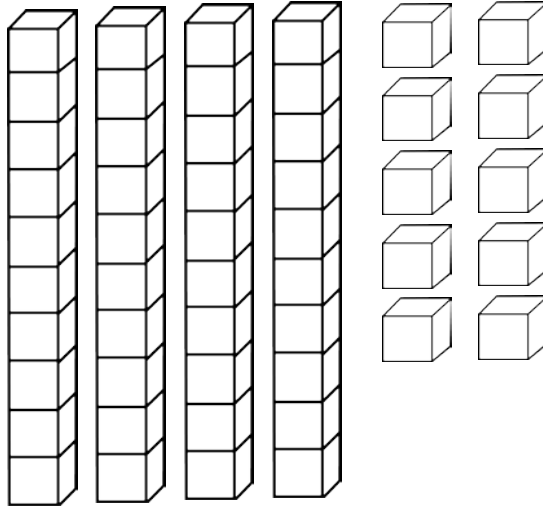
7



28




44



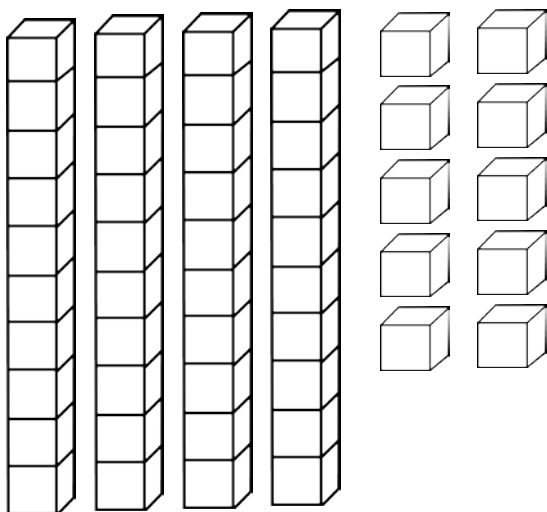
Name: _____

Color the Number

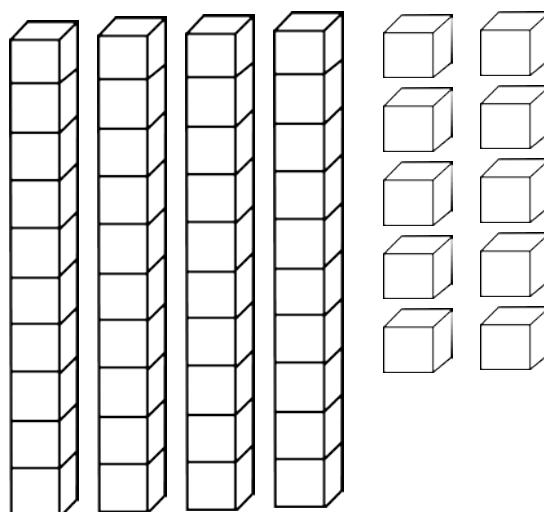
Color the tens and ones
to show each number.




42



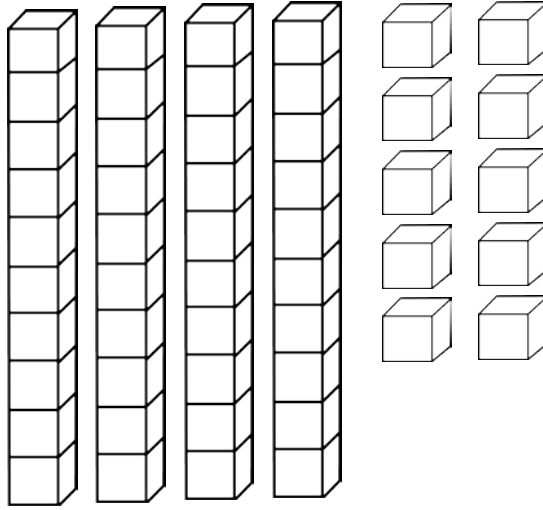
9



26



35

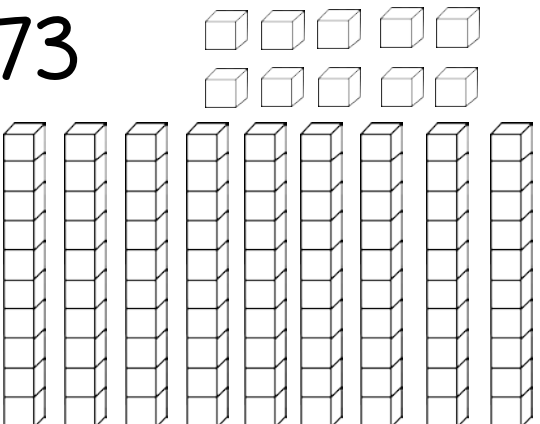

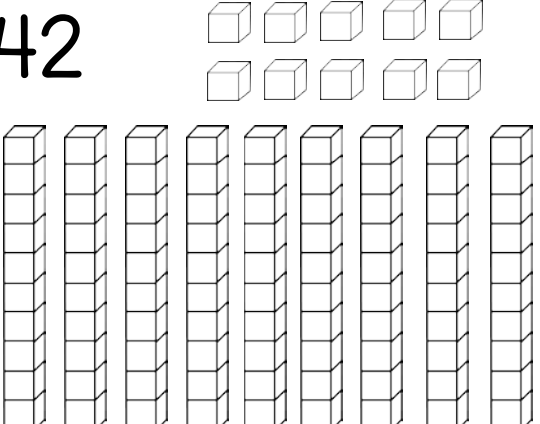
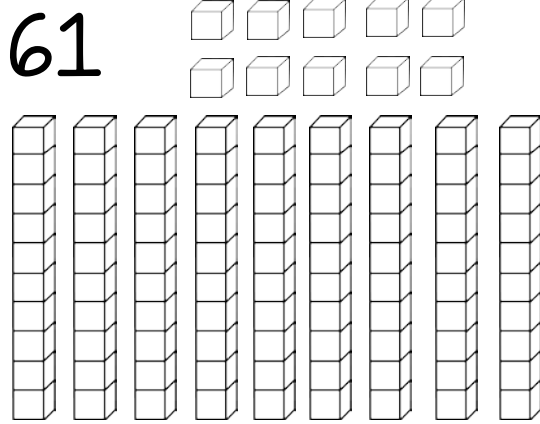
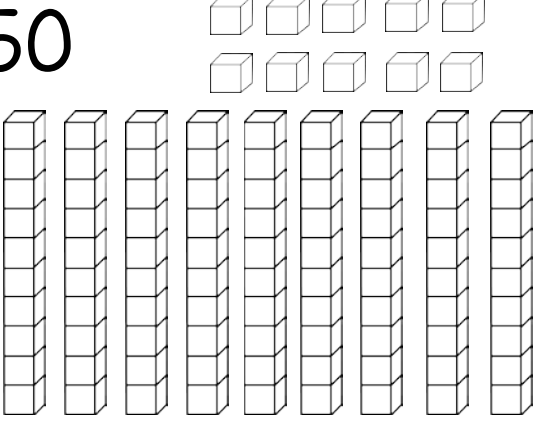
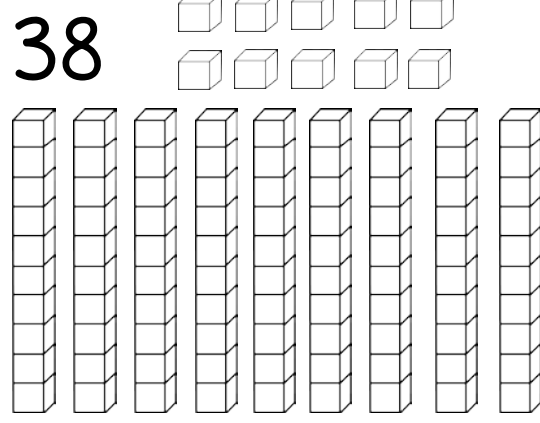


Name: _____




Color the Number

Color the tens and ones to show each number.

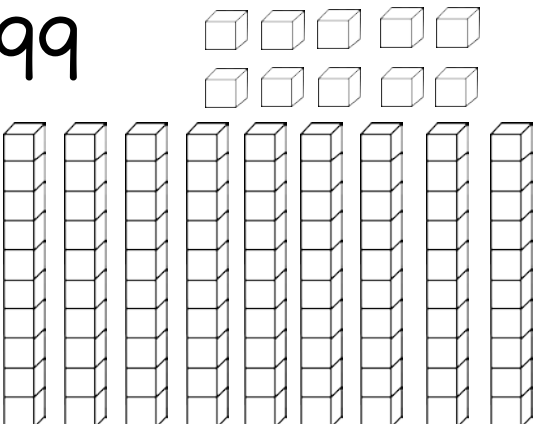

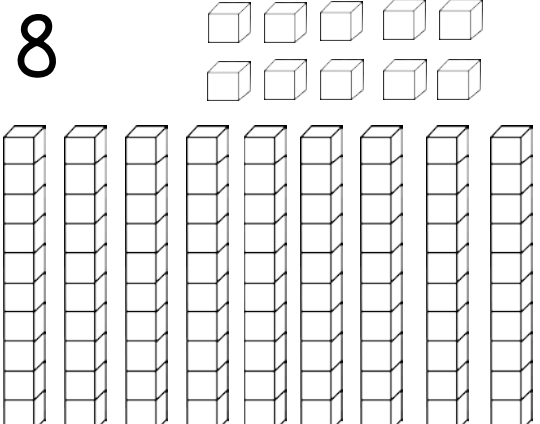
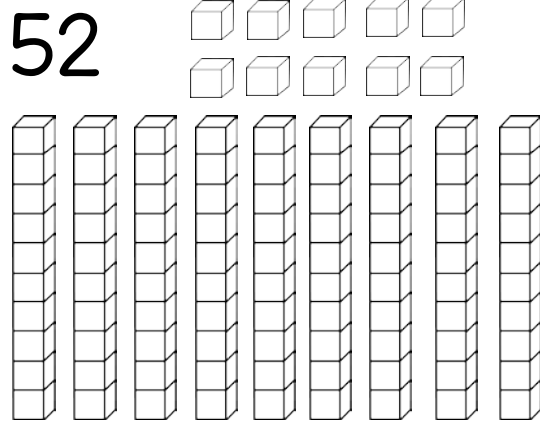
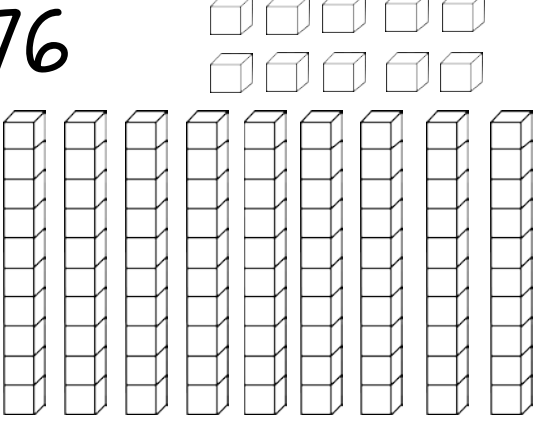
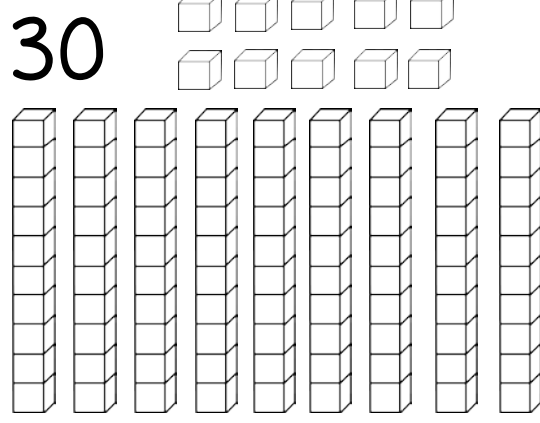
73 	29 
42 	61 
50 	38 

Name: _____




Color the Number

Color the tens and ones to show each number.

99 	17 
8 	52 
76 	30 

Name: _____

Tens and Ones



The number is 28.

How many tens and how many ones does the number have?

Tens	Ones

The number is 41.

How many tens and how many ones does the number have?

Tens	Ones

The number is 66.

How many tens and how many ones does the number have?

Tens	Ones


The number is 75.

How many tens and how many ones does the number have?

Tens	Ones

Name: _____

Tens and Ones



The number is 9.

How many tens and how many ones does the number have?

Tens	Ones

The number is 27.

How many tens and how many ones does the number have?

Tens	Ones

The number is 49.

How many tens and how many ones does the number have?


Tens	Ones

The number is 90.

How many tens and how many ones does the number have?

Tens	Ones

Name: _____



Hundreds, Tens and Ones

The number is 612.

How many hundreds, how many tens and how many ones does the number have?

Hundreds	Tens	Ones

The number is 835.

How many hundreds, how many tens and how many ones does the number have?

Hundreds	Tens	Ones

The number is 931.

How many hundreds, how many tens and how many ones does the number have?

Hundreds	Tens	Ones

The number is 507.

How many hundreds, how many tens and how many ones does the number have?

Hundreds	Tens	Ones

Name: _____



Hundreds, Tens and Ones

The number is 157.

How many hundreds, how many tens and how many ones does the number have?

Hundreds	Tens	Ones

The number is 924.

How many hundreds, how many tens and how many ones does the number have?

Hundreds	Tens	Ones

The number is 470.

How many hundreds, how many tens and how many ones does the number have?

Hundreds	Tens	Ones

The number is 704.

How many hundreds, how many tens and how many ones does the number have?

Hundreds	Tens	Ones

Name: _____



Count to 100

1			4				8		
		13			16			19	
21					26		28		
	32			35				39	
	42			45		47			50
			54		56		58		
61				65					70
	72					77			
		83					88		90
91						97			


Name: _____

Count to 100 by 2s



	2				6				
			14						20
							28		
	32								40
			44						
					56				
									70
	72				76				
							88		
					96				


Name: _____



Count to 100 by 5s

				5					10
				35					
				75					


Name: _____



Count to 20

1		3	
	6		
		11	
			16
	18		

Name: _____



Fill in the ten frames.


7

4

10

6

Name: _____



Fill in the ten frames.

3

8


2

5


Name: _____

Roll, Write & Tally

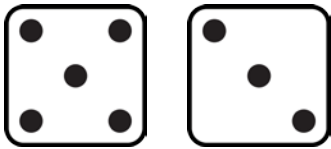



Roll the die	Write the number	Show the tally marks
	4	


Name: _____



Roll, Write & Tally

Roll two dice	Write the total	Show the tally marks
	8	

Name: _____



Circle the correct
number word.



six

four

eight



six

ten

zero



seven

one

three




five

two

nine

Name: _____



Circle the correct
number word.



six

four

three



seven

ten

zero



seven

one

two




five

four

nine

Name: _____

1 More & 1 Less



1 Less	The number is...	1 More
	8	
	1	
	7	
	3	
	5	
	6	
	4	

Name: _____


1 More & 1 Less



1 Less	The number is...	1 More
	8	
	14	
	3	
	16	
	10	
	12	
	9	

Name: _____

1 More & 1 Less



1 Less	The number is...	1 More
	29	
	35	
	71	
	80	
	56	
	63	
	48	

Name: _____


I More & I Less



I Less	The number is...	I More
	274	
	724	
	904	
	673	
	185	
	861	
	357	

Name: _____

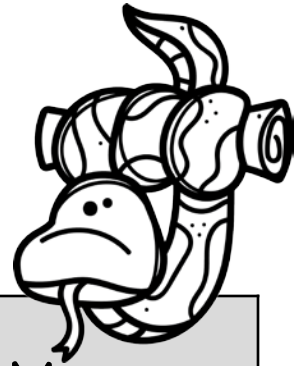
10 More & 10 Less



10 Less	The number is...	10 More
	82	
	35	
	80	
	43	
	67	
	24	
	76	

Name: _____


10 More & 10 Less



10 Less	The number is...	10 More
	714	
	923	
	165	
	307	
	753	
	824	
	407	

Name: _____

100 More & 100 Less



100 Less	The number is...	100 More
	300	
	700	
	200	
	900	
	600	
	100	
	500	


Name: _____

100 More & 100 Less



100 Less	The number is...	100 More
	724	
	246	
	817	
	358	
	437	
	651	
	563	


Name: _____



100 More & 100 Less

100 Less	The number is...	100 More
	6,246	
	7,964	
	2,165	
	5,074	
	3,231	
	8,546	
	1,064	

Name: _____



Before & After

	3	
--	---	--

	9	
--	---	--

	1	
--	---	--


	6	
--	---	--

	2	
--	---	--

	4	
--	---	--

	5	
--	---	--

	7	
--	---	--



	8	
--	---	--

Name: _____



Before & After

	24	
--	----	--

	68	
--	----	--

	41	
--	----	--


	50	
--	----	--

	77	
--	----	--

	16	
--	----	--

	80	
--	----	--

	33	
--	----	--



	65	
--	----	--

Name: _____

Before & After



	294	
--	-----	--

	316	
--	-----	--

	805	
--	-----	--


	528	
--	-----	--

	431	
--	-----	--

	147	
--	-----	--

	609	
--	-----	--










	942	
--	-----	--



	783	
--	-----	--


Name: _____

Complete the number bonds.



Name: _____

Addition



$$\begin{array}{r} 3 \\ + 2 \\ \hline \end{array}$$

$$\begin{array}{r} 5 \\ + 5 \\ \hline \end{array}$$

$$\begin{array}{r} 5 \\ + 6 \\ \hline \end{array}$$

$$\begin{array}{r} 2 \\ + 2 \\ \hline \end{array}$$

$$\begin{array}{r} 6 \\ + 5 \\ \hline \end{array}$$

$$\begin{array}{r} 4 \\ + 2 \\ \hline \end{array}$$


$$\begin{array}{r} 2 \\ + 6 \\ \hline \end{array}$$

$$\begin{array}{r} 5 \\ + 3 \\ \hline \end{array}$$

$$\begin{array}{r} 6 \\ + 2 \\ \hline \end{array}$$

Name: _____

Addition



$$\begin{array}{r} 10 \\ + 9 \\ \hline \end{array}$$

$$\begin{array}{r} 11 \\ + 6 \\ \hline \end{array}$$

$$\begin{array}{r} 12 \\ + 7 \\ \hline \end{array}$$

$$\begin{array}{r} 11 \\ + 7 \\ \hline \end{array}$$

$$\begin{array}{r} 12 \\ + 7 \\ \hline \end{array}$$

$$\begin{array}{r} 11 \\ + 6 \\ \hline \end{array}$$

$$\begin{array}{r} 12 \\ + 6 \\ \hline \end{array}$$

$$\begin{array}{r} 10 \\ + 9 \\ \hline \end{array}$$

$$\begin{array}{r} 12 \\ + 7 \\ \hline \end{array}$$

Name: _____

Addition



$$\begin{array}{r} 24 \\ + 33 \\ \hline \end{array}$$

$$\begin{array}{r} 46 \\ + 32 \\ \hline \end{array}$$

$$\begin{array}{r} 34 \\ + 25 \\ \hline \end{array}$$

$$\begin{array}{r} 35 \\ + 24 \\ \hline \end{array}$$

$$\begin{array}{r} 26 \\ + 31 \\ \hline \end{array}$$

$$\begin{array}{r} 35 \\ + 21 \\ \hline \end{array}$$

$$\begin{array}{r} 45 \\ + 24 \\ \hline \end{array}$$

$$\begin{array}{r} 26 \\ + 32 \\ \hline \end{array}$$

$$\begin{array}{r} 55 \\ + 32 \\ \hline \end{array}$$

Name: _____

Addition



$$\begin{array}{r} 65 \\ + 38 \\ \hline \end{array}$$

$$\begin{array}{r} 47 \\ + 29 \\ \hline \end{array}$$

$$\begin{array}{r} 38 \\ + 53 \\ \hline \end{array}$$

$$\begin{array}{r} 75 \\ + 18 \\ \hline \end{array}$$

$$\begin{array}{r} 46 \\ + 35 \\ \hline \end{array}$$

$$\begin{array}{r} 51 \\ + 29 \\ \hline \end{array}$$

$$\begin{array}{r} 46 \\ + 48 \\ \hline \end{array}$$

$$\begin{array}{r} 38 \\ + 17 \\ \hline \end{array}$$

$$\begin{array}{r} 26 \\ + 32 \\ \hline \end{array}$$

Name: _____



$$\begin{array}{r} 372 \\ +264 \\ \hline \end{array}$$

$$\begin{array}{r} 428 \\ +472 \\ \hline \end{array}$$

$$\begin{array}{r} 609 \\ +284 \\ \hline \end{array}$$

$$\begin{array}{r} 427 \\ +285 \\ \hline \end{array}$$

$$\begin{array}{r} 807 \\ +564 \\ \hline \end{array}$$

$$\begin{array}{r} 739 \\ +286 \\ \hline \end{array}$$

Name: _____



$$\begin{array}{r} 237 \\ +274 \\ \hline \end{array}$$

$$\begin{array}{r} 409 \\ +246 \\ \hline \end{array}$$

$$\begin{array}{r} 534 \\ +247 \\ \hline \end{array}$$


$$\begin{array}{r} 428 \\ +146 \\ \hline \end{array}$$

$$\begin{array}{r} 768 \\ +664 \\ \hline \end{array}$$

$$\begin{array}{r} 439 \\ +246 \\ \hline \end{array}$$

Name: _____

Subtraction



$$\begin{array}{r} 8 \\ - 3 \\ \hline \end{array}$$

$$\begin{array}{r} 9 \\ - 5 \\ \hline \end{array}$$

$$\begin{array}{r} 6 \\ - 1 \\ \hline \end{array}$$

$$\begin{array}{r} 2 \\ - 1 \\ \hline \end{array}$$

$$\begin{array}{r} 4 \\ - 2 \\ \hline \end{array}$$

$$\begin{array}{r} 5 \\ - 2 \\ \hline \end{array}$$


$$\begin{array}{r} 6 \\ - 2 \\ \hline \end{array}$$

$$\begin{array}{r} 7 \\ - 2 \\ \hline \end{array}$$

$$\begin{array}{r} 8 \\ - 4 \\ \hline \end{array}$$

Name: _____

Subtraction



$$\begin{array}{r} 14 \\ - 8 \\ \hline \end{array}$$

$$\begin{array}{r} 13 \\ - 6 \\ \hline \end{array}$$

$$\begin{array}{r} 10 \\ - 7 \\ \hline \end{array}$$

$$\begin{array}{r} 12 \\ - 9 \\ \hline \end{array}$$

$$\begin{array}{r} 15 \\ - 7 \\ \hline \end{array}$$

$$\begin{array}{r} 11 \\ - 6 \\ \hline \end{array}$$


$$\begin{array}{r} 12 \\ - 5 \\ \hline \end{array}$$

$$\begin{array}{r} 13 \\ - 8 \\ \hline \end{array}$$

$$\begin{array}{r} 14 \\ - 9 \\ \hline \end{array}$$

Name: _____

Subtraction



$$\begin{array}{r} 53 \\ - 21 \\ \hline \end{array}$$

$$\begin{array}{r} 85 \\ - 42 \\ \hline \end{array}$$

$$\begin{array}{r} 64 \\ - 32 \\ \hline \end{array}$$

$$\begin{array}{r} 66 \\ - 15 \\ \hline \end{array}$$

$$\begin{array}{r} 38 \\ - 22 \\ \hline \end{array}$$

$$\begin{array}{r} 64 \\ - 23 \\ \hline \end{array}$$

$$\begin{array}{r} 75 \\ - 23 \\ \hline \end{array}$$

$$\begin{array}{r} 28 \\ - 13 \\ \hline \end{array}$$

$$\begin{array}{r} 47 \\ - 21 \\ \hline \end{array}$$

Name: _____

Subtraction



$$\begin{array}{r} 81 \\ - 46 \\ \hline \end{array}$$

$$\begin{array}{r} 63 \\ - 24 \\ \hline \end{array}$$

$$\begin{array}{r} 54 \\ - 39 \\ \hline \end{array}$$

$$\begin{array}{r} 59 \\ - 27 \\ \hline \end{array}$$

$$\begin{array}{r} 65 \\ - 18 \\ \hline \end{array}$$

$$\begin{array}{r} 57 \\ - 29 \\ \hline \end{array}$$

$$\begin{array}{r} 73 \\ - 37 \\ \hline \end{array}$$

$$\begin{array}{r} 89 \\ - 38 \\ \hline \end{array}$$

$$\begin{array}{r} 61 \\ - 32 \\ \hline \end{array}$$

Name: _____


Write the number in different ways.



number form	word form	expanded form
14		
	seven	
		$10 + 3$
	nineteen	
9		
		$10 + 2$
	six	

Name: _____

Write the number in different ways.



number form	word form	expanded form
58		
	forty-six	
		$70+5$
	seventy-one	
37		
		$50 + 3$
	sixty-five	


Name: _____

Write the number in different ways.




number form	word form	expanded form
382		
	one hundred fifty-six	
		$500 + 40 + 7$
	eight hundred forty-nine	
270		
		$700 + 60 + 3$
	nine hundred seventy-three	

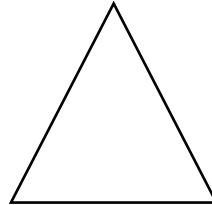
Name: _____



Name the Shape




circle
square
triangle



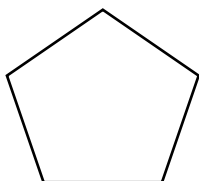
rectangle
square
triangle



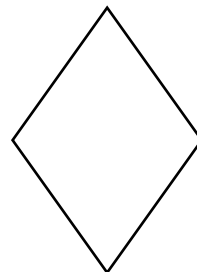
circle
rectangle
triangle



circle
square
oval




pentagon
square
triangle



square
parallelogram
triangle

Name: _____

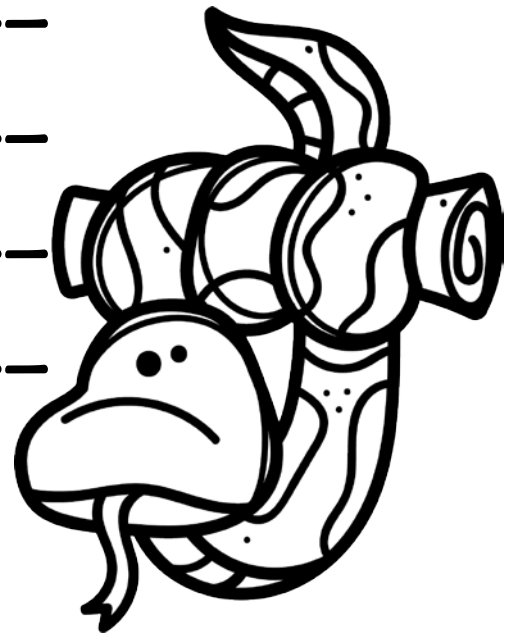


Write the words in ABC order.

flower canopy trees jaguar


snake rainforest frog sloth

1. _____
2. _____
3. _____
4. _____
5. _____
6. _____
7. _____
8. _____




Name: _____

- ☐ Color two frogs yellow.
- ☐ Color four butterflies blue.
- ☐ Color three flowers orange.
- ☐ Color one snake green.
- ☐ Color three leaves green.
- ☐ Color one flower red.



Name: _____

Practice your reading fluency.
Read each sentence
over and over.



- ☐ I see a yellow frog.
- ☐ Do you see a jaguar?
- ☐ The flower is orange.
- ☐ How fast is the snake?
- ☐ Can you find the bird?
- ☐ It is raining.
- ☐ Look at the tall tree!



Name: _____

Practice your reading fluency.
Read each sentence
over and over.




- ☐ Can you find the rainforest on the map?
- ☐ There are many colorful flowers.
- ☐ The jaguar is walking through the rainforest.
- ☐ The yellow frogs are very tiny.
- ☐ Do you see the snake hiding behind the plant?
- ☐ The forest is very green and full of animals.

Name: _____

Days of the Week

Write the day that is missing.



	Thursday	Friday
--	----------	--------

Friday		Sunday
--------	--	--------

Tuesday		Thursday
---------	--	----------

	Tuesday	Wednesday
--	---------	-----------

Saturday	Sunday	
----------	--------	--

Name: _____

Months of the Year

Write the month that is missing.



January		March
---------	--	-------

	May	June
--	-----	------

September	October	
-----------	---------	--

	April	May
--	-------	-----

June		August
------	--	--------

Name: _____

Sort the words.

mat

lake

tap

sat

game

flat

take


cab

map

cake

jam

case



short a	long a

Name: _____

Sort the words.

bet vet heat clean
bell read bed bed
meal team net well



short e	long e

Name: _____

Sort the words.

sit

tight

vine

flip

lit

dime

light

tide


chip

spin

pick

like

lime



short i	long i

Name: _____

Sort the words.

boat code dot soap
frog pop top hope
rock pack hose toad



short o	long o

Name: _____

Sort the words.



tub bun use cute
rub sub huge duck
buck blue hut glue

short u	long u

Name: _____

Sort the words.

wet

climb

jaguar

monkey

fast

fly

snake

fall

green

rainy

tree


jump



nouns	verbs	adjectives

Name: _____

Write the Upper Case Alphabet




A						
		J				
						U
				Z		

©www.thecurriculumcorner.com

Name: _____

Write the Upper Case Alphabet



A						
		J				
						U
				Z		

©www.thecurriculumcorner.com

Name: _____

Write the Lower Case Alphabet



a						
	i					
			r			
				z		

©www.thecurriculumcorner.com

Name: _____

Write the Lower Case Alphabet



a						
	i					
			r			
				z		

©www.thecurriculumcorner.com

Name: _____

Unscramble the mixed up sentences.
Write them correctly on the line.



the where rainforest is

trees the very tall are

many do see how animals you

fast jaguar can run very the

Write your own sentence about the rainforest.

Name: _____

The word is: forest

Draw a picture.

Write the word.

forest

Show the shape.



Unscramble the sentence.

--	--	--	--

©www.thecurriculumcorner.com

the

Where

rain
forest?

is

Name: _____

The word is: **flower**

Draw a picture.

Write the word.

flower

Show the shape.



Unscramble the sentence.

--	--	--	--

©www.thecurriculumcorner.com

orange.	flower	The	is
---------	--------	-----	----

Name: _____

The word is: **lemur**

Draw a picture.

Write the word.

lemur

Show the shape.



Unscramble the sentence.

--	--	--	--

©www.thecurriculumcorner.com

at

lemur.

Look







the

Name: _____

Roll & Write




Roll the dice. Write the word that matches the number you roll.







	rain		
	forest		
	frog		
	snake		
	spider		
	flower		

Name: _____

Roll & Read



Roll the dice. Write the word that matches the number you roll. Read the word. Color the box.







	rain	rain	rain
	forest	forest	forest
	frog	frog	frog
	snake	snake	snake
	spider	spider	spider
	flower	flower	flower

Name: _____




Roll & Write

Roll the dice. Write the word that matches the number you roll.







 the		
 of		
 and		
 a		
 to		
 in		

Name: _____

Roll & Write




Roll the dice. Write the word that matches the number you roll.







 is		
 you		
 that		
 it		
 he		
 was		

Name: _____

Roll & Write



Roll the dice. Write the word that matches the number you roll.







 for		
 on		
 are		
 as		
 with		
 his		

Name: _____

Roll & Write




Roll the dice. Write the word that matches the number you roll.







 they		
 I		
 at		
 be		
 this		
 have		

Name: _____

Roll & Write



Roll the dice. Write the word that matches the number you roll.

 from		
 or		
 one		
 had		
 by		
 words		

Name: _____

The Rainforest

This is what the
rainforest looks
like:

These are the
animals I see:

These are the
sounds I hear:

Something special
about the
rainforest is:

Name: _____


anteater




blue
morpho
butterfly



capybara



chameleon



golden
poison dart
frog




hoatzin bird



iguana












jaguar



leaf cutter
ant



Name: _____

<p>lemur</p> 	<p>macaw</p> 	<p>okapi</p> 
<p>piranha</p> 	<p>python snake</p> 	<p>red eyed tree frog</p> 
<p>sloth</p> 	<p>tapir</p> 	<p>toucan</p> 

Name: _____

Can you name nine rainforest animals?

Name: _____



Name: -----

Name: -----

Name: -----



Name: _____



Name: _____

Handwriting practice lines consisting of four sets of three horizontal lines (top solid, middle dashed, bottom solid).

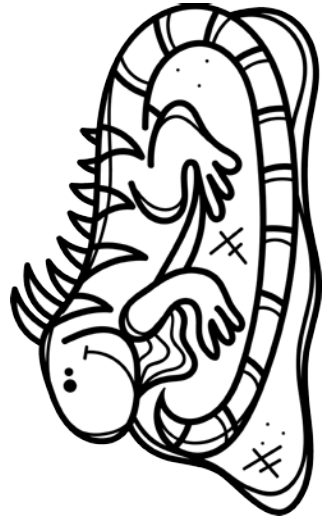


Name: _____

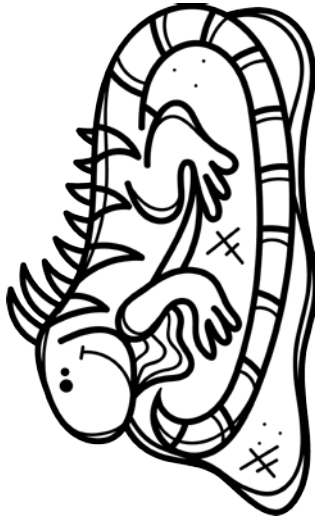


Name: _____

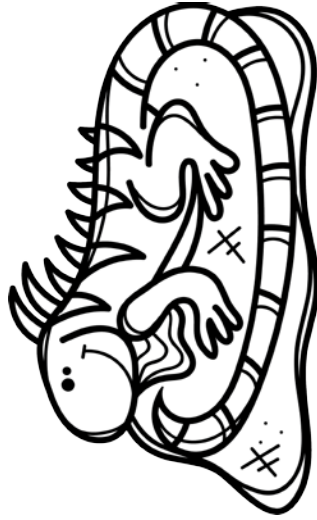
Name: -----



Name: _____



Name: -----



Name: _____




Name: _____



Handwriting practice lines consisting of four sets of three horizontal lines (top solid, middle dashed, bottom solid) for writing practice.


Name: _____




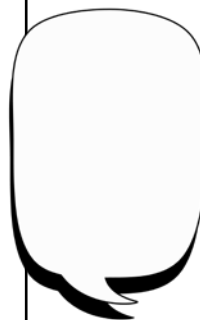
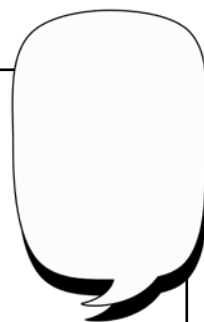
Name: _____



Name: _____



Name: _____



Name: _____

