

1.



$$\begin{array}{r} 4 \\ +8 \\ \hline \end{array}$$



©www.thecurriculumcorner.com

2.



$$\begin{array}{r} 5 \\ +5 \\ \hline \end{array}$$



©www.thecurriculumcorner.com

3.



$$\begin{array}{r} 3 \\ +5 \\ \hline \end{array}$$



©www.thecurriculumcorner.com

4.



$$\begin{array}{r} 6 \\ +0 \\ \hline \end{array}$$



©www.thecurriculumcorner.com

5.



$$\begin{array}{r} 10 \\ +8 \\ \hline \end{array}$$



©www.thecurriculumcorner.com

6.



$$\begin{array}{r} 8 \\ +8 \\ \hline \end{array}$$



©www.thecurriculumcorner.com

7.



$$\begin{array}{r} 10 \\ +10 \\ \hline \end{array}$$



©www.thecurriculumcorner.com

8.



$$\begin{array}{r} 7 \\ +6 \\ \hline \end{array}$$



©www.thecurriculumcorner.com

9.



$$\begin{array}{r} 4 \\ -3 \\ \hline \end{array}$$



©www.thecurriculumcorner.com

10.



$$\begin{array}{r} 7 \\ -5 \\ \hline \end{array}$$



©www.thecurriculumcorner.com

11.



$$\begin{array}{r} 9 \\ -6 \\ \hline \end{array}$$



©www.thecurriculumcorner.com

12.



$$\begin{array}{r} 10 \\ -5 \\ \hline \end{array}$$



©www.thecurriculumcorner.com

13.



$$\begin{array}{r} 8 \\ -4 \\ \hline \end{array}$$



©www.thecurriculumcorner.com

14.



$$\begin{array}{r} 7 \\ -3 \\ \hline \end{array}$$



©www.thecurriculumcorner.com

15.



$$\begin{array}{r} 5 \\ -2 \\ \hline \end{array}$$



©www.thecurriculumcorner.com

16.



$$\begin{array}{r} 10 \\ -8 \\ \hline \end{array}$$



©www.thecurriculumcorner.com

17.



$$2 + 2 + 1$$



©www.thecurriculumcorner.com

18.



$$3 + 2 + 4$$



©www.thecurriculumcorner.com

19.



$$5 + 3 + 2$$



©www.thecurriculumcorner.com

20.



$$1 + 0 + 3$$



©www.thecurriculumcorner.com

21.



$$6 + 1 + 1$$



©www.thecurriculumcorner.com

22.



$$3 + 1 + 4$$



©www.thecurriculumcorner.com

23.



$$5 + 2 + 3$$



©www.thecurriculumcorner.com

24.



$$2 + 6 + 1$$



©www.thecurriculumcorner.com

1.



$$\begin{array}{r} 4 \\ +8 \\ \hline \end{array}$$



©www.thecurriculumcorner.com

2.



$$\begin{array}{r} 5 \\ +5 \\ \hline \end{array}$$



©www.thecurriculumcorner.com

3.



$$\begin{array}{r} 3 \\ +5 \\ \hline \end{array}$$



©www.thecurriculumcorner.com

4.



$$\begin{array}{r} 6 \\ +0 \\ \hline \end{array}$$



©www.thecurriculumcorner.com

5.



$$\begin{array}{r} 10 \\ +8 \\ \hline \end{array}$$



©www.thecurriculumcorner.com

6.



$$\begin{array}{r} 8 \\ +8 \\ \hline \end{array}$$



©www.thecurriculumcorner.com

7.



$$\begin{array}{r} 10 \\ +10 \\ \hline \end{array}$$




©www.thecurriculumcorner.com

8.



$$\begin{array}{r} 7 \\ +6 \\ \hline \end{array}$$



©www.thecurriculumcorner.com

9.



$$\begin{array}{r} 4 \\ -3 \\ \hline \end{array}$$



©www.thecurriculumcorner.com

10.



$$\begin{array}{r} 7 \\ -5 \\ \hline \end{array}$$



©www.thecurriculumcorner.com

11.



$$\begin{array}{r} 9 \\ -6 \\ \hline \end{array}$$



©www.thecurriculumcorner.com

12.



$$\begin{array}{r} 10 \\ -5 \\ \hline \end{array}$$



©www.thecurriculumcorner.com

13.



$$\begin{array}{r} 8 \\ -4 \\ \hline \end{array}$$



©www.thecurriculumcorner.com

14.



$$\begin{array}{r} 7 \\ -3 \\ \hline \end{array}$$



©www.thecurriculumcorner.com

15.



$$\begin{array}{r} 5 \\ -2 \\ \hline \end{array}$$



©www.thecurriculumcorner.com

16.



$$\begin{array}{r} 10 \\ -8 \\ \hline \end{array}$$



©www.thecurriculumcorner.com

17.



$$2 + 2 + 1$$



©www.thecurriculumcorner.com

18.



$$3 + 2 + 4$$



©www.thecurriculumcorner.com

19.



$$5 + 3 + 2$$



©www.thecurriculumcorner.com

20.



$$1 + 0 + 3$$



©www.thecurriculumcorner.com

21.



$$6 + 1 + 1$$



©www.thecurriculumcorner.com

22.



$$3 + 1 + 4$$



©www.thecurriculumcorner.com

23.



$$5 + 2 + 3$$



©www.thecurriculumcorner.com

24.



$$2 + 6 + 1$$



©www.thecurriculumcorner.com

©www.thecurriculumcorner.com

©www.thecurriculumcorner.com

©www.thecurriculumcorner.com

©www.thecurriculumcorner.com

©www.thecurriculumcorner.com

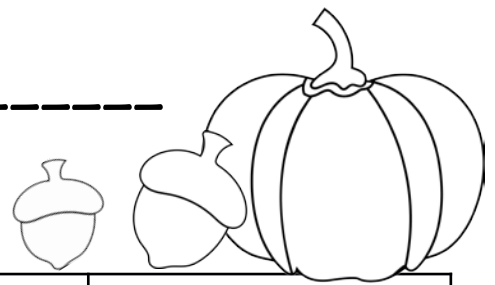
©www.thecurriculumcorner.com

©www.thecurriculumcorner.com

©www.thecurriculumcorner.com

Name: _____

FALL COMPUTATION SCOOT




1.	2.	3.	4.
5.	6.	7.	8.
9.	10.	11.	12.

13.	14.	15.	16.
17.	18.	19.	20.
21.	22.	23.	24.

Name: _____

FALL COMPUTATION PRACTICE



My task is to complete:
