

Name: \_\_\_\_\_

## DOMINO ADDITION

Pick a domino. Draw the dots to show your domino. Write an addition sentence and find the sum.




\_\_\_ + \_\_\_ = \_\_\_



\_\_\_ + \_\_\_ = \_\_\_



\_\_\_ + \_\_\_ = \_\_\_



\_\_\_ + \_\_\_ = \_\_\_



\_\_\_ + \_\_\_ = \_\_\_



\_\_\_ + \_\_\_ = \_\_\_



\_\_\_ + \_\_\_ = \_\_\_



\_\_\_ + \_\_\_ = \_\_\_



\_\_\_ + \_\_\_ = \_\_\_



\_\_\_ + \_\_\_ = \_\_\_



\_\_\_ + \_\_\_ = \_\_\_



\_\_\_ + \_\_\_ = \_\_\_

Name: \_\_\_\_\_

## DOMINO ADDITION

Pick two dominoes. Draw the dots to show your dominos. Write an addition sentence and find the sum.



+

\_\_\_\_\_



+

\_\_\_\_\_



+

\_\_\_\_\_



+

\_\_\_\_\_



+

\_\_\_\_\_



+

\_\_\_\_\_

Name: \_\_\_\_\_

## DOMINO SUBTRACTION

Pick a domino. Draw the dots to show your domino. Write a subtraction sentence and find the difference.



\_\_\_ - \_\_\_ = \_\_\_



\_\_\_ - \_\_\_ = \_\_\_



\_\_\_ - \_\_\_ = \_\_\_



\_\_\_ - \_\_\_ = \_\_\_



\_\_\_ - \_\_\_ = \_\_\_



\_\_\_ - \_\_\_ = \_\_\_



\_\_\_ - \_\_\_ = \_\_\_



\_\_\_ - \_\_\_ = \_\_\_



\_\_\_ - \_\_\_ = \_\_\_



\_\_\_ - \_\_\_ = \_\_\_



\_\_\_ - \_\_\_ = \_\_\_



\_\_\_ - \_\_\_ = \_\_\_

Name: \_\_\_\_\_

## DOMINO SUBTRACTION

Pick two dominoes. Draw the dots to show your dominos. Write a subtraction sentence and find the difference.



-

\_\_\_\_\_



-

\_\_\_\_\_



-

\_\_\_\_\_



-

\_\_\_\_\_



-

\_\_\_\_\_



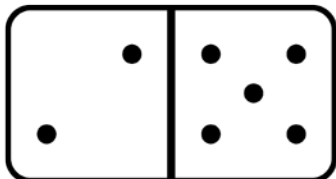
-

\_\_\_\_\_

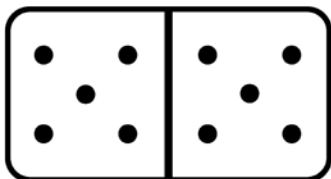
Name: \_\_\_\_\_

## DOMINO ADDITION

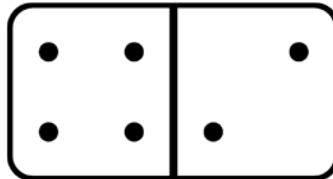
Count the dots. Write an addition sentence and find the sum.



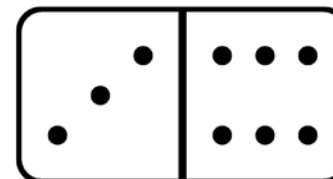
$$\text{---} + \text{---} = \text{---}$$



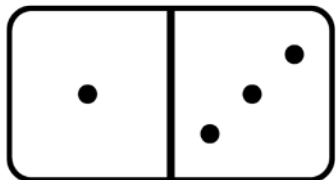
$$\text{---} + \text{---} = \text{---}$$



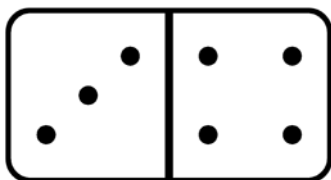
$$\text{---} + \text{---} = \text{---}$$



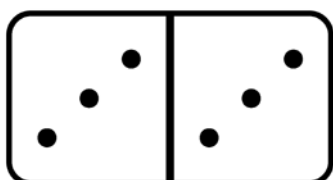
$$\text{---} + \text{---} = \text{---}$$



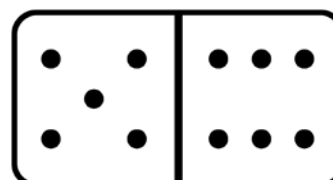
$$\text{---} + \text{---} = \text{---}$$



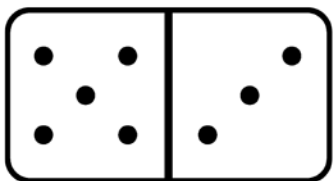
$$\text{---} + \text{---} = \text{---}$$



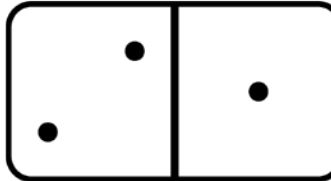
$$\text{---} + \text{---} = \text{---}$$



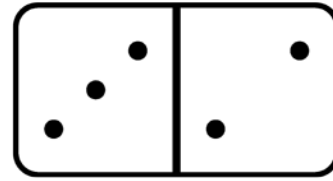
$$\text{---} + \text{---} = \text{---}$$



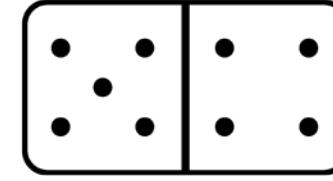
$$\text{---} + \text{---} = \text{---}$$



$$\text{---} + \text{---} = \text{---}$$



$$\text{---} + \text{---} = \text{---}$$

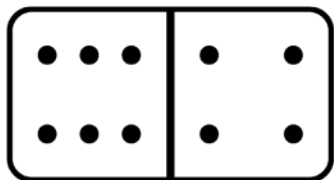


$$\text{---} + \text{---} = \text{---}$$

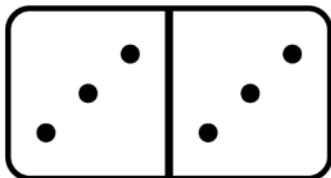
Name: \_\_\_\_\_

## DOMINO SUBTRACTION

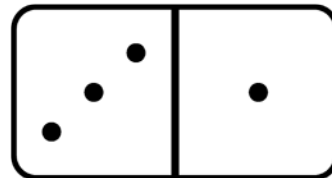
Count the dots. Write a subtraction sentence and find the difference.



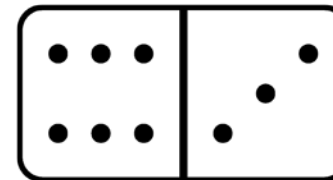
\_\_\_ - \_\_\_ = \_\_\_



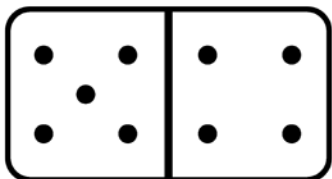
\_\_\_ - \_\_\_ = \_\_\_



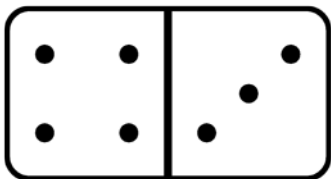
\_\_\_ - \_\_\_ = \_\_\_



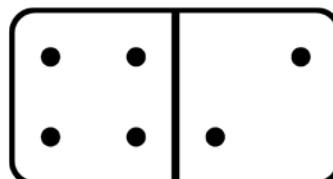
\_\_\_ - \_\_\_ = \_\_\_



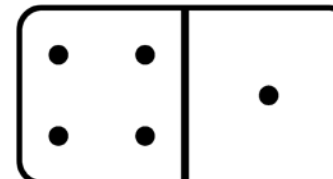
\_\_\_ - \_\_\_ = \_\_\_



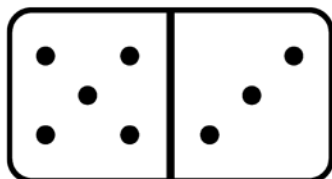
\_\_\_ - \_\_\_ = \_\_\_



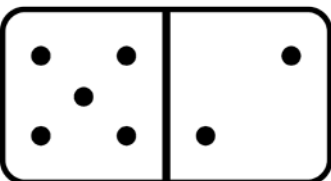
\_\_\_ - \_\_\_ = \_\_\_



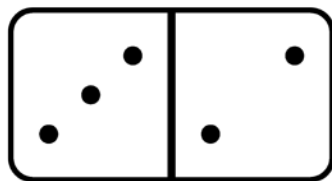
\_\_\_ - \_\_\_ = \_\_\_



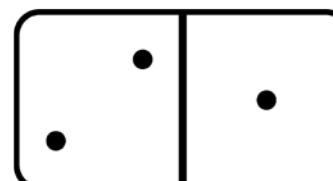
\_\_\_ - \_\_\_ = \_\_\_



\_\_\_ - \_\_\_ = \_\_\_



\_\_\_ - \_\_\_ = \_\_\_

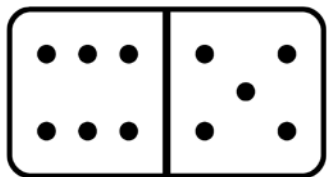
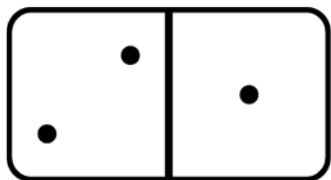


\_\_\_ - \_\_\_ = \_\_\_

Name: \_\_\_\_\_

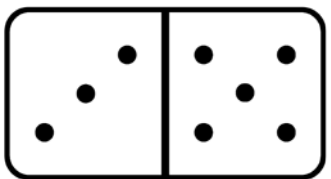
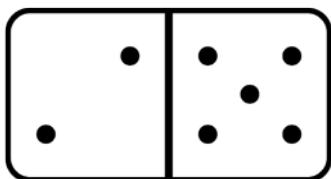
## DOMINO ADDITION

Count the dots on the dominoes. Write an addition sentence and find the sum.



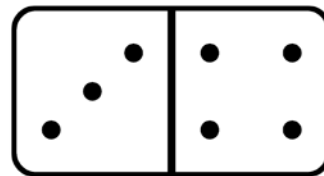
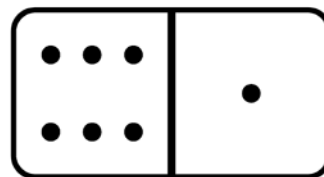
+

\_\_\_\_\_



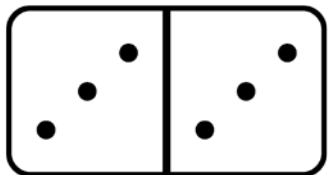
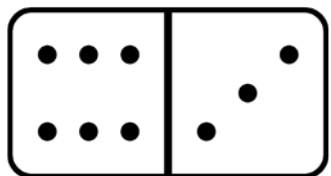
+

\_\_\_\_\_



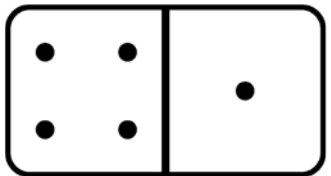
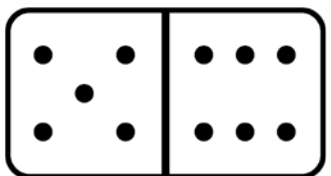
+

\_\_\_\_\_



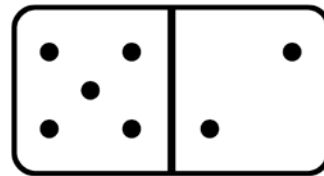
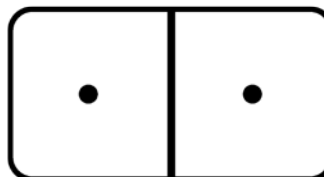
+

\_\_\_\_\_



+

\_\_\_\_\_



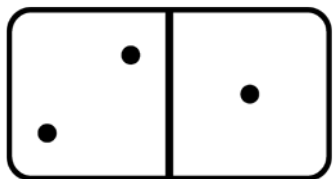
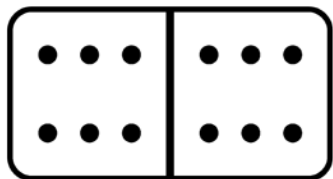
+

\_\_\_\_\_

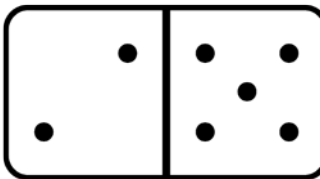
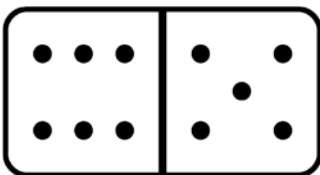
Name: \_\_\_\_\_

## DOMINO SUBTRACTION

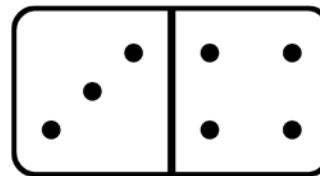
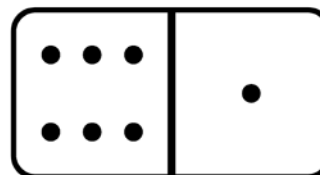
Count the dots on the dominoes. Write a subtraction sentence and find the difference.



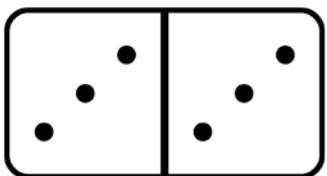
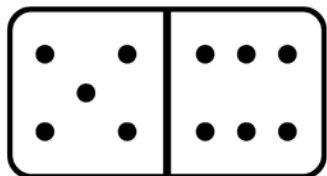
—  
\_\_\_\_\_



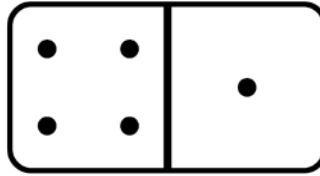
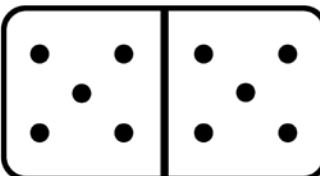
—  
\_\_\_\_\_



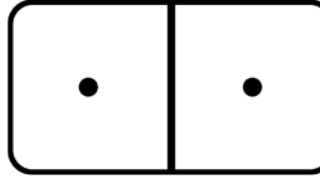
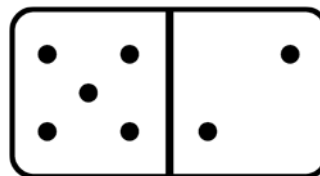
—  
\_\_\_\_\_



—  
\_\_\_\_\_



—  
\_\_\_\_\_



—  
\_\_\_\_\_