



1.

$$8 + \square = 12$$



©www.thecurriculumcorner.com

2.

$$\square + 3 = 8$$


©www.thecurriculumcorner.com

3.

$$\square + 7 = 11$$



©www.thecurriculumcorner.com

4.

$$5 + \square = 9$$



©www.thecurriculumcorner.com

5.

$$6 + \square = 12$$



©www.thecurriculumcorner.com

6.

$$\square + 9 = 14$$



©www.thecurriculumcorner.com

7.

$$3 + \square = 11$$


©www.thecurriculumcorner.com

8.

$$\square + 10 = 17$$


©www.thecurriculumcorner.com

9.



$$9 + \square = 13$$

©www.thecurriculumcorner.com

10.



$$\square + 9 = 14$$



©www.thecurriculumcorner.com

11.



$$\square + 7 = 9$$



©www.thecurriculumcorner.com

12.

$$8 + \square = 14$$



©www.thecurriculumcorner.com

13.

$$6 + \square = 10$$



©www.thecurriculumcorner.com

14.



$$\square + 4 = 6$$

©www.thecurriculumcorner.com

15.

$$8 + \square = 10$$



©www.thecurriculumcorner.com

16.




$$\square + 2 = 7$$




©www.thecurriculumcorner.com

17.

$$5 + \square = 14$$



©www.thecurriculumcorner.com

18.

$$\square + 4 = 13$$


©www.thecurriculumcorner.com

19.

$$\square + 5 = 8$$



©www.thecurriculumcorner.com

20.

$$3 + \square = 5$$



©www.thecurriculumcorner.com

21.

$$2 + \square = 8$$



©www.thecurriculumcorner.com

22.

$$\square + 8 = 16$$



©www.thecurriculumcorner.com

23.

$$9 + \square = 12$$



©www.thecurriculumcorner.com

24.

$$\square + 6 = 10$$



©www.thecurriculumcorner.com

25.

$$3 + \square = 4$$



©www.thecurriculumcorner.com

26.

$$\square + 9 = 15$$


©www.thecurriculumcorner.com

27.

$$\square + 7 = 12$$



©www.thecurriculumcorner.com

28.

$$7 + \square = 8$$



©www.thecurriculumcorner.com

29.

$$6 + \square = 13$$



©www.thecurriculumcorner.com

30.

$$\square + 2 = 4$$



©www.thecurriculumcorner.com

31.

$$9 + \square = 9$$



©www.thecurriculumcorner.com

32.

$$\square + 3 = 12$$



©www.thecurriculumcorner.com

1.

$$8 + \square = 12$$



©www.thecurriculumcorner.com

2.

$$\square + 3 = 8$$



©www.thecurriculumcorner.com

3.

$$\square + 7 = 11$$



©www.thecurriculumcorner.com

4.

$$5 + \square = 9$$



©www.thecurriculumcorner.com

5.

$$6 + \square = 12$$



©www.thecurriculumcorner.com

6.

$$\square + 9 = 14$$



©www.thecurriculumcorner.com

7.

$$3 + \square = 11$$


©www.thecurriculumcorner.com

8.

$$\square + 10 = 17$$


©www.thecurriculumcorner.com

9.



$$9 + \square = 13$$

©www.thecurriculumcorner.com

10.



$$\square + 9 = 14$$

©www.thecurriculumcorner.com

11.



$$\square + 7 = 9$$

©www.thecurriculumcorner.com

12.



$$8 + \square = 14$$

©www.thecurriculumcorner.com

13.



$$6 + \square = 10$$

©www.thecurriculumcorner.com

14.



$$\square + 4 = 6$$

©www.thecurriculumcorner.com

15.



$$8 + \square = 10$$

©www.thecurriculumcorner.com


16.



$$\square + 2 = 7$$


©www.thecurriculumcorner.com

17.

$$5 + \square = 14$$



©www.thecurriculumcorner.com

18.

$$\square + 4 = 13$$



©www.thecurriculumcorner.com

19.

$$\square + 5 = 8$$



©www.thecurriculumcorner.com

20.

$$3 + \square = 5$$



©www.thecurriculumcorner.com

21.

$$2 + \square = 8$$



©www.thecurriculumcorner.com

22.

$$\square + 8 = 16$$



©www.thecurriculumcorner.com

23.

$$9 + \square = 12$$



©www.thecurriculumcorner.com

24.

$$\square + 6 = 10$$



©www.thecurriculumcorner.com

25.


$$3 + \square = 4$$


©www.thecurriculumcorner.com

26.


$$\square + 9 = 15$$

©www.thecurriculumcorner.com

27.


$$\square + 7 = 12$$

©www.thecurriculumcorner.com

28.

$$7 + \square = 8$$



©www.thecurriculumcorner.com


29.

$$6 + \square = 13$$



©www.thecurriculumcorner.com

30.


$$\square + 2 = 4$$

©www.thecurriculumcorner.com

31.

$$9 + \square = 9$$



©www.thecurriculumcorner.com


32.

$$\square + 3 = 12$$




©www.thecurriculumcorner.com


Name: _____



Missing Addends




1.	2.	3.	4.
5.	6.	7.	8.
9.	10.	11.	12.
13.	14.	15.	16.





17.	18.	19.	20.
21.	22.	23.	24.
25.	26.	27.	28.
29.	30.	31.	32.






Name: _____



Missing Addends

Pick a card. Write the
card number.
Find the missing addend.

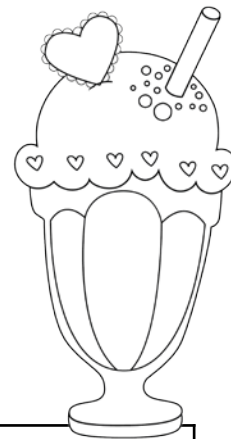





Name: _____



Missing Addends



Pick a card. Write the card number.
Find the missing addend.



Name: _____



Missing Addends

Pick a card. Write the card number. Find the missing addend.



©www.thecurriculumcorner.com

Name: _____




Missing Addends


Pick a card. Write the card number. Find the missing addend.




©www.thecurriculumcorner.com



ANSWER KEY



1. 4	2. 5	3. 4	4. 4
5. 6	6. 5	7. 8	8. 7
9. 4	10. 5	11. 2	12. 6
13. 4	14. 2	15. 2	16. 5





17. 9	18. 9	19. 3	20. 4
21. 6	22. 8	23. 3	24. 4
25. 1	26. 6	27. 5	28. 1
29. 7	30. 2	31. 0	32. 9

