


4


2


n





LD









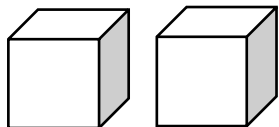


Name: _____

Roll the Dice!

Directions: Roll 2 dice. Write the digits. Write the number. Tell how many tens and ones there are. Find the value of each digit.

I rolled:



The number I created is:

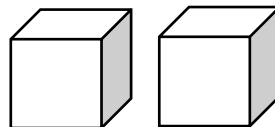
There are:

___tens ___ones

The tens are worth: _____

The ones are worth: _____

I rolled:



The number I created is:

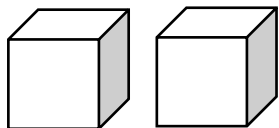
There are:

___tens ___ones

The tens are worth: _____

The ones are worth: _____

I rolled:



The number I created is:

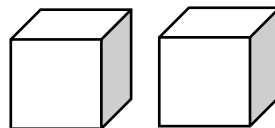
There are:

___tens ___ones

The tens are worth: _____

The ones are worth: _____

I rolled:



The number I created is:

There are:

___tens ___ones

The tens are worth: _____

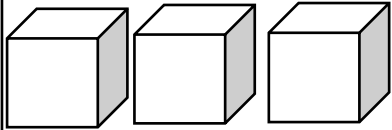
The ones are worth: _____

Name: _____

Roll the Dice!

Directions: Roll 3 dice. Write the digits. Write the number. Tell how many hundreds, tens and ones there are. Find the value of each digit.

I rolled:



The number I created is:

There are:

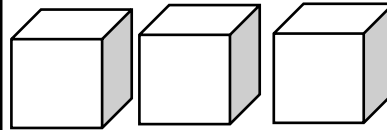
___ hundreds ___ tens ___ ones

The hundreds are worth: _____

The tens are worth: _____

The ones are worth: _____

I rolled:



The number I created is:

There are:

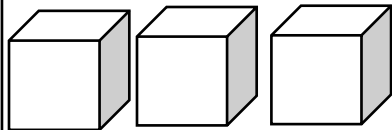
___ hundreds ___ tens ___ ones

The hundreds are worth: _____

The tens are worth: _____

The ones are worth: _____

I rolled:



The number I created is:

There are:

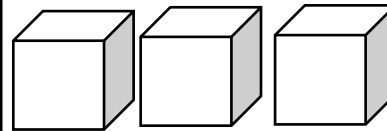
___ hundreds ___ tens ___ ones

The hundreds are worth: _____

The tens are worth: _____

The ones are worth: _____

I rolled:



The number I created is:

There are:

___ hundreds ___ tens ___ ones

The hundreds are worth: _____

The tens are worth: _____

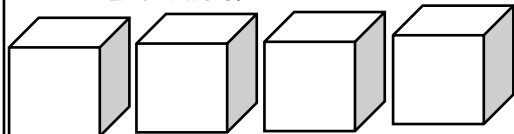
The ones are worth: _____

Name: _____

Roll the Dice!

Directions: Roll 4 dice. Write the digits. Write the number. Tell how many thousands, hundreds, tens and ones there are. Find the value of each digit.

I rolled:



The number I created is: _____

There are:

___ thousands ___ hundreds ___ tens ___ ones

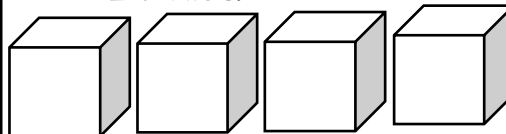
The thousands are worth: _____

The hundreds are worth: _____

The tens are worth: _____

The ones are worth: _____

I rolled:



The number I created is: _____

There are:

___ thousands ___ hundreds ___ tens ___ ones

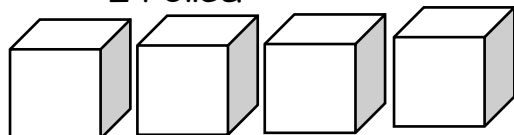
The thousands are worth: _____

The hundreds are worth: _____

The tens are worth: _____

The ones are worth: _____

I rolled:



The number I created is: _____

There are:

___ thousands ___ hundreds ___ tens ___ ones

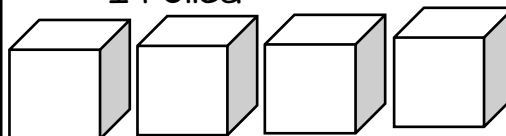
The thousands are worth: _____

The hundreds are worth: _____

The tens are worth: _____

The ones are worth: _____

I rolled:



The number I created is: _____

There are:

___ thousands ___ hundreds ___ tens ___ ones

The thousands are worth: _____

The hundreds are worth: _____

The tens are worth: _____

The ones are worth: _____

Name: _____

Counting Tens and Ones

Directions: Open your bag and count the tens and ones. Find the value of each digit. Write the number tens and ones make.

1. There are ____ tens. There are ____ ones. The tens are worth: ____ The ones are worth: ____ The number is: ____	2. There are ____ tens. There are ____ ones. The tens are worth: ____ The ones are worth: ____ The number is: ____	3. There are ____ tens. There are ____ ones. The tens are worth: ____ The ones are worth: ____ The number is: ____
4. There are ____ tens. There are ____ ones. The tens are worth: ____ The ones are worth: ____ The number is: ____	5. There are ____ tens. There are ____ ones. The tens are worth: ____ The ones are worth: ____ The number is: ____	6. There are ____ tens. There are ____ ones. The tens are worth: ____ The ones are worth: ____ The number is: ____
7. There are ____ tens. There are ____ ones. The tens are worth: ____ The ones are worth: ____ The number is: ____	8. There are ____ tens. There are ____ ones. The tens are worth: ____ The ones are worth: ____ The number is: ____	9. There are ____ tens. There are ____ ones. The tens are worth: ____ The ones are worth: ____ The number is: ____

10. There are ____ tens.
There are ____ ones.
The tens are worth: ____
The ones are worth: ____
The number is: ____

11. There are ____ tens.
There are ____ ones.
The tens are worth: ____
The ones are worth: ____
The number is: ____

12. There are ____ tens.
There are ____ ones.
The tens are worth: ____
The ones are worth: ____
The number is: ____

13. There are ____ tens.
There are ____ ones.
The tens are worth: ____
The ones are worth: ____
The number is: ____

14. There are ____ tens.
There are ____ ones.
The tens are worth: ____
The ones are worth: ____
The number is: ____

15. There are ____ tens.
There are ____ ones.
The tens are worth: ____
The ones are worth: ____
The number is: ____

16. There are ____ tens.
There are ____ ones.
The tens are worth: ____
The ones are worth: ____
The number is: ____

17. There are ____ tens.
There are ____ ones.
The tens are worth: ____
The ones are worth: ____
The number is: ____

18. There are ____ tens.
There are ____ ones.
The tens are worth: ____
The ones are worth: ____
The number is: ____

Name: _____

Counting Tens and Ones

Directions: Open your bag and count the tens and ones. Find the value of each digit. Write the number tens and ones make. Write the word form of the number.

1. There are ____ tens.
There are ____ ones.
The tens are worth: ____
The ones are worth: ____
The number is: ____
The number word is: _____

2. There are ____ tens.
There are ____ ones.
The tens are worth: ____
The ones are worth: ____
The number is: ____
The number word is: _____

3. There are ____ tens.
There are ____ ones.
The tens are worth: ____
The ones are worth: ____
The number is: ____
The number word is: _____

4. There are ____ tens.
There are ____ ones.
The tens are worth: ____
The ones are worth: ____
The number is: ____
The number word is: _____

5. There are ____ tens.
There are ____ ones.
The tens are worth: ____
The ones are worth: ____
The number is: ____
The number word is: _____

6. There are ____ tens.
There are ____ ones.
The tens are worth: ____
The ones are worth: ____
The number is: ____
The number word is: _____

7. There are ____ tens.
There are ____ ones.
The tens are worth: ____
The ones are worth: ____
The number is: ____
The number word is: _____

8. There are ____ tens.
There are ____ ones.
The tens are worth: ____
The ones are worth: ____
The number is: ____
The number word is: _____

9. There are ____ tens.
There are ____ ones.
The tens are worth: ____
The ones are worth: ____
The number is: ____
The number word is: _____

<p>10. There are ____ tens. There are ____ ones. The tens are worth: ____ The ones are worth: ____ The number is: ____ The number word is: ____</p>	<p>11. There are ____ tens. There are ____ ones. The tens are worth: ____ The ones are worth: ____ The number is: ____ The number word is: ____</p>	<p>12. There are ____ tens. There are ____ ones. The tens are worth: ____ The ones are worth: ____ The number is: ____ The number word is: ____</p>
<p>13. There are ____ tens. There are ____ ones. The tens are worth: ____ The ones are worth: ____ The number is: ____ The number word is: ____</p>	<p>14. There are ____ tens. There are ____ ones. The tens are worth: ____ The ones are worth: ____ The number is: ____ The number word is: ____</p>	<p>15. There are ____ tens. There are ____ ones. The tens are worth: ____ The ones are worth: ____ The number is: ____ The number word is: ____</p>
<p>16. There are ____ tens. There are ____ ones. The tens are worth: ____ The ones are worth: ____ The number is: ____ The number word is: ____</p>	<p>17. There are ____ tens. There are ____ ones. The tens are worth: ____ The ones are worth: ____ The number is: ____ The number word is: ____</p>	<p>18. There are ____ tens. There are ____ ones. The tens are worth: ____ The ones are worth: ____ The number is: ____ The number word is: ____</p>

Name: _____

Counting Hundreds, Tens and Ones

Directions: Open your bag and count the hundreds, tens and ones. Find the value of each digit. Write the number the hundreds, tens and ones make.

1. There are ____ hundreds. There are ____ tens. There are ____ ones. The hundreds are worth: ____ The tens are worth: ____ The ones are worth: ____ The number is: ____	2. There are ____ hundreds. There are ____ tens. There are ____ ones. The hundreds are worth: ____ The tens are worth: ____ The ones are worth: ____ The number is: ____	3. There are ____ hundreds. There are ____ tens. There are ____ ones. The hundreds are worth: ____ The tens are worth: ____ The ones are worth: ____ The number is: ____
4. There are ____ hundreds. There are ____ tens. There are ____ ones. The hundreds are worth: ____ The tens are worth: ____ The ones are worth: ____ The number is: ____	5. There are ____ hundreds. There are ____ tens. There are ____ ones. The hundreds are worth: ____ The tens are worth: ____ The ones are worth: ____ The number is: ____	6. There are ____ hundreds. There are ____ tens. There are ____ ones. The hundreds are worth: ____ The tens are worth: ____ The ones are worth: ____ The number is: ____
7. There are ____ hundreds. There are ____ tens. There are ____ ones. The hundreds are worth: ____ The tens are worth: ____ The ones are worth: ____ The number is: ____	8. There are ____ hundreds. There are ____ tens. There are ____ ones. The hundreds are worth: ____ The tens are worth: ____ The ones are worth: ____ The number is: ____	9. There are ____ hundreds. There are ____ tens. There are ____ ones. The hundreds are worth: ____ The tens are worth: ____ The ones are worth: ____ The number is: ____

<p>10.</p> <p>There are ____ hundreds.</p> <p>There are ____ tens.</p> <p>There are ____ ones.</p> <p>The hundreds are worth: ____</p> <p>The tens are worth: ____</p> <p>The ones are worth: ____</p> <p>The number is: ____</p>	<p>11.</p> <p>There are ____ hundreds.</p> <p>There are ____ tens.</p> <p>There are ____ ones.</p> <p>The hundreds are worth: ____</p> <p>The tens are worth: ____</p> <p>The ones are worth: ____</p> <p>The number is: ____</p>	<p>12.</p> <p>There are ____ hundreds.</p> <p>There are ____ tens.</p> <p>There are ____ ones.</p> <p>The hundreds are worth: ____</p> <p>The tens are worth: ____</p> <p>The ones are worth: ____</p> <p>The number is: ____</p>
<p>13.</p> <p>There are ____ hundreds.</p> <p>There are ____ tens.</p> <p>There are ____ ones.</p> <p>The hundreds are worth: ____</p> <p>The tens are worth: ____</p> <p>The ones are worth: ____</p> <p>The number is: ____</p>	<p>14.</p> <p>There are ____ hundreds.</p> <p>There are ____ tens.</p> <p>There are ____ ones.</p> <p>The hundreds are worth: ____</p> <p>The tens are worth: ____</p> <p>The ones are worth: ____</p> <p>The number is: ____</p>	<p>15.</p> <p>There are ____ hundreds.</p> <p>There are ____ tens.</p> <p>There are ____ ones.</p> <p>The hundreds are worth: ____</p> <p>The tens are worth: ____</p> <p>The ones are worth: ____</p> <p>The number is: ____</p>
<p>16.</p> <p>There are ____ hundreds.</p> <p>There are ____ tens.</p> <p>There are ____ ones.</p> <p>The hundreds are worth: ____</p> <p>The tens are worth: ____</p> <p>The ones are worth: ____</p> <p>The number is: ____</p>	<p>17.</p> <p>There are ____ hundreds.</p> <p>There are ____ tens.</p> <p>There are ____ ones.</p> <p>The hundreds are worth: ____</p> <p>The tens are worth: ____</p> <p>The ones are worth: ____</p> <p>The number is: ____</p>	<p>18.</p> <p>There are ____ hundreds.</p> <p>There are ____ tens.</p> <p>There are ____ ones.</p> <p>The hundreds are worth: ____</p> <p>The tens are worth: ____</p> <p>The ones are worth: ____</p> <p>The number is: ____</p>

Name: _____

Counting Hundreds, Tens and Ones

Directions: Open your bag and count the hundreds, tens and ones. Find the value of each digit. Write the number the hundreds, tens and ones make. Write the number word.

1. There are ____ hundreds. There are ____ tens. There are ____ ones. The hundreds are worth: ____ The tens are worth: ____ The ones are worth: ____ The number is: ____ The number word is: _____	2. There are ____ hundreds. There are ____ tens. There are ____ ones. The hundreds are worth: ____ The tens are worth: ____ The ones are worth: ____ The number is: ____ The number word is: _____	3. There are ____ hundreds. There are ____ tens. There are ____ ones. The hundreds are worth: ____ The tens are worth: ____ The ones are worth: ____ The number is: ____ The number word is: _____
4. There are ____ hundreds. There are ____ tens. There are ____ ones. The hundreds are worth: ____ The tens are worth: ____ The ones are worth: ____ The number is: ____ The number word is: _____	5. There are ____ hundreds. There are ____ tens. There are ____ ones. The hundreds are worth: ____ The tens are worth: ____ The ones are worth: ____ The number is: ____ The number word is: _____	6. There are ____ hundreds. There are ____ tens. There are ____ ones. The hundreds are worth: ____ The tens are worth: ____ The ones are worth: ____ The number is: ____ The number word is: _____
7. There are ____ hundreds. There are ____ tens. There are ____ ones. The hundreds are worth: ____ The tens are worth: ____ The ones are worth: ____ The number is: ____ The number word is: _____	8. There are ____ hundreds. There are ____ tens. There are ____ ones. The hundreds are worth: ____ The tens are worth: ____ The ones are worth: ____ The number is: ____ The number word is: _____	9. There are ____ hundreds. There are ____ tens. There are ____ ones. The hundreds are worth: ____ The tens are worth: ____ The ones are worth: ____ The number is: ____ The number word is: _____

<p>10. There are ____ hundreds. There are ____ tens. There are ____ ones. The hundreds are worth: ____ The tens are worth: ____ The ones are worth: ____ The number is: ____ The number word is: ____</p>	<p>11. There are ____ hundreds. There are ____ tens. There are ____ ones. The hundreds are worth: ____ The tens are worth: ____ The ones are worth: ____ The number is: ____ The number word is: ____</p>	<p>12. There are ____ hundreds. There are ____ tens. There are ____ ones. The hundreds are worth: ____ The tens are worth: ____ The ones are worth: ____ The number is: ____ The number word is: ____</p>
<p>13. There are ____ hundreds. There are ____ tens. There are ____ ones. The hundreds are worth: ____ The tens are worth: ____ The ones are worth: ____ The number is: ____ The number word is: ____</p>	<p>14. There are ____ hundreds. There are ____ tens. There are ____ ones. The hundreds are worth: ____ The tens are worth: ____ The ones are worth: ____ The number is: ____ The number word is: ____</p>	<p>15. There are ____ hundreds. There are ____ tens. There are ____ ones. The hundreds are worth: ____ The tens are worth: ____ The ones are worth: ____ The number is: ____ The number word is: ____</p>
<p>16. There are ____ hundreds. There are ____ tens. There are ____ ones. The hundreds are worth: ____ The tens are worth: ____ The ones are worth: ____ The number is: ____ The number word is: ____</p>	<p>17. There are ____ hundreds. There are ____ tens. There are ____ ones. The hundreds are worth: ____ The tens are worth: ____ The ones are worth: ____ The number is: ____ The number word is: ____</p>	<p>18. There are ____ hundreds. There are ____ tens. There are ____ ones. The hundreds are worth: ____ The tens are worth: ____ The ones are worth: ____ The number is: ____ The number word is: ____</p>

Name: _____

Show the Number

Directions: Cut out the tens and ones. Use the popsicle sticks to build each number. Write about the number at the bottom.

36

There are ____ tens.

There are ____ ones.

The tens are worth: ____

The ones are worth: ____

52

There are ____ tens.

There are ____ ones.

The tens are worth: ____

The ones are worth: ____



Name: _____

Show the Number

Directions: Cut out the tens and ones. Use the popsicle sticks to build each number. Write about the number at the bottom.

47

There are ____ tens.

There are ____ ones.

The tens are worth: ____

The ones are worth: ____

32

There are ____ tens.

There are ____ ones.

The tens are worth: ____

The ones are worth: ____



Name: _____

Show the Number

Directions: Cut out the tens and ones. Use the popsicle sticks to build each number. Write about the number at the bottom.

28

There are ____ tens.

There are ____ ones.

The tens are worth: ____

The ones are worth: ____

61

There are ____ tens.

There are ____ ones.

The tens are worth: ____

The ones are worth: ____



Name: _____

Show the Number

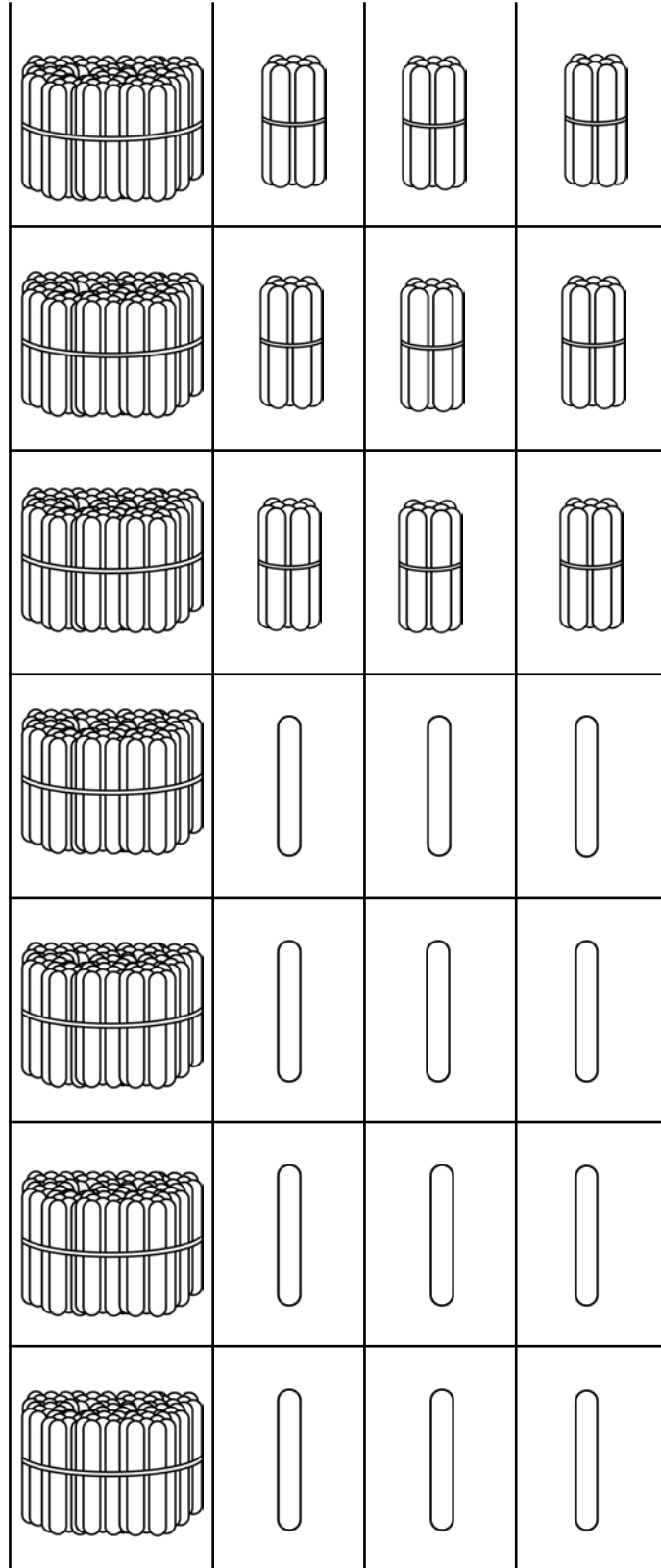
Directions: Cut out the hundreds, tens and ones. Use the popsicle sticks to build each number. Write about the number at the bottom.

341

There are ____ hundreds.
There are ____ tens.
There are ____ ones.
The hundreds are worth: ____
The tens are worth: ____
The ones are worth: ____
The number word is: _____

253

There are ____ hundreds.
There are ____ tens.
There are ____ ones.
The hundreds are worth: ____
The tens are worth: ____
The ones are worth: ____
The number word is: _____



Name: _____

Show the Number

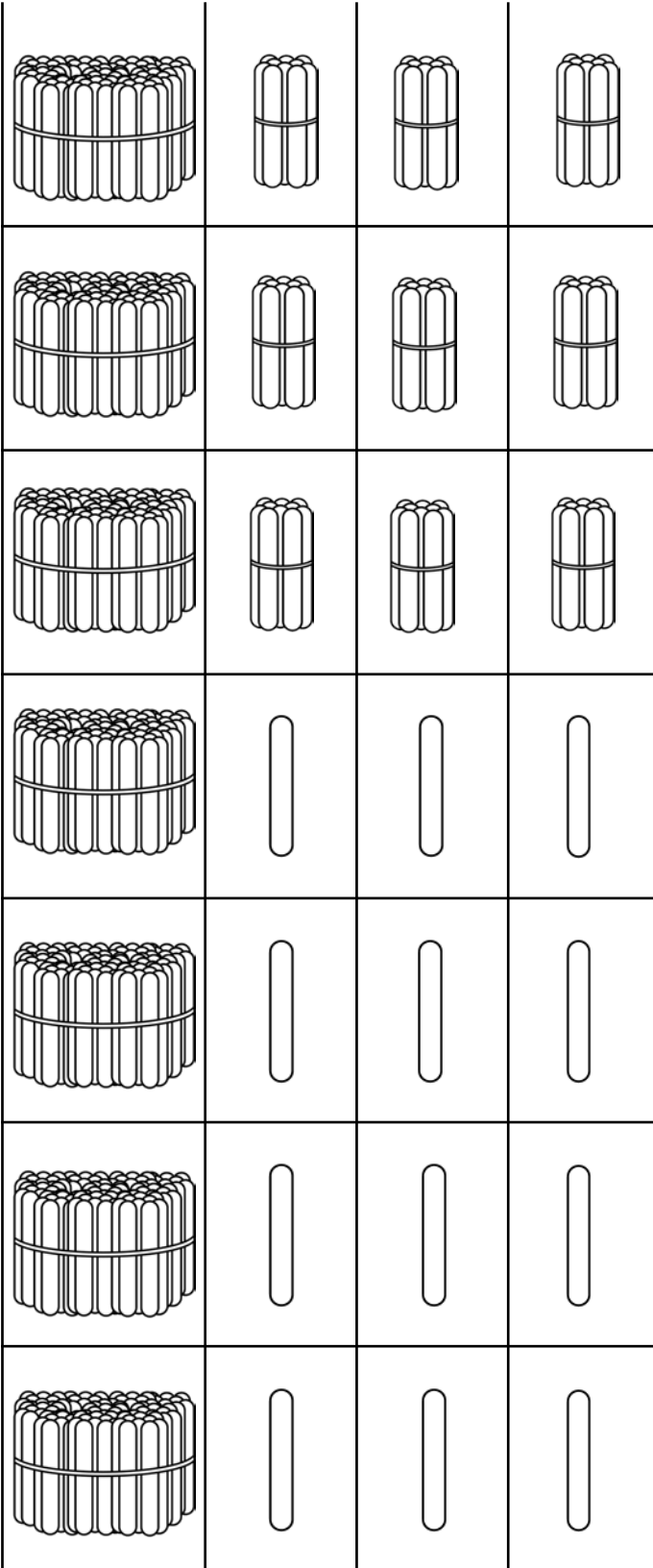
Directions: Cut out the hundreds, tens and ones. Use the popsicle sticks to build each number. Write about the number at the bottom.

512

There are ____ hundreds.
There are ____ tens.
There are ____ ones.
The hundreds are worth: ____
The tens are worth: ____
The ones are worth: ____
The number word is: _____

271

There are ____ hundreds.
There are ____ tens.
There are ____ ones.
The hundreds are worth: ____
The tens are worth: ____
The ones are worth: ____
The number word is: _____



Show the Number

Directions: Use your hundreds, tens and one to show each number.

58

71

34

27

Show the Number

Directions: Use your hundreds, tens and one to show each number.

25

93

51

73

Show the Number

Directions: Use your hundreds, tens and one to show each number.

73

46

18

90

Show the Number

Directions: Use your hundreds, tens and one to show each number.

37

51

84

62

Show the Number

Directions: Use your hundreds, tens and one to show each number.

217

581

362

723

Show the Number

Directions: Use your hundreds, tens and one to show each number.

436

180

648

904

Show the Number

Directions: Use your hundreds, tens and one to show each number.

738

150

384

815

Show the Number

Directions: Use your hundreds, tens and one to show each number.

627





431

280

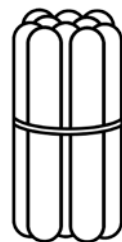
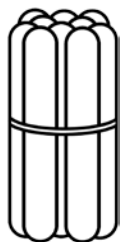
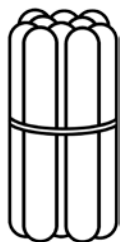
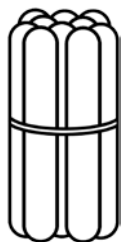
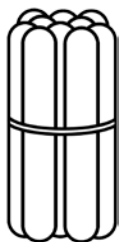
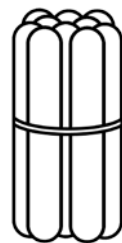
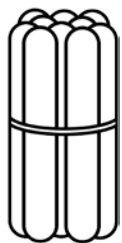
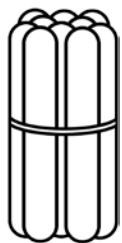
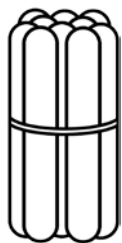
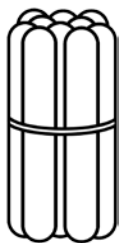
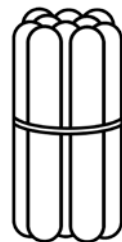
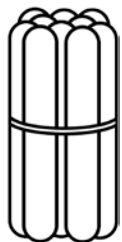
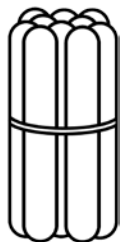
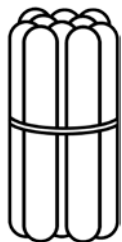
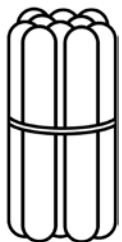
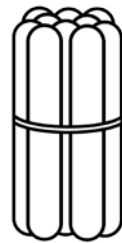
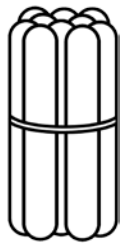
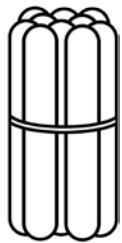
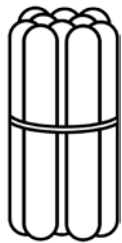
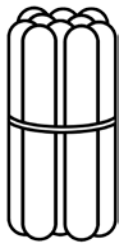
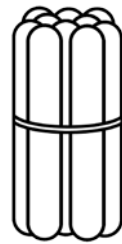
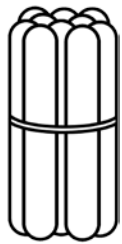
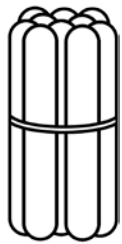
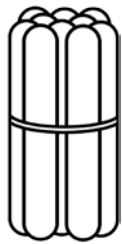
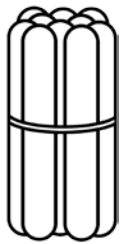
563


Show the Number

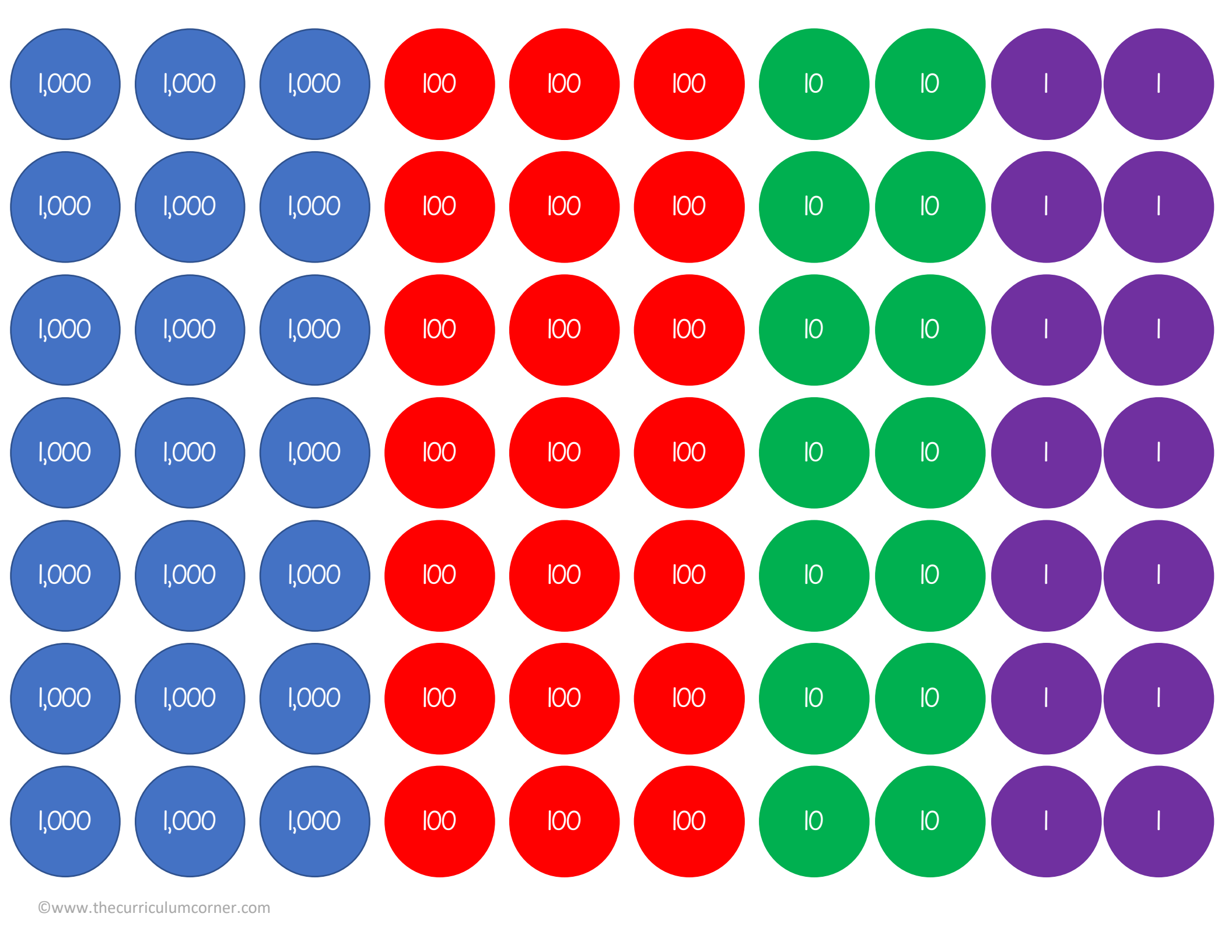
Directions: Use your hundreds, tens and one to show each number.











Name: _____

Place Value Chips

Directions: Pick some place value chips out of the basket. Record what you have. Write the number you make.

_____ tens

_____ ones

My number altogether is:

_____ tens

_____ ones

My number altogether is:

_____ tens

_____ ones

My number altogether is:

_____ tens

_____ ones

My number altogether is:

Name: _____

Place Value Chips

Directions: Pick some place value chips out of the basket. Record what you have. Write the number you make.

_____ hundreds _____ tens
 _____ ones

My number altogether is:

_____ hundreds _____ tens
 _____ ones

My number altogether is:

_____ hundreds _____ tens
 _____ ones

My number altogether is:

_____ hundreds _____ tens
 _____ ones

My number altogether is:

Name: _____

Place Value Chips

Directions: Pick some place value chips out of the basket. Record what you have. Write the number you make.

_____ thousands _____ hundreds

_____ tens _____ ones

My number altogether is:

_____ thousands _____ hundreds

_____ tens _____ ones

My number altogether is:

_____ thousands _____ hundreds

_____ tens _____ ones

My number altogether is:

_____ thousands _____ hundreds

_____ tens _____ ones

My number altogether is: