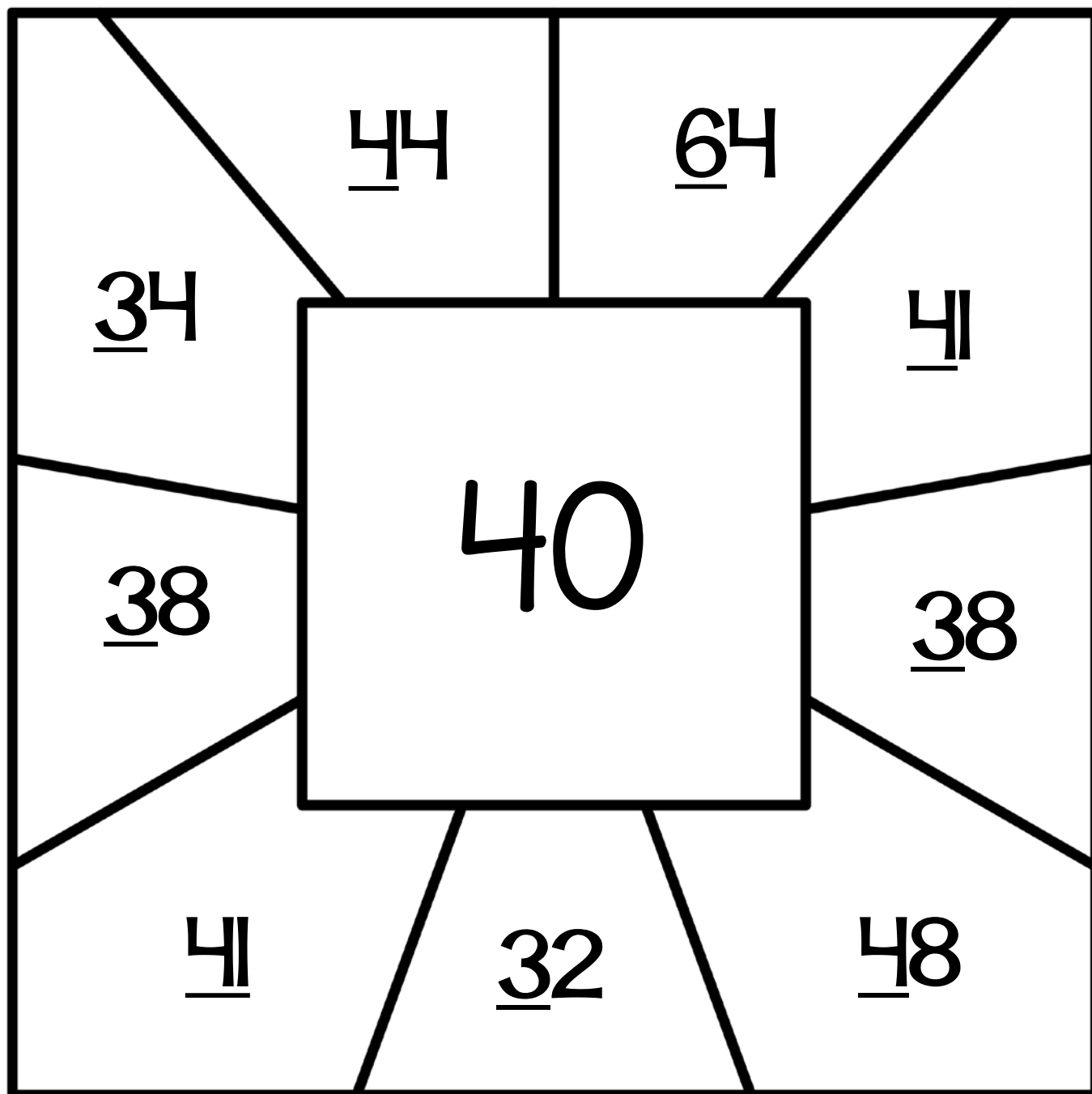


Name: _____

Find the Numbers

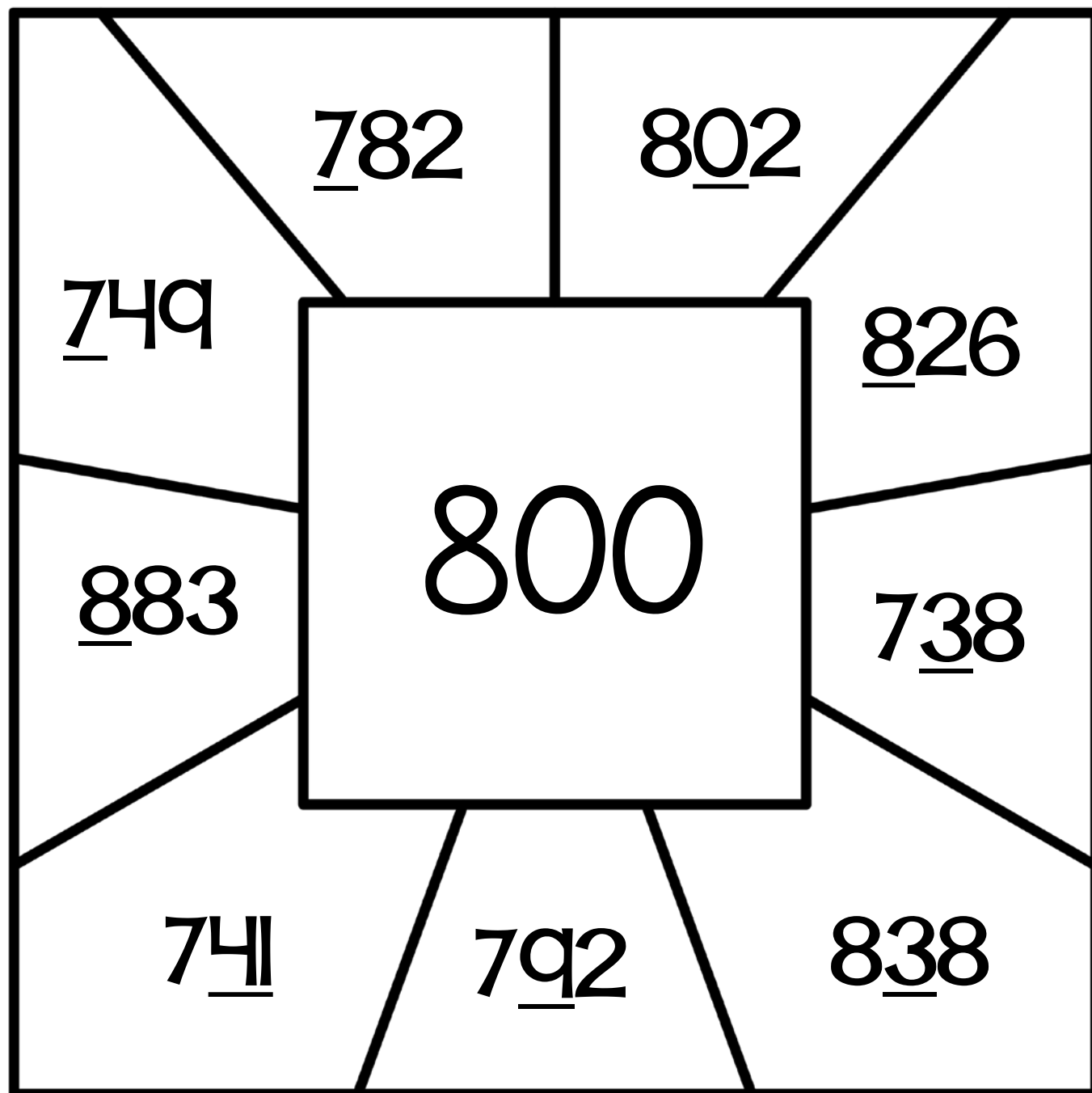
Directions: What numbers on the outside will round to the number in the middle? Round to the underlined place. Color the spaces that round to the middle number.



Name: _____

Find the Numbers

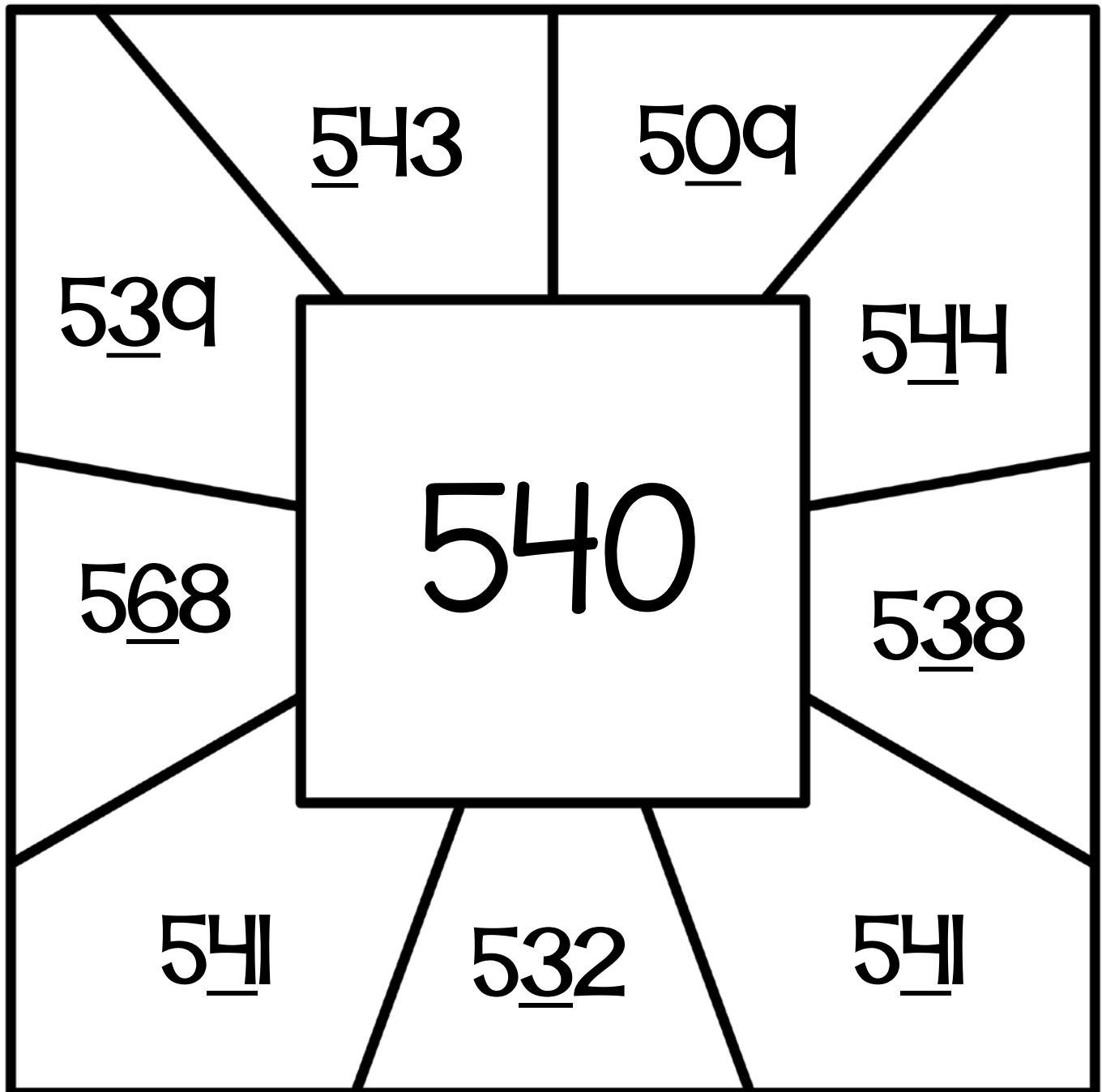
Directions: What numbers on the outside will round to the number in the middle? Round to the underlined place. Color the spaces that round to the middle number.



Name: _____

Find the Numbers

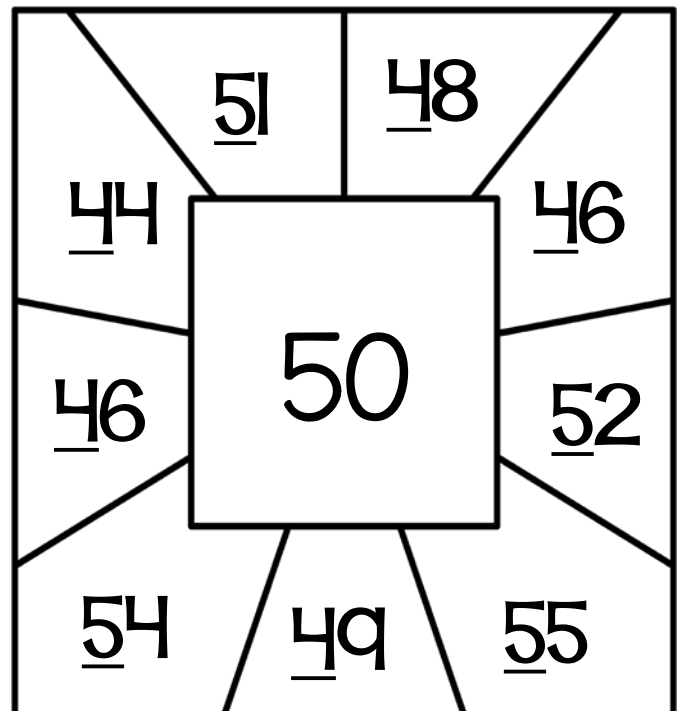
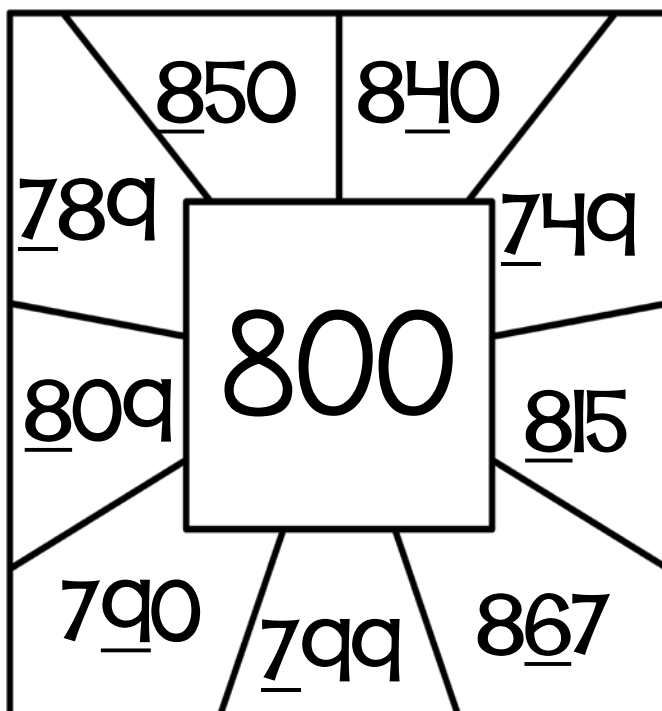
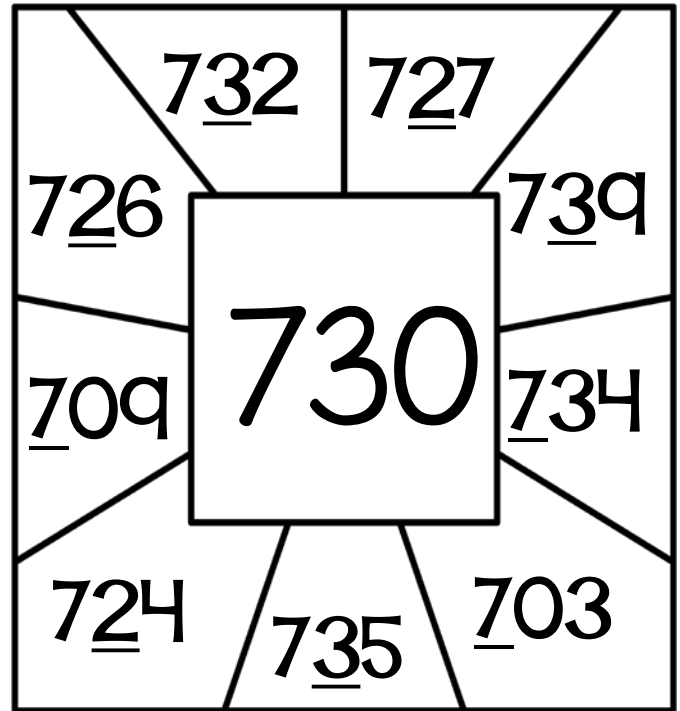
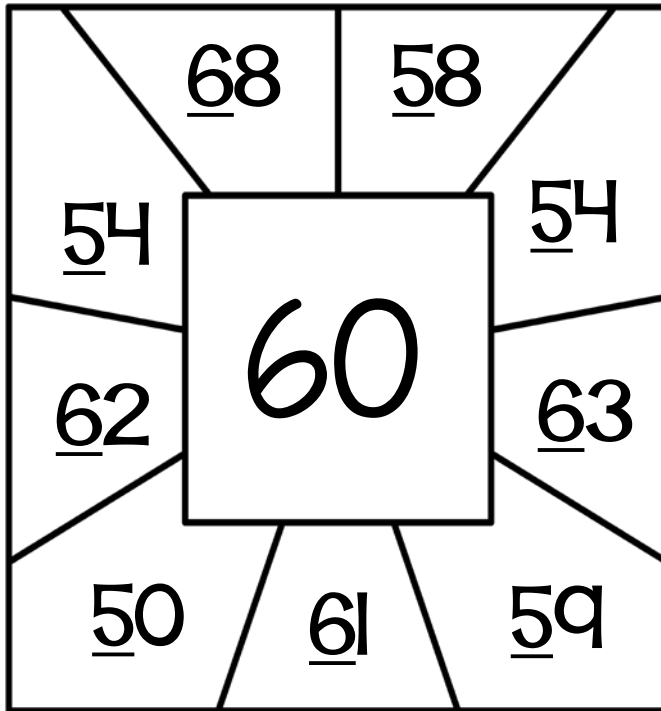
Directions: What numbers on the outside will round to the number in the middle? Round to the underlined place. Color the spaces that round to the middle number.



Name: _____

Find the Numbers

Directions: What numbers on the outside will round to the number in the middle? Round to the underlined place. Color the spaces that round to the middle number.



Name: _____

Circle the numbers that round to the number in the box.

580

583

588

576

578

574

778

587

361

717

350

782

774

352

724

365

721

719

368

720

764

364

358

360

Name: _____

Rounding Practice

Directions: Round to the underlined digit.

92

70

87

78

57

20

41

84

95

53

24

66

Name: _____

Rounding Practice

Directions: Round to the underlined digit.

446

668

372

580

294

939

972

276

136

701

792

516

Name: _____

Rounding Practice

Directions: Round to the underlined digit.

2,063

6,377

9,613

1,705

3,098

3,785

7,727

4,093

8,165

7,488

6,396

9,201

Name: _____

Rounding Match

Directions: Match each number with the number it rounds to.

748

832

39

472

82

289

965

71

290

80

700

500

70

830

40

1,000

Name: _____

Rounding Match

Directions: Match each number with the number it rounds to.

75

904

67

1,348

352

661

4,723

506

70

350

700

80

5,000

900

500

1,300

Name: _____

Rounding Match

Directions: Match each number with the number it rounds to.

412

1,032

6,895

9,521

9,579

1,873

706

6,350

9,520

1,000

9,600

6,400

400

700

2,000

7,000

Name: _____

Rounding Match

Directions: Match each number with the number it rounds to.

5,642

1,305

4,635

7,797

394

6,381

2,345

6,046

7,800

1,000

6,380

2,000

5,600

6,000

400

4,640

Name: _____

Ordering Decimals

Directions: Follow the path to put the numbers in order from least to greatest. Write the numbers rounded to the underlined place value in order below.

Start here

12

37

51

18

25

66

75

84

94

End here

1.	2.	3.
4.	5.	6.
7.	8.	9.

Name: _____

Ordering Decimals

Directions: Follow the path to put the numbers in order from least to greatest. Write the numbers rounded to the underlined place value in order below.

Start here

46

187

195

72

263

304

98

142

339

End here

1.	2.	3.
4.	5.	6.
7.	8.	9.

Name: _____

Ordering Decimals

Directions: Follow the path to put the numbers in order from least to greatest. Write the numbers rounded to the underlined place value in order below.

Start here

67

236

391

83

176

406

524

658

732

End here

1.	2.	3.
4.	5.	6.
7.	8.	9.

Name: _____

Find Your Way!

Round each number to the nearest ten. Color the boxes that round to 70 to find your way through the maze.

Start Here 68	72	78	61	75	79
62	66	71	65	61	78
76	60	62	70	67	73
61	77	62	77	64	74
60	71	65	72	66	69
78	72 End Here	63	62	79	61

Name: _____

Find Your Way!

Round each number to the nearest hundred. Color the boxes that round to 500 to find your way through the maze.

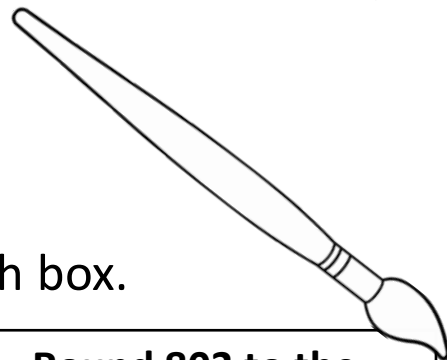
Start Here 501	403	580	590	410	442
528	576	400	438	582	573
490	420	550	449	400	581
477	549	483	531	480	600
428	445	576	582	540	595
583	538 End Here	510	499	568	402

Name: _____

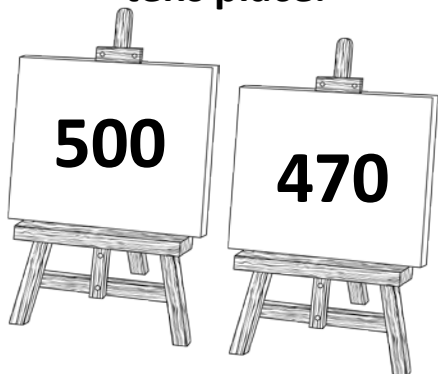


Color the Easel

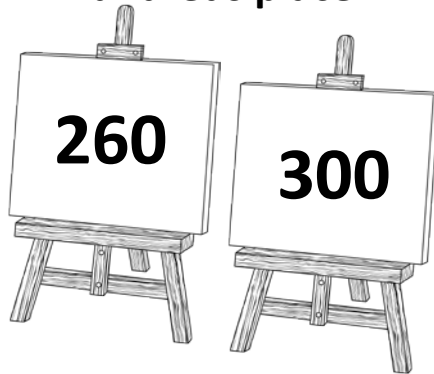
Color the correct easel in each box.



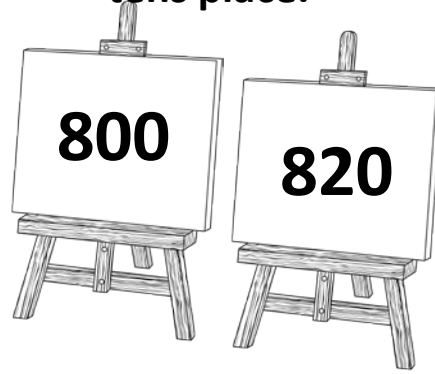
Round 473 to the
tens place.




Round 258 to the
hundreds place.




Round 803 to the
tens place.




Round 636 to the
tens place.



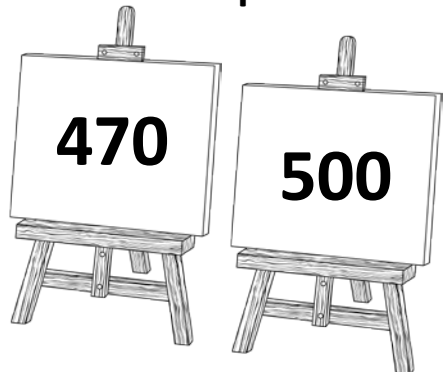
Round 582 to the
hundreds place.




Round 803 to the
tens place.



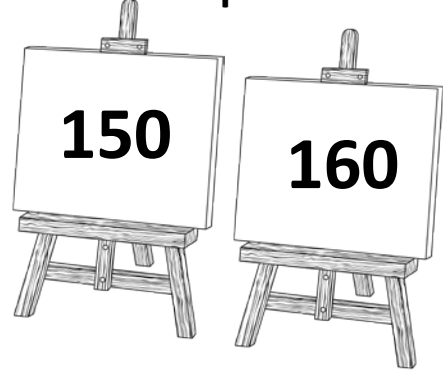
Round 473 to the
tens place.



Round 258 to the
hundreds place.



Round 157 to the
tens place.



Name: _____

Mystery Numbers

<p>I round to 40. I end in 4.</p> <p>What number am I?</p> <input type="text"/>	<p>I round to 70. I end in 7.</p> <p>What number am I?</p> <input type="text"/>	<p>I round to 30. I end in 3.</p> <p>What number am I?</p> <input type="text"/>
<p>I round to 90. I end in 8.</p> <p>What number am I?</p> <input type="text"/>	<p>I round to 10. I end in 8.</p> <p>What number am I?</p> <input type="text"/>	<p>I round to 60. I end in 7.</p> <p>What number am I?</p> <input type="text"/>
<p>I round to 20. I end in 2.</p> <p>What number am I?</p> <input type="text"/>	<p>I round to 40. I end in 9.</p> <p>What number am I?</p> <input type="text"/>	<p>I round to 80. I end in 6.</p> <p>What number am I?</p> <input type="text"/>
<p>I round to 100. I end in 9.</p> <p>What number am I?</p> <input type="text"/>	<p>I round to 50. I end in 3.</p> <p>What number am I?</p> <input type="text"/>	<p>I round to 70. I end in 2.</p> <p>What number am I?</p> <input type="text"/>

Name: _____

Mystery Numbers

<p>I round to 230. I end in 5.</p> <p>What number am I?</p> <input type="text"/>	<p>I round to 360. I end in 4.</p> <p>What number am I?</p> <input type="text"/>	<p>I round to 90. I end in 9.</p> <p>What number am I?</p> <input type="text"/>
<p>I round to 70. I end in 6.</p> <p>What number am I?</p> <input type="text"/>	<p>I round to 810. I end in 7.</p> <p>What number am I?</p> <input type="text"/>	<p>I round to 20. I end in 3.</p> <p>What number am I?</p> <input type="text"/>
<p>I round to 540. I end in 1.</p> <p>What number am I?</p> <input type="text"/>	<p>I round to 30. I end in 2.</p> <p>What number am I?</p> <input type="text"/>	<p>I round to 110. I end in 9.</p> <p>What number am I?</p> <input type="text"/>
<p>I round to 780. I end in 4.</p> <p>What number am I?</p> <input type="text"/>	<p>I round to 80. I end in 5.</p> <p>What number am I?</p> <input type="text"/>	<p>I round to 40. I end in 8.</p> <p>What number am I?</p> <input type="text"/>