


Name: _____

Loop the Tens

Loop the ladybugs in groups of ten.
The total number is _____.




I have __ tens. I have __ extras.
(The extras are my ones.)

Name: _____

Loop the Tens

Loop the ladybugs in groups of ten.
The total number is _____.



I have __ tens. I have __ extras.
(The extras are my ones.)

Name: _____

Find Your Way!

Color the boxes that have a 6 in the ones place to find your way through the maze.

Start Here 46	36	62	68	61	63
65	26	60	16	76	66
68	96	46	56	65	86
61	68	67	69	36	26
65	96	76	66	56	62
63	26 End Here	61	62	60	63

Name: _____

Find Your Way!

Color the boxes that have a 5 in the tens place to find your way through the maze.



Start Here 51	53	15	35	75	25
95	58	59	5	65	85
25	45	52	58	53	56
85	75	25	75	15	57
95	52	58	54	50	59
35	57 End Here	45	85	65	25



Name: _____



How Many?



Count the tens and ones.

Write the number.

TENS	ONES
	

TENS	ONES
	

TENS	ONES
	



TENS	ONES
	



Name: _____


How Many?



Count the tens and ones.

Write the number.

TENS	ONES
	

TENS	ONES
	

TENS	ONES
	























































TENS	ONES
	

Name: _____

How Many?

Count the tens and ones.

Write the number.




















































<table border="1"><thead><tr><th>TENS</th><th>ONES</th></tr></thead><tbody><tr><td></td><td></td></tr><tr><td colspan="2"><hr/></td></tr></tbody></table>	TENS	ONES			<hr/>		<table border="1"><thead><tr><th>TENS</th><th>ONES</th></tr></thead><tbody><tr><td></td><td></td></tr><tr><td colspan="2"><hr/></td></tr></tbody></table>	TENS	ONES			<hr/>		<table border="1"><thead><tr><th>TENS</th><th>ONES</th></tr></thead><tbody><tr><td></td><td></td></tr><tr><td colspan="2"><hr/></td></tr></tbody></table>	TENS	ONES			<hr/>	
TENS	ONES																			
																				
<hr/>																				
TENS	ONES																			
																				
<hr/>																				
TENS	ONES																			
																				
<hr/>																				
<table border="1"><thead><tr><th>TENS</th><th>ONES</th></tr></thead><tbody><tr><td></td><td></td></tr><tr><td colspan="2"><hr/></td></tr></tbody></table>	TENS	ONES			<hr/>		<table border="1"><thead><tr><th>TENS</th><th>ONES</th></tr></thead><tbody><tr><td></td><td></td></tr><tr><td colspan="2"><hr/></td></tr></tbody></table>	TENS	ONES			<hr/>		<table border="1"><thead><tr><th>TENS</th><th>ONES</th></tr></thead><tbody><tr><td></td><td></td></tr><tr><td colspan="2"><hr/></td></tr></tbody></table>	TENS	ONES			<hr/>	
TENS	ONES																			
																				
<hr/>																				
TENS	ONES																			
																				
<hr/>																				
TENS	ONES																			
																				
<hr/>																				
<table border="1"><thead><tr><th>TENS</th><th>ONES</th></tr></thead><tbody><tr><td></td><td></td></tr><tr><td colspan="2"><hr/></td></tr></tbody></table>	TENS	ONES			<hr/>		<table border="1"><thead><tr><th>TENS</th><th>ONES</th></tr></thead><tbody><tr><td></td><td></td></tr><tr><td colspan="2"><hr/></td></tr></tbody></table>	TENS	ONES			<hr/>		<table border="1"><thead><tr><th>TENS</th><th>ONES</th></tr></thead><tbody><tr><td></td><td></td></tr><tr><td colspan="2"><hr/></td></tr></tbody></table>	TENS	ONES			<hr/>	
TENS	ONES																			
																				
<hr/>																				
TENS	ONES																			
																				
<hr/>																				
TENS	ONES																			
																				
<hr/>																				

Name: _____

How Many?

Count the tens and ones.

Write the number.

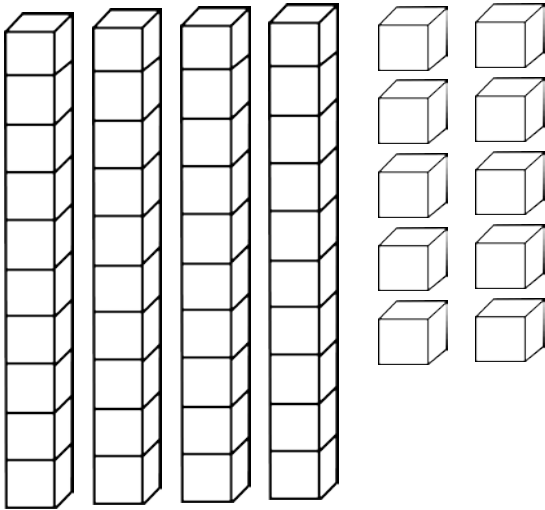
<table border="1"><thead><tr><th>TENS</th><th>ONES</th></tr></thead><tbody><tr><td></td><td></td></tr><tr><td colspan="2"><hr/></td></tr></tbody></table>	TENS	ONES			<hr/>		<table border="1"><thead><tr><th>TENS</th><th>ONES</th></tr></thead><tbody><tr><td></td><td></td></tr><tr><td colspan="2"><hr/></td></tr></tbody></table>	TENS	ONES			<hr/>		<table border="1"><thead><tr><th>TENS</th><th>ONES</th></tr></thead><tbody><tr><td></td><td></td></tr><tr><td colspan="2"><hr/></td></tr></tbody></table>	TENS	ONES			<hr/>	
TENS	ONES																			
																				
<hr/>																				
TENS	ONES																			
																				
<hr/>																				
TENS	ONES																			
																				
<hr/>																				
<table border="1"><thead><tr><th>TENS</th><th>ONES</th></tr></thead><tbody><tr><td></td><td></td></tr><tr><td colspan="2"><hr/></td></tr></tbody></table>	TENS	ONES			<hr/>		<table border="1"><thead><tr><th>TENS</th><th>ONES</th></tr></thead><tbody><tr><td></td><td></td></tr><tr><td colspan="2"><hr/></td></tr></tbody></table>	TENS	ONES			<hr/>		<table border="1"><thead><tr><th>TENS</th><th>ONES</th></tr></thead><tbody><tr><td></td><td></td></tr><tr><td colspan="2"><hr/></td></tr></tbody></table>	TENS	ONES			<hr/>	
TENS	ONES																			
																				
<hr/>																				
TENS	ONES																			
																				
<hr/>																				
TENS	ONES																			
																				
<hr/>																				
<table border="1"><thead><tr><th>TENS</th><th>ONES</th></tr></thead><tbody><tr><td></td><td></td></tr><tr><td colspan="2"><hr/></td></tr></tbody></table>	TENS	ONES			<hr/>		<table border="1"><thead><tr><th>TENS</th><th>ONES</th></tr></thead><tbody><tr><td></td><td></td></tr><tr><td colspan="2"><hr/></td></tr></tbody></table>	TENS	ONES			<hr/>		<table border="1"><thead><tr><th>TENS</th><th>ONES</th></tr></thead><tbody><tr><td></td><td></td></tr><tr><td colspan="2"><hr/></td></tr></tbody></table>	TENS	ONES			<hr/>	
TENS	ONES																			
																				
<hr/>																				
TENS	ONES																			
																				
<hr/>																				
TENS	ONES																			
																				
<hr/>																				

Name: _____

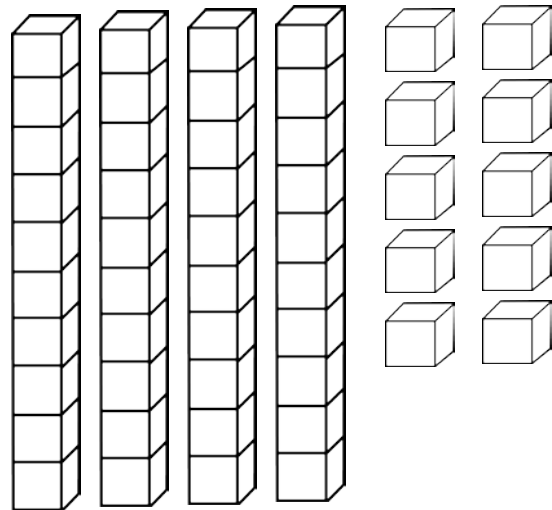
Color the Number

Color the tens and ones to show each number.

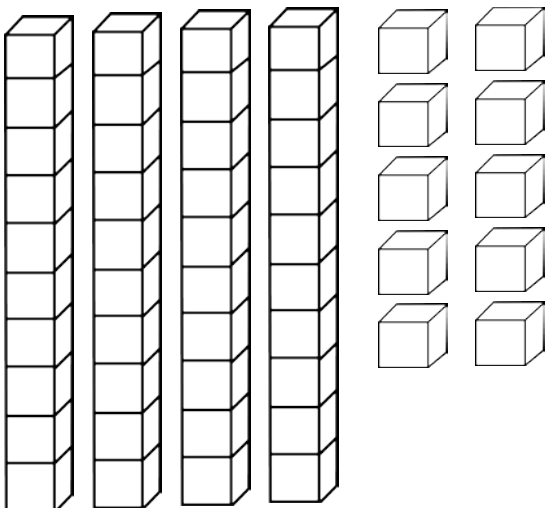
18



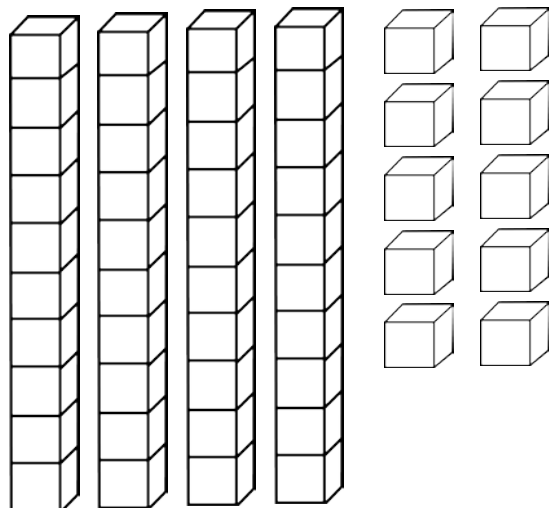
7



14



19

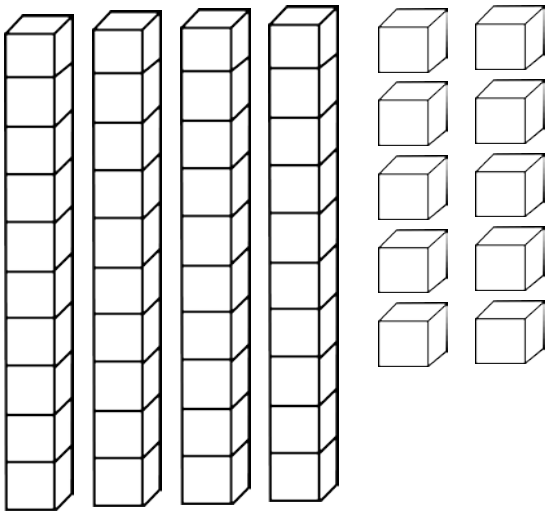


Name: _____

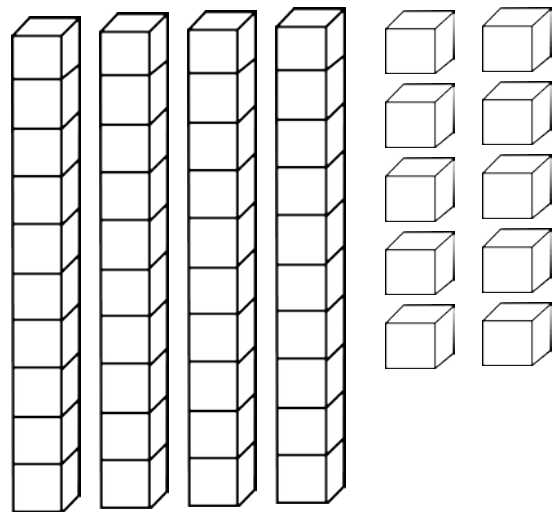
Color the Number

Color the tens and ones to show each number.

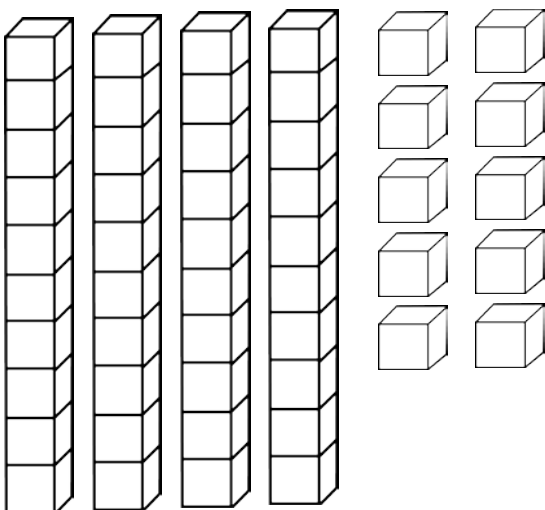
26



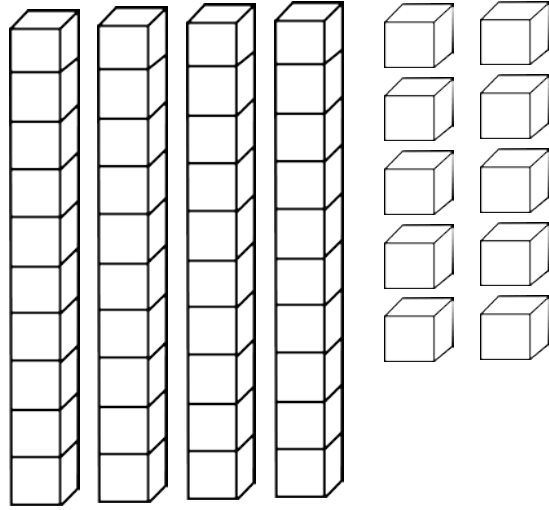
15



33



21

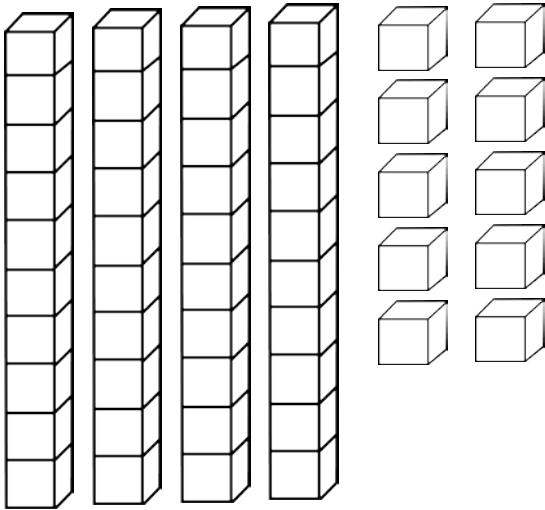


Name: _____

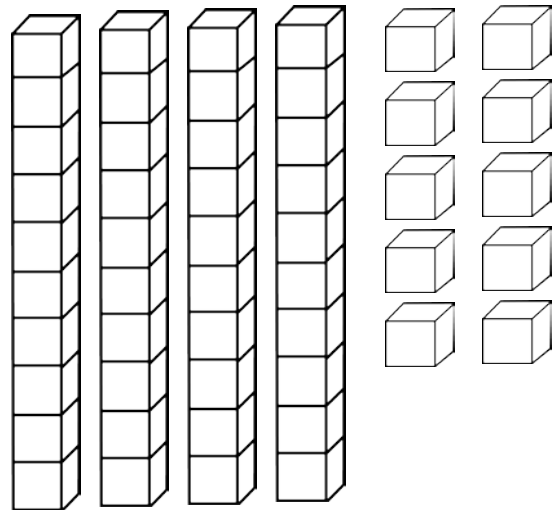
Color the Number

Color the tens and ones to show each number.

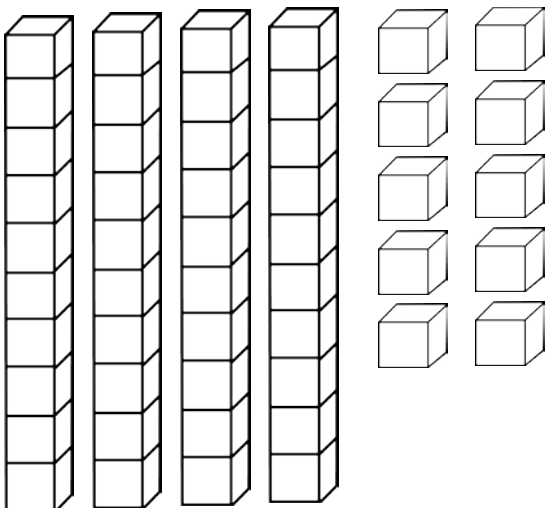
46



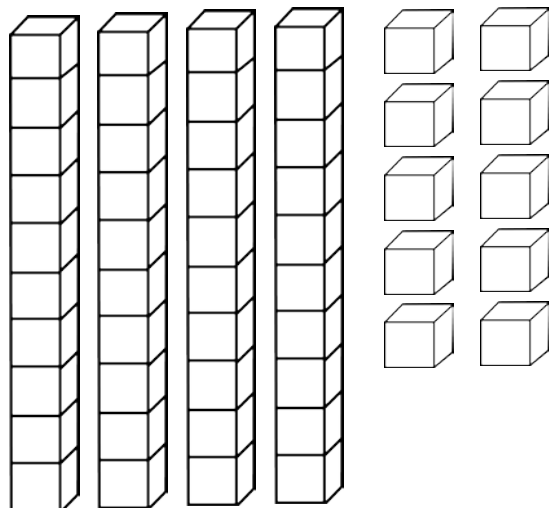
3



24



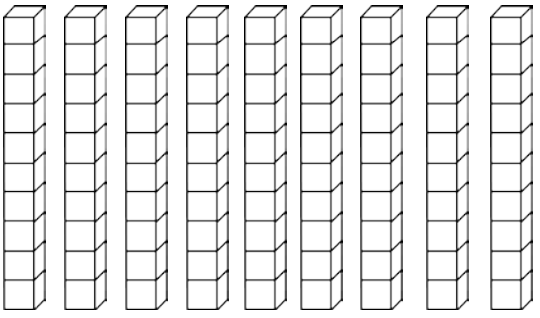
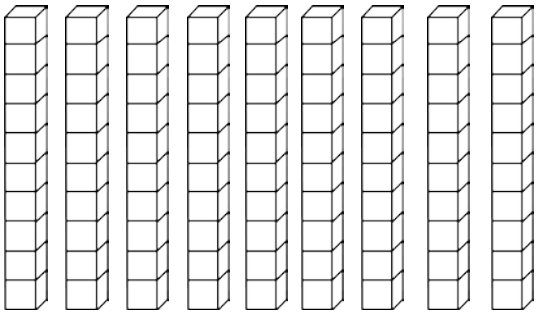
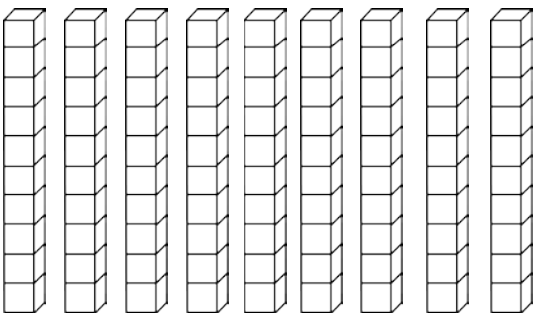
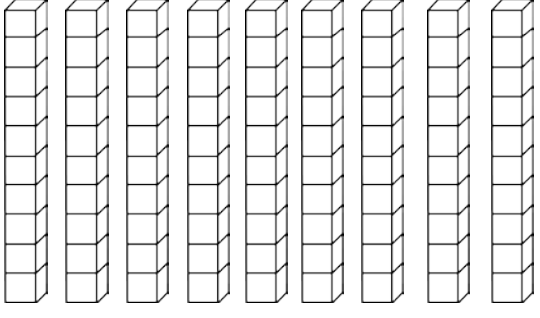
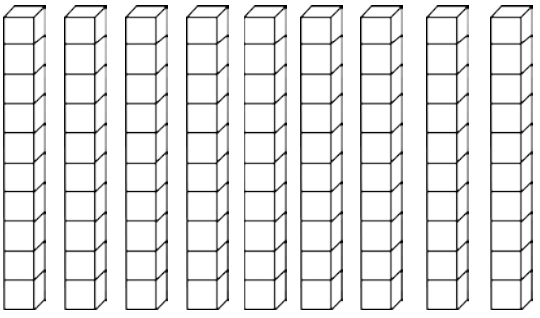
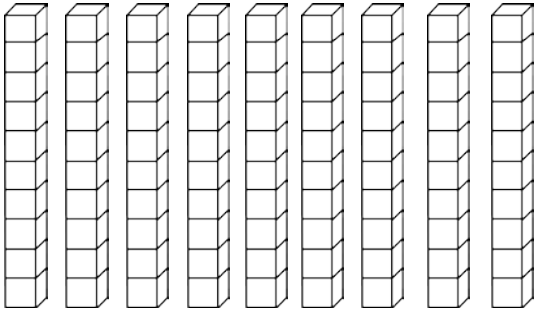
37



Name: _____

Color the Number

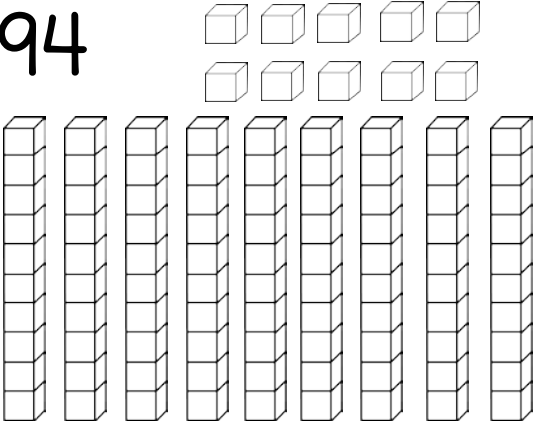
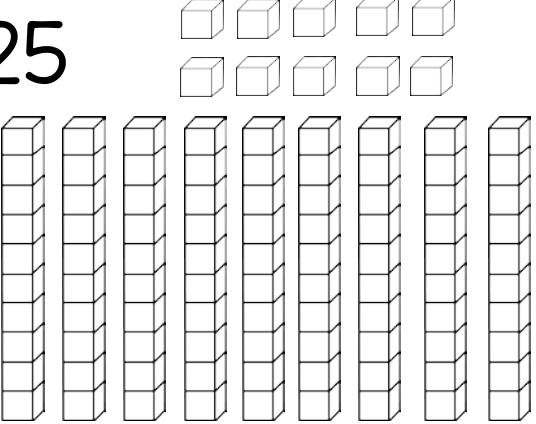
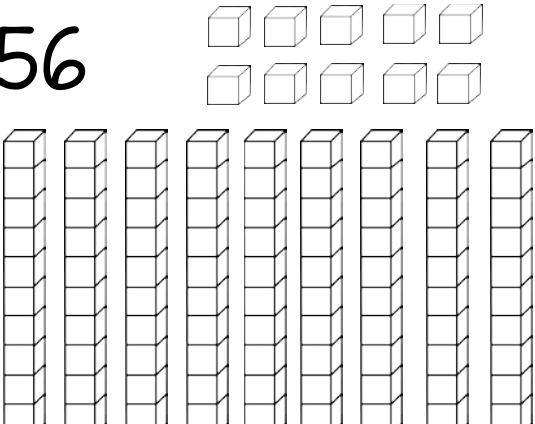

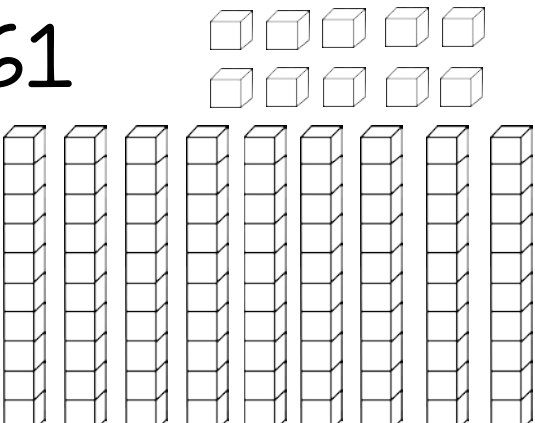

Color the tens and ones to show each number.

<p>35</p> <p>□ □ □ □ □ □ □ □ □ □</p> 	<p>84</p> <p>□ □ □ □ □ □ □ □ □ □</p> 
<p>62</p> <p>□ □ □ □ □ □ □ □ □ □</p> 	<p>47</p> <p>□ □ □ □ □ □ □ □ □ □</p> 
<p>78</p> <p>□ □ □ □ □ □ □ □ □ □</p> 	<p>53</p> <p>□ □ □ □ □ □ □ □ □ □</p> 

Name: _____

Color the Number

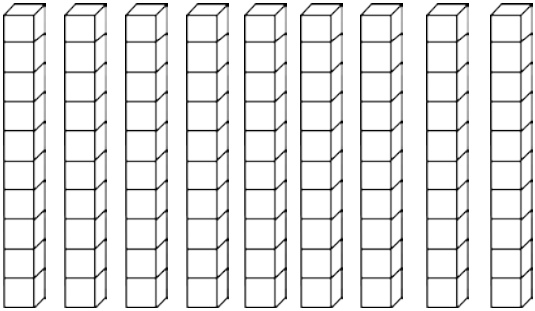
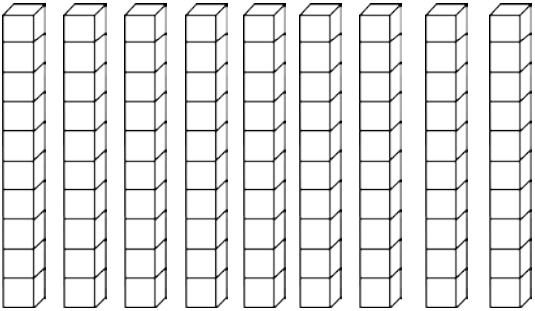
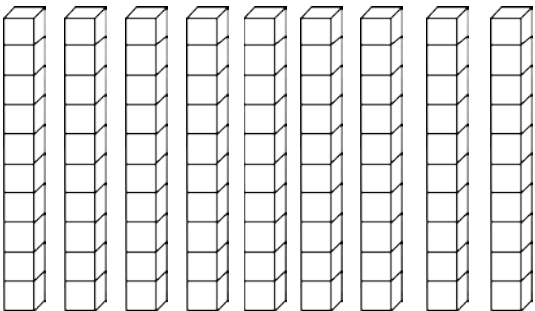
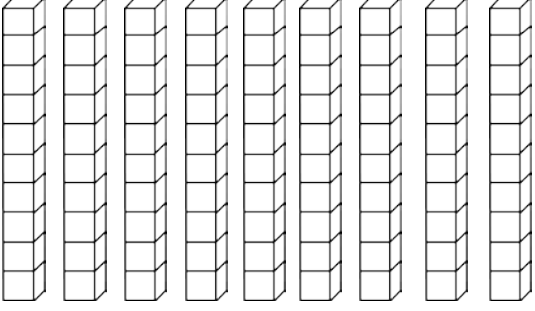
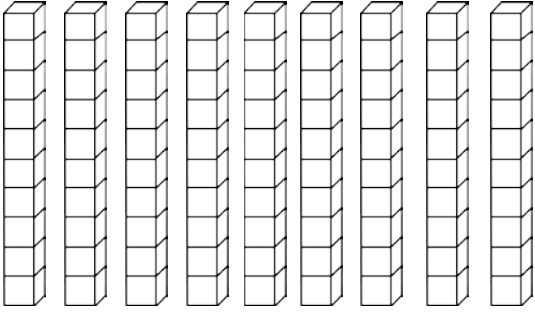
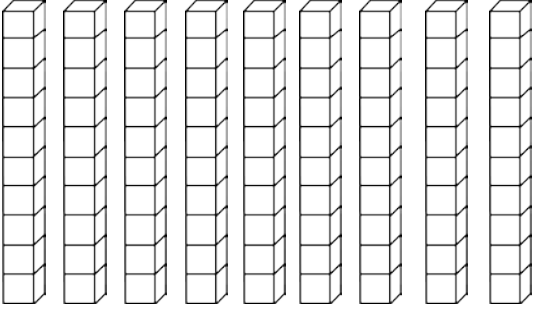
Color the tens and ones to show each number.

<p>94</p>  <p>94 is represented by 9 tens rods and 4 ones units.</p>	<p>25</p>  <p>25 is represented by 2 tens rods and 5 ones units.</p>
<p>56</p>  <p>56 is represented by 5 tens rods and 6 ones units.</p>	<p>73</p>  <p>73 is represented by 7 tens rods and 3 ones units.</p>
<p>61</p>  <p>61 is represented by 6 tens rods and 1 ones unit.</p>	<p>49</p>  <p>49 is represented by 4 tens rods and 9 ones units.</p>

Name: _____

Color the Number

Color the tens and ones to show each number.

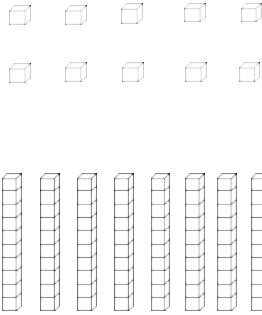

<p>46</p> <p>□ □ □ □ □ □ □ □ □ □</p> 	<p>14</p> <p>□ □ □ □ □ □ □ □ □ □</p> 
<p>98</p> <p>□ □ □ □ □ □ □ □ □ □</p> 	<p>62</p> <p>□ □ □ □ □ □ □ □ □ □</p> 
<p>50</p> <p>□ □ □ □ □ □ □ □ □ □</p> 	<p>74</p> <p>□ □ □ □ □ □ □ □ □ □</p> 

Name: _____

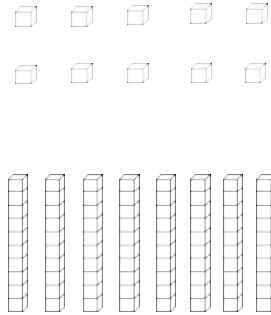

Color the Number

Color the hundreds, tens and ones to show each number.

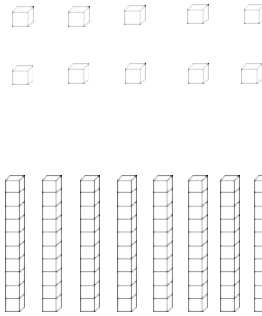

352



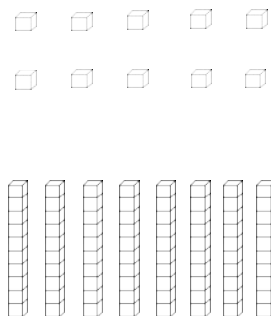

273



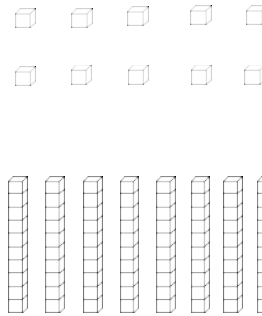

461



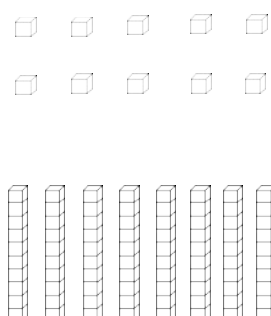
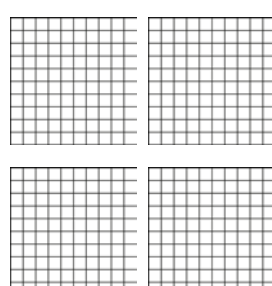
185



248



396

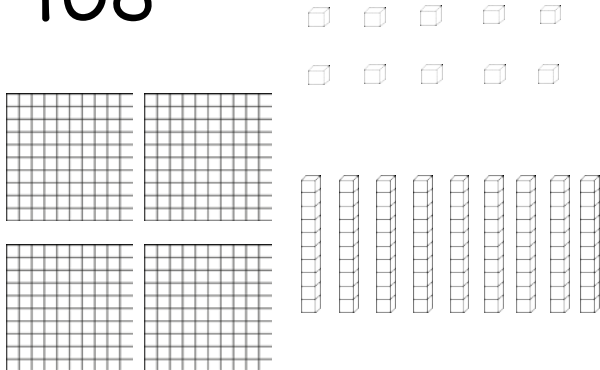


Name: _____

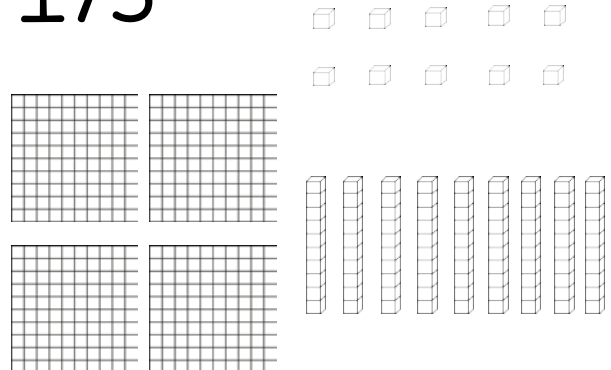
Color the Number

Color the hundreds, tens and ones to show each number.

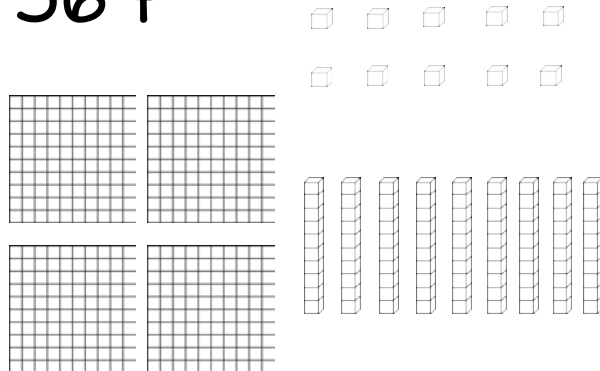
408



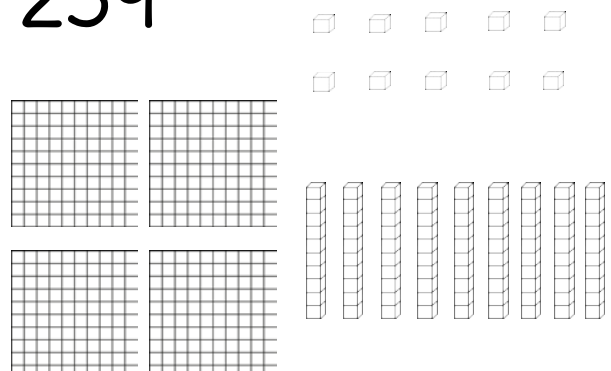
173



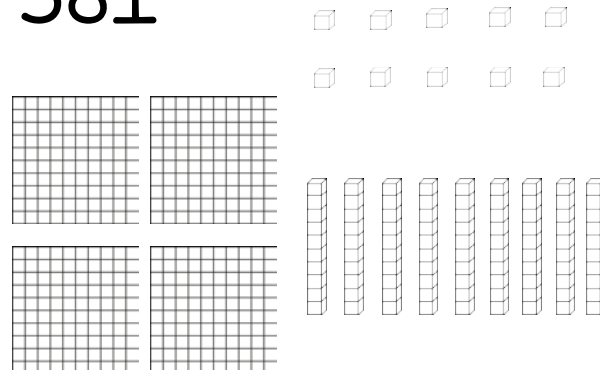
364




259



381



426

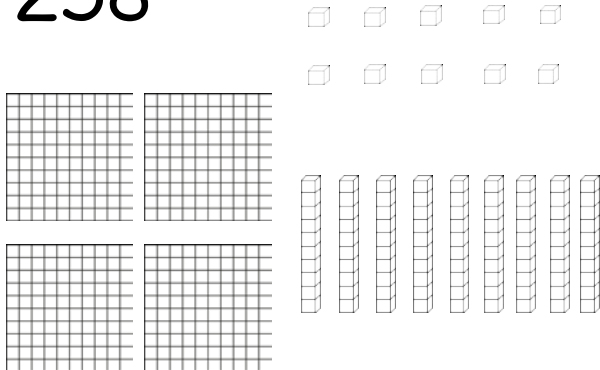


Name: _____

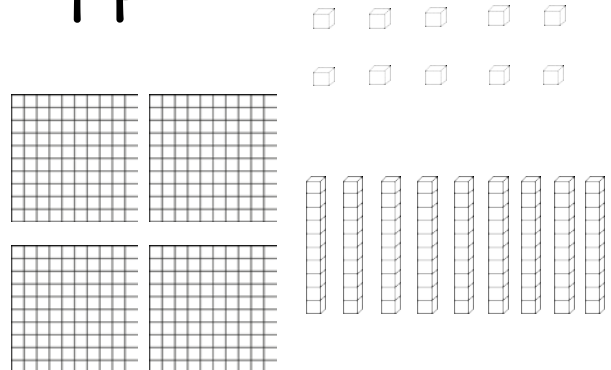
Color the Number

Color the hundreds, tens and ones to show each number.

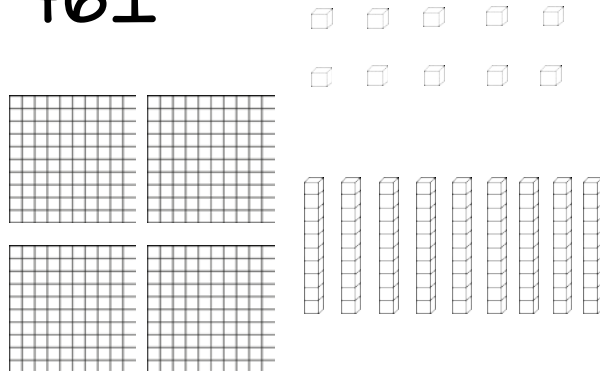
258



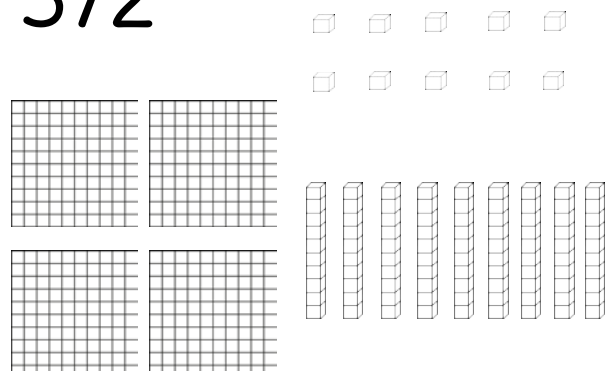
94



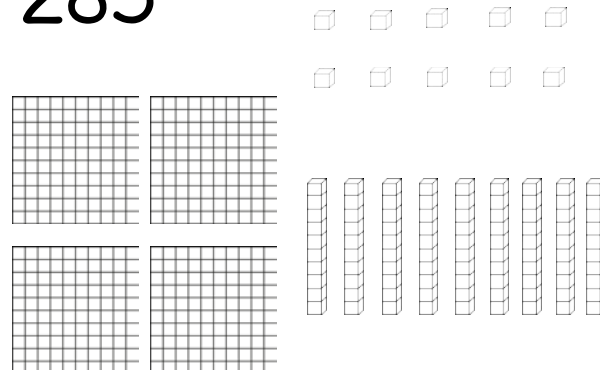
461



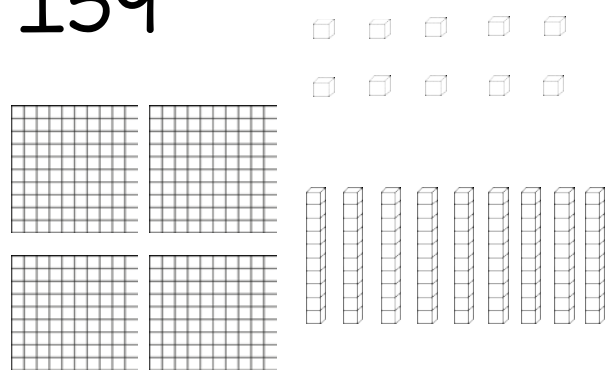
372



285



159



Name: _____

Tens and Ones

The number is 28.

How many tens and how many ones does the number have?

Tens	Ones

The number is 43.

How many tens and how many ones does the number have?

Tens	Ones

The number is 75.

How many tens and how many ones does the number have?

Tens	Ones

The number is 59.

How many tens and how many ones does the number have?

Tens	Ones

Name: _____

Tens and Ones

The number is 32.

How many tens and how many ones does the number have?

Tens	Ones

The number is 6.

How many tens and how many ones does the number have?

Tens	Ones

The number is 73.

How many tens and how many ones does the number have?

Tens	Ones

The number is 48.

How many tens and how many ones does the number have?

Tens	Ones

Name: _____

Tens and Ones

The number is 51.
How many tens and
how many ones does
the number have?

Tens	Ones

The number is 39.
How many tens and
how many ones does
the number have?

Tens	Ones

The number is 22.
How many tens and
how many ones does
the number have?

Tens	Ones

The number is 74.
How many tens and
how many ones does
the number have?

Tens	Ones

The number is 86.
How many tens and
how many ones does
the number have?

Tens	Ones

The number is 13.
How many tens and
how many ones does
the number have?

Tens	Ones

The number is 48.
How many tens and
how many ones does
the number have?

Tens	Ones

The number is 65.
How many tens and
how many ones does
the number have?

Tens	Ones

The number is 90.
How many tens and
how many ones does
the number have?

Tens	Ones

Name: _____

Tens and Ones

The number is 82.
How many tens and
how many ones does
the number have?

Tens	Ones

The number is 60.
How many tens and
how many ones does
the number have?

Tens	Ones

The number is 35.
How many tens and
how many ones does
the number have?

Tens	Ones

The number is 8.
How many tens and
how many ones does
the number have?

Tens	Ones

The number is 27.
How many tens and
how many ones does
the number have?

Tens	Ones

The number is 93.
How many tens and
how many ones does
the number have?

Tens	Ones

The number is 46.
How many tens and
how many ones does
the number have?

Tens	Ones

The number is 71.
How many tens and
how many ones does
the number have?

Tens	Ones

The number is 19.
How many tens and
how many ones does
the number have?

Tens	Ones

Name: _____

Hundreds, Tens and Ones

The number is 275.

How many hundreds, how many tens and how many ones does the number have?

Hundreds	Tens	Ones

The number is 603.

How many hundreds, how many tens and how many ones does the number have?

Hundreds	Tens	Ones

The number is 421.

How many hundreds, how many tens and how many ones does the number have?

Hundreds	Tens	Ones

The number is 584.

How many hundreds, how many tens and how many ones does the number have?

Hundreds	Tens	Ones

Name: _____

Hundreds, Tens and Ones

The number is 935.

How many hundreds, how many tens and how many ones does the number have?

Hundreds	Tens	Ones

The number is 329.

How many hundreds, how many tens and how many ones does the number have?

Hundreds	Tens	Ones

The number is 402.

How many hundreds, how many tens and how many ones does the number have?

Hundreds	Tens	Ones

The number is 683.

How many hundreds, how many tens and how many ones does the number have?

Hundreds	Tens	Ones

Name: _____

Hundreds, Tens and Ones

The number is 249.

How many hundreds,
how many tens and how
many ones does the
number have?

Hundreds	Tens	Ones

The number is 734.

How many hundreds,
how many tens and how
many ones does the
number have?

Hundreds	Tens	Ones

The number is 585.

How many hundreds,
how many tens and how
many ones does the
number have?

Hundreds	Tens	Ones

The number is 902.

How many hundreds,
how many tens and how
many ones does the
number have?

Hundreds	Tens	Ones

The number is 164.

How many hundreds,
how many tens and how
many ones does the
number have?

Hundreds	Tens	Ones

The number is 826.

How many hundreds,
how many tens and how
many ones does the
number have?

Hundreds	Tens	Ones

The number is 358.

How many hundreds,
how many tens and how
many ones does the
number have?

Hundreds	Tens	Ones

The number is 471.

How many hundreds,
how many tens and how
many ones does the
number have?

Hundreds	Tens	Ones

The number is 640.

How many hundreds,
how many tens and how
many ones does the
number have?

Hundreds	Tens	Ones

Name: _____

Hundreds, Tens and Ones

The number is 832.

How many hundreds,
how many tens and how
many ones does the
number have?

Hundreds	Tens	Ones

The number is 106.

How many hundreds,
how many tens and how
many ones does the
number have?

Hundreds	Tens	Ones

The number is 328.

How many hundreds,
how many tens and how
many ones does the
number have?

Hundreds	Tens	Ones

The number is 714.

How many hundreds,
how many tens and how
many ones does the
number have?

Hundreds	Tens	Ones

The number is 953.

How many hundreds,
how many tens and how
many ones does the
number have?

Hundreds	Tens	Ones

The number is 400.

How many hundreds,
how many tens and how
many ones does the
number have?

Hundreds	Tens	Ones

The number is 245.

How many hundreds,
how many tens and how
many ones does the
number have?

Hundreds	Tens	Ones

The number is 630.

How many hundreds,
how many tens and how
many ones does the
number have?

Hundreds	Tens	Ones

The number is 591.

How many hundreds,
how many tens and how
many ones does the
number have?

Hundreds	Tens	Ones

Name: _____

Build the Biggest Number

Roll two dice. What is the biggest number you can build?

I rolled a ___ and a ___.

The biggest number I
can build is:

I rolled a ___ and a ___.

The biggest number I
can build is:

I rolled a ___ and a ___.

The biggest number I
can build is:

I rolled a ___ and a ___.

The biggest number I
can build is:

I rolled a ___ and a ___.

The biggest number I
can build is:

I rolled a ___ and a ___.

The biggest number I
can build is:

I rolled a ___ and a ___.

The biggest number I
can build is:

I rolled a ___ and a ___.

The biggest number I
can build is:

I rolled a ___ and a ___.

The biggest number I
can build is:

Name: _____

Build the Smallest Number

Roll two dice. What is the smallest number you can build?

I rolled a ___ and a ___.

The smallest number
I can build is:

I rolled a ___ and a ___.

The smallest number
I can build is:

I rolled a ___ and a ___.

The smallest number
I can build is:

I rolled a ___ and a ___.

The smallest number
I can build is:

I rolled a ___ and a ___.

The smallest number
I can build is:

I rolled a ___ and a ___.

The smallest number
I can build is:

I rolled a ___ and a ___.

The smallest number
I can build is:

I rolled a ___ and a ___.

The smallest number
I can build is:

I rolled a ___ and a ___.

The smallest number
I can build is:

Name: _____

Build the Biggest Number

Roll three dice. What is the biggest number you can build?

<p>I rolled a ____, a ____ and a ____.</p> <p>The biggest number I can build is:</p> <input type="text"/>	<p>I rolled a ____, a ____ and a ____.</p> <p>The biggest number I can build is:</p> <input type="text"/>	<p>I rolled a ____, a ____ and a ____.</p> <p>The biggest number I can build is:</p> <input type="text"/>
<p>I rolled a ____, a ____ and a ____.</p> <p>The biggest number I can build is:</p> <input type="text"/>	<p>I rolled a ____, a ____ and a ____.</p> <p>The biggest number I can build is:</p> <input type="text"/>	<p>I rolled a ____, a ____ and a ____.</p> <p>The biggest number I can build is:</p> <input type="text"/>
<p>I rolled a ____, a ____ and a ____.</p> <p>The biggest number I can build is:</p> <input type="text"/>	<p>I rolled a ____, a ____ and a ____.</p> <p>The biggest number I can build is:</p> <input type="text"/>	<p>I rolled a ____, a ____ and a ____.</p> <p>The biggest number I can build is:</p> <input type="text"/>

Name: _____

Build the Smallest Number

Roll three dice. What is the smallest number you can build?

I rolled a ____, a ____
and a ____.

The smallest number
I can build is:

I rolled a ____, a ____
and a ____.

The smallest number
I can build is:

I rolled a ____, a ____
and a ____.

The smallest number
I can build is:

I rolled a ____, a ____
and a ____.

The smallest number
I can build is:

I rolled a ____, a ____
and a ____.

The smallest number
I can build is:

I rolled a ____, a ____
and a ____.

The smallest number
I can build is:

I rolled a ____, a ____
and a ____.

The smallest number
I can build is:

I rolled a ____, a ____
and a ____.

The smallest number
I can build is:

I rolled a ____, a ____
and a ____.

The smallest number
I can build is:

Name: _____

Build the Biggest Number

Roll four dice. What is the biggest number you can build?

I rolled a ____, a ____, a ____ and a ____.	I rolled a ____, a ____, a ____ and a ____.	I rolled a ____, a ____, a ____ and a ____.
The biggest number I can build is:	The biggest number I can build is:	The biggest number I can build is:
<input type="text"/>	<input type="text"/>	<input type="text"/>
I rolled a ____, a ____, a ____ and a ____.	I rolled a ____, a ____, a ____ and a ____.	I rolled a ____, a ____, a ____ and a ____.
The biggest number I can build is:	The biggest number I can build is:	The biggest number I can build is:
<input type="text"/>	<input type="text"/>	<input type="text"/>
I rolled a ____, a ____, a ____ and a ____.	I rolled a ____, a ____, a ____ and a ____.	I rolled a ____, a ____, a ____ and a ____.
The biggest number I can build is:	The biggest number I can build is:	The biggest number I can build is:
<input type="text"/>	<input type="text"/>	<input type="text"/>

Name: _____

Build the Smallest Number

Roll four dice. What is the smallest number you can build?

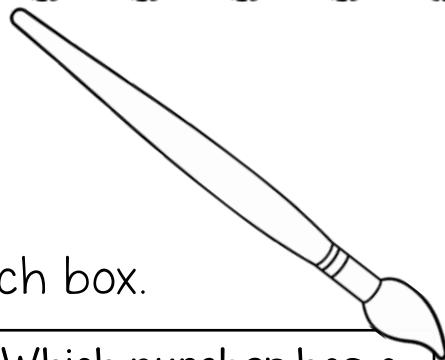
I rolled a ____, a ____, a ____ and a ____.	I rolled a ____, a ____, a ____ and a ____.	I rolled a ____, a ____, a ____ and a ____.
The smallest number I can build is:	The smallest number I can build is:	The smallest number I can build is:
<input type="text"/>	<input type="text"/>	<input type="text"/>
I rolled a ____, a ____, a ____ and a ____.	I rolled a ____, a ____, a ____ and a ____.	I rolled a ____, a ____, a ____ and a ____.
The smallest number I can build is:	The smallest number I can build is:	The smallest number I can build is:
<input type="text"/>	<input type="text"/>	<input type="text"/>
I rolled a ____, a ____, a ____ and a ____.	I rolled a ____, a ____, a ____ and a ____.	I rolled a ____, a ____, a ____ and a ____.
The smallest number I can build is:	The smallest number I can build is:	The biggest number I can build is:
<input type="text"/>	<input type="text"/>	<input type="text"/>

Name: _____

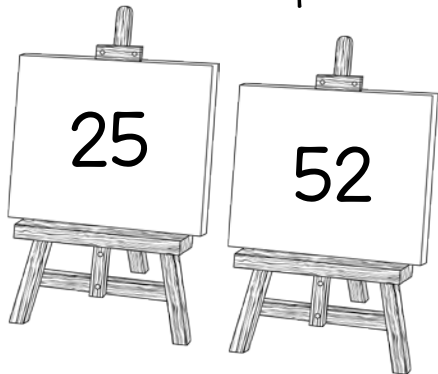


Color the Easel


Color the correct easel in each box.



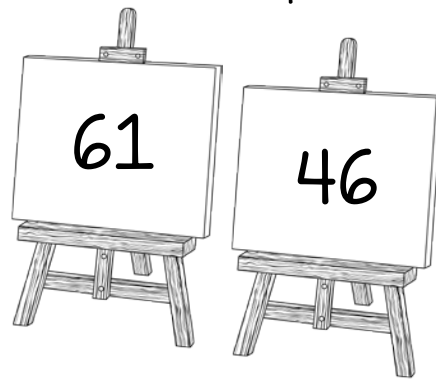
Which number has a 5 in the tens place?




Which number has a 3 in the ones place?




Which number has a 6 in the tens place?



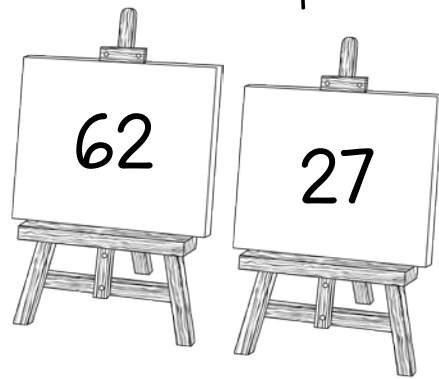
Which number has a 1 in the ones place?




Which number has a 8 in the tens place?



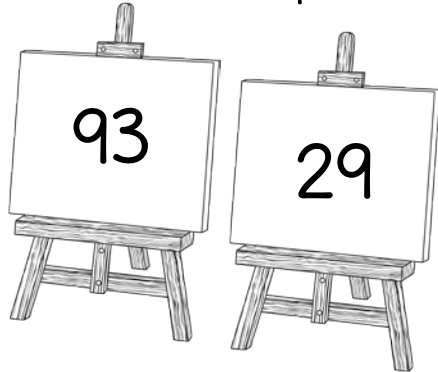
Which number has a 2 in the tens place?




Which number has a 4 in the ones place?




Which number has a 9 in the tens place?



Which number has a 7 in the ones place?

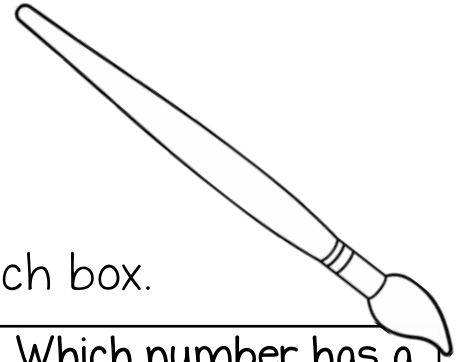


Name: _____



Color the Easel

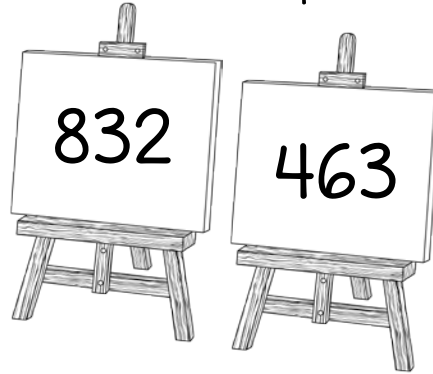
Color the correct easel in each box.



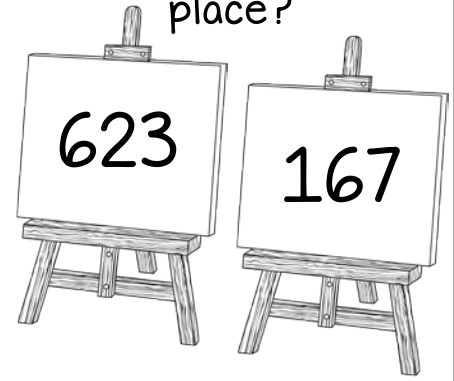
Which number has a 5 in the tens place?



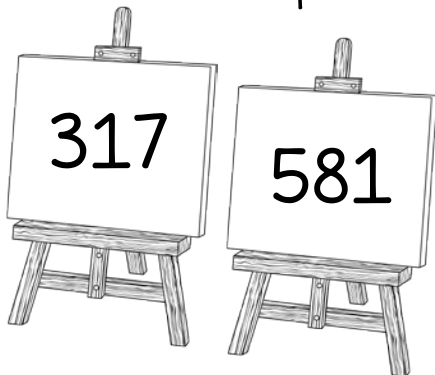
Which number has a 3 in the ones place?




Which number has a 6 in the hundreds place?




Which number has a 1 in the ones place?



Which number has a 8 in the hundreds place?



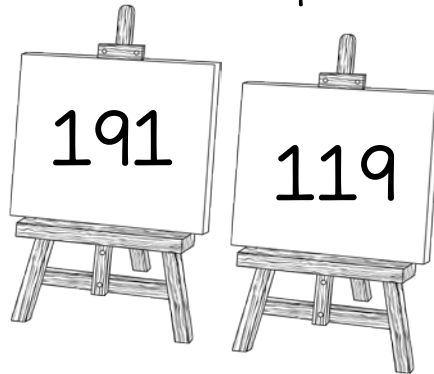
Which number has a 2 in the tens place?



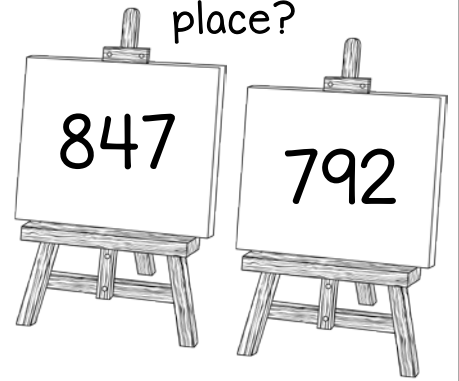
Which number has a 4 in the ones place?



Which number has a 9 in the tens place?



Which number has a 7 in the hundreds place?



Name: _____

Decomposing Numbers

Break each number into tens and ones.

46

TENS

ONES

82

TENS

ONES

15

TENS

ONES

73

TENS

ONES

64

TENS

ONES

27

TENS

ONES

19

TENS

ONES

38

TENS

ONES

51

TENS

ONES

Name: _____

Decomposing Numbers

Break each number into tens and ones.

37

TENS

ONES

84

TENS

ONES

9

TENS

ONES

43

TENS

ONES

65

TENS

ONES

21

TENS

ONES

56

TENS

ONES

72

TENS

ONES

98

TENS

ONES

Name: _____

Decomposing Numbers

Break each number into hundreds, tens and ones.

<table border="1"><tr><td colspan="3">562</td></tr><tr><td>HUNDREDS</td><td>TENS</td><td>ONES</td></tr><tr><td></td><td></td><td></td></tr></table>	562			HUNDREDS	TENS	ONES				<table border="1"><tr><td colspan="3">375</td></tr><tr><td>HUNDREDS</td><td>TENS</td><td>ONES</td></tr><tr><td></td><td></td><td></td></tr></table>	375			HUNDREDS	TENS	ONES			
562																			
HUNDREDS	TENS	ONES																	
375																			
HUNDREDS	TENS	ONES																	
<table border="1"><tr><td colspan="3">248</td></tr><tr><td>HUNDREDS</td><td>TENS</td><td>ONES</td></tr><tr><td></td><td></td><td></td></tr></table>	248			HUNDREDS	TENS	ONES				<table border="1"><tr><td colspan="3">527</td></tr><tr><td>HUNDREDS</td><td>TENS</td><td>ONES</td></tr><tr><td></td><td></td><td></td></tr></table>	527			HUNDREDS	TENS	ONES			
248																			
HUNDREDS	TENS	ONES																	
527																			
HUNDREDS	TENS	ONES																	
<table border="1"><tr><td colspan="3">904</td></tr><tr><td>HUNDREDS</td><td>TENS</td><td>ONES</td></tr><tr><td></td><td></td><td></td></tr></table>	904			HUNDREDS	TENS	ONES				<table border="1"><tr><td colspan="3">153</td></tr><tr><td>HUNDREDS</td><td>TENS</td><td>ONES</td></tr><tr><td></td><td></td><td></td></tr></table>	153			HUNDREDS	TENS	ONES			
904																			
HUNDREDS	TENS	ONES																	
153																			
HUNDREDS	TENS	ONES																	
<table border="1"><tr><td colspan="3">631</td></tr><tr><td>HUNDREDS</td><td>TENS</td><td>ONES</td></tr><tr><td></td><td></td><td></td></tr></table>	631			HUNDREDS	TENS	ONES				<table border="1"><tr><td colspan="3">790</td></tr><tr><td>HUNDREDS</td><td>TENS</td><td>ONES</td></tr><tr><td></td><td></td><td></td></tr></table>	790			HUNDREDS	TENS	ONES			
631																			
HUNDREDS	TENS	ONES																	
790																			
HUNDREDS	TENS	ONES																	

Name: _____

Decomposing Numbers

Break each number into hundreds, tens and ones.

<table border="1"><tr><td colspan="3">825</td></tr><tr><td>HUNDREDS</td><td>TENS</td><td>ONES</td></tr><tr><td></td><td></td><td></td></tr></table>	825			HUNDREDS	TENS	ONES				<table border="1"><tr><td colspan="3">642</td></tr><tr><td>HUNDREDS</td><td>TENS</td><td>ONES</td></tr><tr><td></td><td></td><td></td></tr></table>	642			HUNDREDS	TENS	ONES			
825																			
HUNDREDS	TENS	ONES																	
642																			
HUNDREDS	TENS	ONES																	
<table border="1"><tr><td colspan="3">107</td></tr><tr><td>HUNDREDS</td><td>TENS</td><td>ONES</td></tr><tr><td></td><td></td><td></td></tr></table>	107			HUNDREDS	TENS	ONES				<table border="1"><tr><td colspan="3">358</td></tr><tr><td>HUNDREDS</td><td>TENS</td><td>ONES</td></tr><tr><td></td><td></td><td></td></tr></table>	358			HUNDREDS	TENS	ONES			
107																			
HUNDREDS	TENS	ONES																	
358																			
HUNDREDS	TENS	ONES																	
<table border="1"><tr><td colspan="3">263</td></tr><tr><td>HUNDREDS</td><td>TENS</td><td>ONES</td></tr><tr><td></td><td></td><td></td></tr></table>	263			HUNDREDS	TENS	ONES				<table border="1"><tr><td colspan="3">934</td></tr><tr><td>HUNDREDS</td><td>TENS</td><td>ONES</td></tr><tr><td></td><td></td><td></td></tr></table>	934			HUNDREDS	TENS	ONES			
263																			
HUNDREDS	TENS	ONES																	
934																			
HUNDREDS	TENS	ONES																	
<table border="1"><tr><td colspan="3">716</td></tr><tr><td>HUNDREDS</td><td>TENS</td><td>ONES</td></tr><tr><td></td><td></td><td></td></tr></table>	716			HUNDREDS	TENS	ONES				<table border="1"><tr><td colspan="3">471</td></tr><tr><td>HUNDREDS</td><td>TENS</td><td>ONES</td></tr><tr><td></td><td></td><td></td></tr></table>	471			HUNDREDS	TENS	ONES			
716																			
HUNDREDS	TENS	ONES																	
471																			
HUNDREDS	TENS	ONES																	

Name: _____

Decomposing Numbers

Break each number into hundreds, tens and ones.

3,185

THOUSANDS	HUNDREDS	TENS	ONES

7,293

THOUSANDS	HUNDREDS	TENS	ONES

8,071

THOUSANDS	HUNDREDS	TENS	ONES

5,734

THOUSANDS	HUNDREDS	TENS	ONES

6,159

THOUSANDS	HUNDREDS	TENS	ONES

2,351

THOUSANDS	HUNDREDS	TENS	ONES

4,798

THOUSANDS	HUNDREDS	TENS	ONES

1,093

THOUSANDS	HUNDREDS	TENS	ONES

9,571

THOUSANDS	HUNDREDS	TENS	ONES

4,308

THOUSANDS	HUNDREDS	TENS	ONES

Name: _____

Decomposing Numbers

Break each number into hundreds, tens and ones.

6,293

THOUSANDS	HUNDREDS	TENS	ONES

1,084

THOUSANDS	HUNDREDS	TENS	ONES

5,984

THOUSANDS	HUNDREDS	TENS	ONES

9,165

THOUSANDS	HUNDREDS	TENS	ONES

3,452

THOUSANDS	HUNDREDS	TENS	ONES

7,357

THOUSANDS	HUNDREDS	TENS	ONES

2,085

THOUSANDS	HUNDREDS	TENS	ONES

8,783

THOUSANDS	HUNDREDS	TENS	ONES

9,472

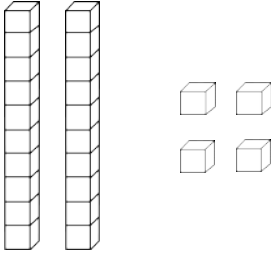
THOUSANDS	HUNDREDS	TENS	ONES

6,294

THOUSANDS	HUNDREDS	TENS	ONES

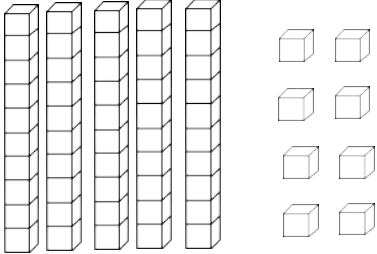
Name: _____

Fill in the Chart

24	<table border="1"><thead><tr><th data-bbox="634 457 818 506">Tens</th><th data-bbox="818 457 1002 506">Ones</th></tr></thead><tbody><tr><td data-bbox="634 506 818 684">2</td><td data-bbox="818 506 1002 684">4</td></tr></tbody></table>	Tens	Ones	2	4	
Tens	Ones					
2	4					
48	<table border="1"><thead><tr><th data-bbox="634 749 818 798">Tens</th><th data-bbox="818 749 1002 798">Ones</th></tr></thead><tbody><tr><td data-bbox="634 798 818 976"></td><td data-bbox="818 798 1002 976"></td></tr></tbody></table>	Tens	Ones			
Tens	Ones					
71	<table border="1"><thead><tr><th data-bbox="634 1041 818 1089">Tens</th><th data-bbox="818 1041 1002 1089">Ones</th></tr></thead><tbody><tr><td data-bbox="634 1089 818 1268"></td><td data-bbox="818 1089 1002 1268"></td></tr></tbody></table>	Tens	Ones			
Tens	Ones					
36	<table border="1"><thead><tr><th data-bbox="634 1333 818 1381">Tens</th><th data-bbox="818 1333 1002 1381">Ones</th></tr></thead><tbody><tr><td data-bbox="634 1381 818 1560"></td><td data-bbox="818 1381 1002 1560"></td></tr></tbody></table>	Tens	Ones			
Tens	Ones					
52	<table border="1"><thead><tr><th data-bbox="634 1625 818 1673">Tens</th><th data-bbox="818 1625 1002 1673">Ones</th></tr></thead><tbody><tr><td data-bbox="634 1673 818 1852"></td><td data-bbox="818 1673 1002 1852"></td></tr></tbody></table>	Tens	Ones			
Tens	Ones					

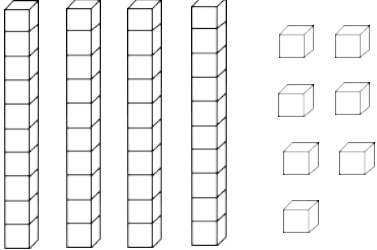
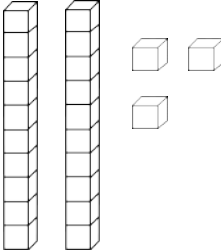
Name: _____

Fill in the Chart

58	<table border="1"><thead><tr><th data-bbox="634 457 818 506">Tens</th><th data-bbox="818 457 1002 506">Ones</th></tr></thead><tbody><tr><td data-bbox="634 506 818 684">5</td><td data-bbox="818 506 1002 684">8</td></tr></tbody></table>	Tens	Ones	5	8	
Tens	Ones					
5	8					
24	<table border="1"><thead><tr><th data-bbox="634 747 818 795">Tens</th><th data-bbox="818 747 1002 795">Ones</th></tr></thead><tbody><tr><td data-bbox="634 795 818 974"></td><td data-bbox="818 795 1002 974"></td></tr></tbody></table>	Tens	Ones			
Tens	Ones					
83	<table border="1"><thead><tr><th data-bbox="634 1041 818 1089">Tens</th><th data-bbox="818 1041 1002 1089">Ones</th></tr></thead><tbody><tr><td data-bbox="634 1089 818 1268"></td><td data-bbox="818 1089 1002 1268"></td></tr></tbody></table>	Tens	Ones			
Tens	Ones					
15	<table border="1"><thead><tr><th data-bbox="634 1335 818 1383">Tens</th><th data-bbox="818 1335 1002 1383">Ones</th></tr></thead><tbody><tr><td data-bbox="634 1383 818 1562"></td><td data-bbox="818 1383 1002 1562"></td></tr></tbody></table>	Tens	Ones			
Tens	Ones					
32	<table border="1"><thead><tr><th data-bbox="634 1629 818 1677">Tens</th><th data-bbox="818 1629 1002 1677">Ones</th></tr></thead><tbody><tr><td data-bbox="634 1677 818 1856"></td><td data-bbox="818 1677 1002 1856"></td></tr></tbody></table>	Tens	Ones			
Tens	Ones					

Name: _____

Fill in the Chart

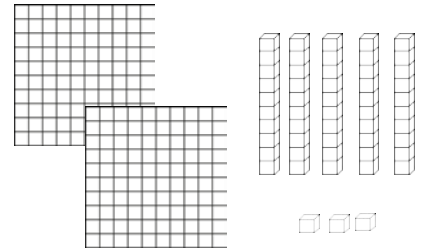
$40 + 7$	<table border="1"><thead><tr><th>Tens</th><th>Ones</th></tr></thead><tbody><tr><td>4</td><td>7</td></tr></tbody></table>	Tens	Ones	4	7	
Tens	Ones					
4	7					
	<table border="1"><thead><tr><th>Tens</th><th>Ones</th></tr></thead><tbody><tr><td>6</td><td>4</td></tr></tbody></table>	Tens	Ones	6	4	
Tens	Ones					
6	4					
	<table border="1"><thead><tr><th>Tens</th><th>Ones</th></tr></thead><tbody><tr><td></td><td></td></tr></tbody></table>	Tens	Ones			
Tens	Ones					
	<table border="1"><thead><tr><th>Tens</th><th>Ones</th></tr></thead><tbody><tr><td>3</td><td>6</td></tr></tbody></table>	Tens	Ones	3	6	
Tens	Ones					
3	6					
$70 + 5$	<table border="1"><thead><tr><th>Tens</th><th>Ones</th></tr></thead><tbody><tr><td></td><td></td></tr></tbody></table>	Tens	Ones			
Tens	Ones					

Name: _____

Fill in the Chart

253

Hundreds	Tens	Ones
2	5	3



418

Hundreds	Tens	Ones

627

Hundreds	Tens	Ones

302

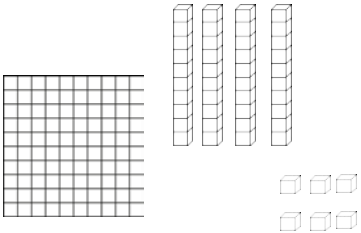
Hundreds	Tens	Ones

164

Hundreds	Tens	Ones

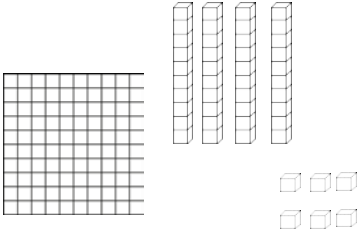

Name: _____

Fill in the Chart

146	<table border="1"><thead><tr><th>Hundreds</th><th>Tens</th><th>Ones</th></tr></thead><tbody><tr><td>1</td><td>4</td><td>6</td></tr></tbody></table>	Hundreds	Tens	Ones	1	4	6	
Hundreds	Tens	Ones						
1	4	6						
418	<table border="1"><thead><tr><th>Hundreds</th><th>Tens</th><th>Ones</th></tr></thead><tbody><tr><td></td><td></td><td></td></tr></tbody></table>	Hundreds	Tens	Ones				
Hundreds	Tens	Ones						
627	<table border="1"><thead><tr><th>Hundreds</th><th>Tens</th><th>Ones</th></tr></thead><tbody><tr><td></td><td></td><td></td></tr></tbody></table>	Hundreds	Tens	Ones				
Hundreds	Tens	Ones						
302	<table border="1"><thead><tr><th>Hundreds</th><th>Tens</th><th>Ones</th></tr></thead><tbody><tr><td></td><td></td><td></td></tr></tbody></table>	Hundreds	Tens	Ones				
Hundreds	Tens	Ones						
164	<table border="1"><thead><tr><th>Hundreds</th><th>Tens</th><th>Ones</th></tr></thead><tbody><tr><td></td><td></td><td></td></tr></tbody></table>	Hundreds	Tens	Ones				
Hundreds	Tens	Ones						

Name: _____

Fill in the Chart

$100 + 40 + 6$	<table border="1"><thead><tr><th>Hundreds</th><th>Tens</th><th>Ones</th></tr></thead><tbody><tr><td>1</td><td>4</td><td>6</td></tr></tbody></table> 	Hundreds	Tens	Ones	1	4	6	
Hundreds	Tens	Ones						
1	4	6						
	<table border="1"><thead><tr><th>Hundreds</th><th>Tens</th><th>Ones</th></tr></thead><tbody><tr><td>5</td><td>7</td><td>1</td></tr></tbody></table>	Hundreds	Tens	Ones	5	7	1	
Hundreds	Tens	Ones						
5	7	1						
$300 + 50 + 9$	<table border="1"><thead><tr><th>Hundreds</th><th>Tens</th><th>Ones</th></tr></thead><tbody><tr><td></td><td></td><td></td></tr></tbody></table>	Hundreds	Tens	Ones				
Hundreds	Tens	Ones						
	<table border="1"><thead><tr><th>Hundreds</th><th>Tens</th><th>Ones</th></tr></thead><tbody><tr><td></td><td></td><td></td></tr></tbody></table> 	Hundreds	Tens	Ones				
Hundreds	Tens	Ones						
	<table border="1"><thead><tr><th>Hundreds</th><th>Tens</th><th>Ones</th></tr></thead><tbody><tr><td>6</td><td>2</td><td>8</td></tr></tbody></table>	Hundreds	Tens	Ones	6	2	8	
Hundreds	Tens	Ones						
6	2	8						

Name: _____

Write the number in different ways.

number form	word form	expanded form
24		
	forty-two	
		$70 + 4$
	eighteen	
63		
		$20 + 4$
	sixty-five	

Name: _____

Write the number in different ways.

number form	word form	expanded form
	fifty-one	
72		
		$60 + 5$
	twenty-six	
		$40 + 9$
81		
	thirty-one	

Name: _____

Write the number in different ways.

number form	word form	expanded form
717		
	two hundred twenty-five	
		$800 + 20 + 6$
	nine hundred eighty-one	
528		
		$600 + 30 + 9$
	four hundred six	

Name: _____

Write the number in different ways.

number form	word form	expanded form
		$700 + 80 + 5$
	four hundred twenty-one	
824		
	seven hundred fifty-six	
605		
		$300 + 40 + 2$
518		

Name: _____

Write the number in different ways.

number form	word form	expanded form
4,294		
	six thousand, two hundred fifty-nine	
		$5,000 + 300 + 10 + 9$
	one thousand, four hundred twenty-eight	
8,057		
		$7,000 + 800 + 20 + 3$
	two thousand, five hundred eighty-four	

Name: _____

Write the number in different ways.

number form	word form	expanded form
	seven thousand, four hundred nineteen	
3,928		
		$6,000 + 800 + 20 + 6$
5,931		
	six thousand, five hundred fifty-six	
		$4,000 + 200 + 10 + 7$
8,219		

Name: _____

Write the Value

Complete the place value chart.

The number is: 64

DIGIT	PLACE VALUE	DIGIT VALUE
6	Tens	60
4	Ones	4

The number is: 85

DIGIT	PLACE VALUE	DIGIT VALUE
	Tens	
	Ones	

The number is: 30

DIGIT	PLACE VALUE	DIGIT VALUE
	Tens	
	Ones	

The number is: 52

DIGIT	PLACE VALUE	DIGIT VALUE
	Tens	
	Ones	

The number is: 93

DIGIT	PLACE VALUE	DIGIT VALUE
	Tens	
	Ones	

The number is: 28

DIGIT	PLACE VALUE	DIGIT VALUE
	Tens	
	Ones	

The number is: 47

DIGIT	PLACE VALUE	DIGIT VALUE
	Tens	
	Ones	

The number is: 71

DIGIT	PLACE VALUE	DIGIT VALUE
	Tens	
	Ones	

Name: _____

Write the Value

Complete the place value chart.

The number is: 273

DIGIT	PLACE VALUE	DIGIT VALUE
2	Hundreds	200
7	Tens	70
3	Ones	3

The number is: 460

DIGIT	PLACE VALUE	DIGIT VALUE
	Hundreds	
	Tens	
	Ones	

The number is: 718

DIGIT	PLACE VALUE	DIGIT VALUE
	Hundreds	
	Tens	
	Ones	

The number is: 629

DIGIT	PLACE VALUE	DIGIT VALUE
	Hundreds	
	Tens	
	Ones	

The number is: 358

DIGIT	PLACE VALUE	DIGIT VALUE
	Hundreds	
	Tens	
	Ones	

The number is: 167

DIGIT	PLACE VALUE	DIGIT VALUE
	Hundreds	
	Tens	
	Ones	

The number is: 542

DIGIT	PLACE VALUE	DIGIT VALUE
	Hundreds	
	Tens	
	Ones	

The number is: 891

DIGIT	PLACE VALUE	DIGIT VALUE
	Hundreds	
	Tens	
	Ones	

Name: _____

Write the Value

Complete the place value chart.

The number is: 4,815

DIGIT	PLACE VALUE	DIGIT VALUE
4	Thousands	4,000
8	Hundreds	800
1	Tens	10
5	Ones	5

The number is: 7,320

DIGIT	PLACE VALUE	DIGIT VALUE
	Thousands	
	Hundreds	
	Tens	
	Ones	

The number is: 6,483

DIGIT	PLACE VALUE	DIGIT VALUE
	Thousands	
	Hundreds	
	Tens	
	Ones	

The number is: 1,592

DIGIT	PLACE VALUE	DIGIT VALUE
	Thousands	
	Hundreds	
	Tens	
	Ones	

The number is: 3,256

DIGIT	PLACE VALUE	DIGIT VALUE
	Thousands	
	Hundreds	
	Tens	
	Ones	

The number is: 5,217

DIGIT	PLACE VALUE	DIGIT VALUE
	Thousands	
	Hundreds	
	Tens	
	Ones	

The number is: 2,176

DIGIT	PLACE VALUE	DIGIT VALUE
	Thousands	
	Hundreds	
	Tens	
	Ones	

The number is: 9,593

DIGIT	PLACE VALUE	DIGIT VALUE
	Thousands	
	Hundreds	
	Tens	
	Ones	

Name: _____

Practicing Word Form

Write the word form of each number.

83	eighty-three
52	
19	
67	
35	
48	

Name: _____

Practicing Word Form

Write the word form of each number.

72	seventy-two
38	
42	
59	
26	
85	

Name: _____

Practicing Word Form

Write the word form of each number.

571

five hundred seventy-one

182

396

473

807

653

Name: _____

Practicing Word Form

Write the word form of each number.

835	eight hundred thirty-five
361	
495	
217	
957	
583	

Name: _____

Practicing Word Form

Write the word form of each number.

3,862	three thousand, eight hundred sixty-two
4,295	
9,061	
5,781	
6,304	
1,493	

Name: _____

Practicing Expanded Form

Write the expanded form of each number.

38	$30 + 8$
29	
61	
53	
94	
72	

Name: _____

Practicing Expanded Form

Write the expanded form of each number.

73	$70 + 3$
48	
26	
64	
90	
57	
71	
36	
29	
95	
82	

Name: _____

Practicing Expanded Form

Write the expanded form of each number.

739

$$700 + 30 + 9$$

472

186

506

375

293

Name: _____

Practicing Expanded Form

Write the expanded form of each number.

395	$300 + 90 + 5$
264	
835	
721	
507	
168	
528	
474	
109	
487	
725	

Name: _____

Practicing Expanded Form

Write the expanded form of each number.

5,238	$5,000 + 200 + 30 + 8$
8,181	
1,083	
3,829	
7,267	
2,356	
4,218	
6,071	
9,284	
2,849	
5,020	

Name: _____

Writing Numbers in Standard Form

Write the standard form in each number.

$200 + 60 + 8$	268
$700 + 50 + 4$	
$300 + 10 + 2$	
$800 + 30 + 0$	
$100 + 80 + 1$	
$500 + 40 + 7$	
$60 + 3 + 600$	
$7 + 200 + 40$	
$80 + 4 + 200$	
$900 + 60 + 8$	
$90 + 100 + 3$	

Name: _____

Where do the commas belong?

Add commas where they should be.

3820	2941	6872
52986	37562	20855
582578	103984	863723
4821	58293	2494
41849	882	284929

Name: _____

Practicing Word Form

Add commas where they should belong.

Write the word form of each number..

3,571	three thousand, five hundred seventy-one
94624	
635946	
2895	
6806	

Name: _____

Mystery Numbers

I have 2 tens
and 5 ones.

What number am I?

I have 9 tens
and 0 ones.

What number am I?

I have 3 tens
and 8 ones.

What number am I?

I have 1 tens
and 7 ones.

What number am I?

Name: _____

Mystery Numbers

I have 3 tens
and 8 ones.

What number am I?

I have 6 tens
and 5 ones.

What number am I?

I have 9 tens
and 1 ones.

What number am I?

I have 2 tens
and 4 ones.

What number am I?

I have 7 tens
and 0 ones.

What number am I?

I have 3 tens
and 9 ones.

What number am I?

Name: _____

Mystery Numbers

I have 4 tens and 9 ones. What number am I? <input type="text"/>	I have 3 tens and 5 ones. What number am I? <input type="text"/>	I have 1 tens and 7 ones. What number am I? <input type="text"/>
I have 8 ones and 4 tens. What number am I? <input type="text"/>	I have 6 tens and 0 ones. What number am I? <input type="text"/>	I have 7 tens and 9 ones. What number am I? <input type="text"/>
I have 3 tens and 2 ones. What number am I? <input type="text"/>	I have 8 ones and 5 tens. What number am I? <input type="text"/>	I have 6 ones and 2 tens. What number am I? <input type="text"/>
I have 8 ones and 0 tens. What number am I? <input type="text"/>	I have 2 tens and 5 ones. What number am I? <input type="text"/>	I have 9 ones and 5 tens. What number am I? <input type="text"/>

Name: _____

Mystery Numbers

<p>I have 6 hundreds, 4 tens and 9 ones.</p> <p>What number am I?</p> <input type="text"/>	<p>I have 7 hundreds, 1 tens and 5 ones.</p> <p>What number am I?</p> <input type="text"/>	<p>I have 9 hundreds, 3 tens and 2 ones.</p> <p>What number am I?</p> <input type="text"/>
<p>I have 2 tens, 8 ones, and 4 hundreds.</p> <p>What number am I?</p> <input type="text"/>	<p>I have 5 ones, 4 hundreds and 7 tens.</p> <p>What number am I?</p> <input type="text"/>	<p>I have 9 hundreds, 3 tens and 2 ones.</p> <p>What number am I?</p> <input type="text"/>
<p>I have 6 tens, 0 ones, and 5 hundreds.</p> <p>What number am I?</p> <input type="text"/>	<p>I have 6 hundreds, 4 tens and 9 ones.</p> <p>What number am I?</p> <input type="text"/>	<p>I have 8 ones, 3 hundreds and 1 tens.</p> <p>What number am I?</p> <input type="text"/>
<p>I have 7 hundreds, 1 tens and 5 ones.</p> <p>What number am I?</p> <input type="text"/>	<p>I have 2 ones, 5 hundreds and 9 tens.</p> <p>What number am I?</p> <input type="text"/>	<p>I have 8 tens, 1 ones, and 3 hundreds.</p> <p>What number am I?</p> <input type="text"/>

Name: _____

1 More & 1 Less

1 Less	The number is...	1 More
	27	
	37	
	61	
	49	
	68	
	31	
	20	
	74	
	58	
	85	

Name: _____

10 More & 10 Less

10 Less	The number is...	10 More
	37	
	29	
	85	
	50	
	61	
	46	
	90	
	72	
	48	
	89	

Name: _____

1 More & 1 Less

1 Less	The number is...	1 More
	724	
	250	
	468	
	391	
	805	
	799	
	183	
	527	
	950	
	721	

Name: _____

10 More & 10 Less

10 Less	The number is...	10 More
	820	
	246	
	185	
	603	
	757	
	902	
	590	
	428	
	724	
	962	

Name: _____

100 More & 100 Less

100 Less	The number is...	100 More
	460	
	717	
	892	
	164	
	700	
	613	
	268	
	351	
	562	
	900	

Name: _____

1 More & 1 Less

1 Less	The number is...	1 More
	6,928	
	3,081	
	1,264	
	9,375	
	5,284	
	6,183	
	2,481	
	4,811	
	7,104	
	9,300	

Name: _____

10 More & 10 Less

10 Less	The number is...	10 More
	5,184	
	9,281	
	8,479	
	1,959	
	4,936	
	3,071	
	7,289	
	6,019	
	8,848	
	5,270	

Name: _____

100 More & 100 Less

100 Less	The number is...	100 More
	8,191	
	3,991	
	9,850	
	2,498	
	5,881	
	4,992	
	6,284	
	1,078	
	7,273	
	8,287	

Name: _____

1,000 More & 1,000 Less

1,000 Less	The number is...	1,000 More
	6,298	
	2,081	
	4,174	
	9,000	
	1,472	
	3,827	
	5,267	
	7,389	
	5,187	
	8,938	