

2nd Grade Emergency Sub Plans

created by

The Curriculum Corner

Name: _____

What is your Number?

1.

2.

3.

4.

5.

6.

7.

8.

9.

10.

11.

12.

Name: _____

What is your Number?

standard form

expanded form

1.

2.

3.

standard form

expanded form

4.

5.

6.

1

2

3

4

5

6

7

8

9

0

10

20

30

40

50

60

70

80

90

100

200

300

400

500

600

700

800

900

1,000

2,000

3,000

4,000

5,000

6,000

7,000

8,000

9,000

Comparing Numbers

The first
number I
made is:

The
second
number I
made is:

Comparing Numbers

The first
number I
made is:

The
second
number I
made is:

Name: _____

Comparing your Numbers

Directions: Write the two numbers you made. Compare the numbers by writing $<$, $=$ or $>$ in the gray box.

--	--	--

--	--	--

--	--	--

--	--	--

--	--	--



--	--	--

--	--	--

--	--	--

--	--	--

--	--	--



Name: _____

Circle the bigger number
in each box.



728

328

401

410

938

398

592


918

137

645


831

813



390

309



Name: _____

Circle the bigger number
in each box.



2,193

4,103

7,541

6,687

8,102

8,120

7,429


8,382

3,482

2,091


5,067

5,607



1,341

1,431



Name: _____

Comparing the Numbers

Write $<$, $>$ or $=$.



183		219
-----	--	-----

921		849
-----	--	-----

542		613
-----	--	-----


321		312
-----	--	-----

702		720
-----	--	-----

423		413
-----	--	-----

871		781
-----	--	-----

121		120
-----	--	-----



725		724
-----	--	-----



Name: _____

Comparing the Numbers

Write $<$, $>$ or $=$.



4,928		5,293
-------	--	-------

2,038		1,875
-------	--	-------

8,637		7,026
-------	--	-------


3,871		3,861
-------	--	-------

6,281		6,201
-------	--	-------

1,909		1,910
-------	--	-------

2,598		2,599
-------	--	-------

4,653		4,623
-------	--	-------



8,231		8,241
-------	--	-------



Name: _____



Story Map

The title is: _____

The author is: _____

main character(s)

setting

beginning

problem

middle

solution

end

Name: _____

I CAN READ INFORMATIONAL TEXT!

The title is: _____

The author is: _____

This main idea is:

Share four details you learned.

1.

2.

3.

4.

Name: _____

word family sort

-ack words

-ake words

back

pack

bake

black

brake

cake

take

sack

make

stack

Name: _____

Forest Boggle

o	e	e	r	t	s	n	a	k	e
w	o	l	f	n	i	b	o	r	a
l	d	e	e	r	a	e	o	d	r
i	s	q	u	i	r	r	e	l	t
f	r	o	g	v	d	a	b	e	h
n	e	s	t	e	r	g	u	l	n
w	k	g	w	r	i	l	c	t	r
a	i	g	o	s	b	e	a	r	o
f	h	e	l	p	a	t	h	u	c
f	o	x	f	e	t	a	n	t	a

Write the words you find in the boxes below.

can

not

has

not

have

not

will

not

should

not

could

not

would

not

is

not

I

am

I

will

I

would

I

have

you

are

we

are

they

are

who

will

+

form the contraction

+

form the contraction

+


form the contraction

+

form the contraction


Name: _____

What happened?




Name: _____

Why is he hiding?



Name: _____

What is WRONG?



Name: _____



Chipmunks

Chipmunks are a type of rodent that live in North America. Chipmunks build large burrows. They are omnivores who eat mostly seeds, nuts and other fruits. They also eat grass, other plants, insects and small frogs. They are well known for stockpiling their foods for winter. Pouches in their cheeks make it easier for them to carry food to their burrows for storage.



Squirrels

Squirrels are a type of rodent that can be found throughout the world. There are many different species of squirrels. Most squirrels are omnivores who eat seeds and nuts along with insects or small vertebrates. Most squirrels live in trees or build burrows underground. Squirrels tend to have good vision and are known for being fast along with having a bushy tail.



Name: _____

Compare & Contrast

