


Name: _____


What is elapsed time?

Do you know what elapsed time is?

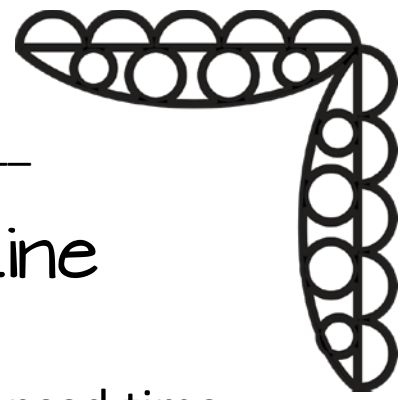

It tells us how much time has _____.



If we go to the playground at 2:00 and come home at 2:45, how long were we at the playground?



If we go to the library at 10:15 and come home at 11:15, how long were we at the library?

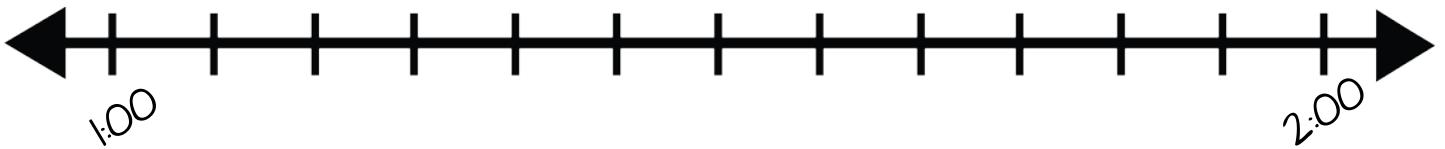


Name: _____

Elapsed Time Number Line

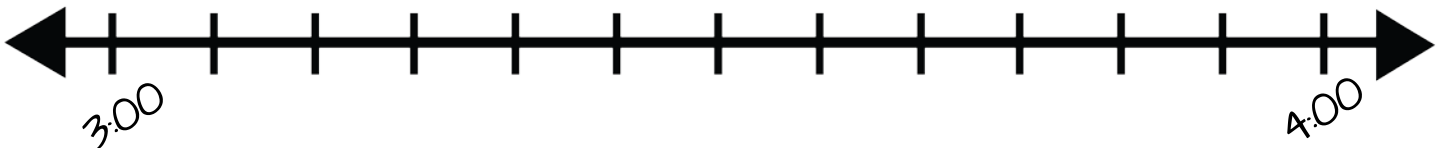
Use the number line to help you find the elapsed time.

Start time: 1:10 a.m.	End time: 1:45 a.m.
-----------------------	---------------------



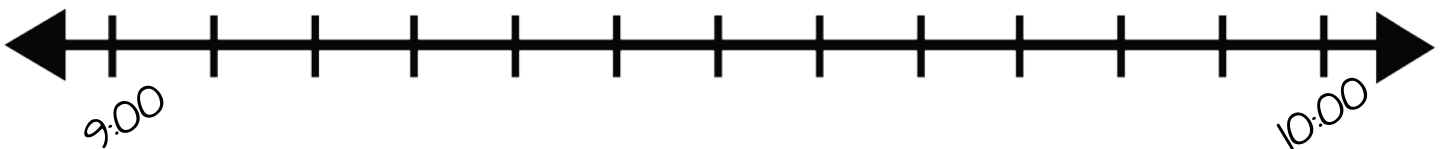
The elapsed time is: _____

Start time: 3:05 p.m.	End time: 3:50 a.m.
-----------------------	---------------------

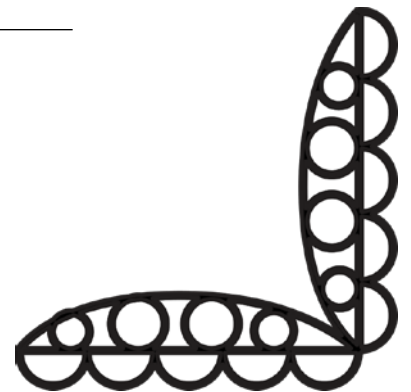




The elapsed time is: _____

Start time: 9:20 p.m.	End time: 10:00 p.m.
-----------------------	----------------------



The elapsed time is: _____





Name: _____

How much time has passed?

Find the elapsed time for each start and end time.

Start Time	End Time	Elapsed Time
4:00 a.m.	5:00 a.m.	
8:15 a.m.	9:00 a.m.	
1:15 p.m.	2:45 p.m.	
3:30 p.m.	7:00 p.m.	
11:00 a.m.	2:15 p.m.	
9:10 p.m.	11:30 p.m.	
2:00 a.m.	3:35 a.m.	
10:45 a.m.	1:00 p.m.	




Name: _____

How much time has passed?

Find the elapsed time for each start and end time.

Start Time	End Time	Elapsed Time
6:45 a.m.	9:30 a.m.	
noon	2:45 p.m.	
8:15 p.m.	11:05 p.m.	
10:30 a.m.	3:15 p.m.	
2:55 p.m.	6:05 p.m.	
11:30 p.m.	1:10 a.m.	
4:35 p.m.	9:10 p.m.	
1:25 a.m.	4:45 a.m.	



Name: _____

How much time has passed?

Find the end time for each start time and elapsed time.

Start Time	End Time	Elapsed Time
7:10 a.m.		20 minutes
10:20 p.m.		45 minutes
2:50 p.m.		15 minutes
4:00 a.m.		10 minutes
9:45 p.m.		30 minutes
6:40 a.m.		25 minutes
11:20 a.m.		5 minutes
3:25 p.m.		40 minutes




Name: _____

How much time has passed?

Find the end time for each start time and elapsed time.

Start Time	End Time	Elapsed Time
8:15 p.m.		2 hours, 10 minutes
2:35 p.m.		3 hours, 5 minutes
11:05 a.m.		2 hours, 35 minutes
4:55 p.m.		1 hour, 45 minutes
1:20 a.m.		3 hours, 20 minutes
10:40 a.m.		2 hours, 40 minutes
3:10 p.m.		3 hours, 5 minutes
9:00 a.m.		2 hours, 25 minutes



Name: _____

Time Hunt

Color the squares that show 15 minutes of elapsed time.

3:15 a.m.
to
3:30 a.m.

7:10 a.m.
to
7:40 a.m.

11:45 p.m.
to
1:00 p.m.

9:30 p.m.
to
9:45 p.m.

5:35 a.m.
to
5:50 a.m.

1:50 a.m.
to
2:05 a.m.

12:05 p.m.
to
12:30 p.m.

4:40 p.m.
to
4:55 p.m.


2:25 a.m.
to
2:40 a.m.

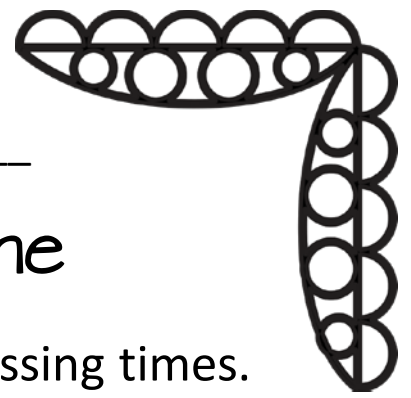

8:20 p.m.
to
8:40 p.m.

10:20 a.m.
to
10:50 a.m.

6:50 p.m.
to
7:05 p.m.

11:05 a.m.
to
11:20 a.m.





Name: _____

Show the Passing Time

Count by 20 minutes below. Write in the missing times.

6:00 p.m., 6:20 p.m., _____, _____

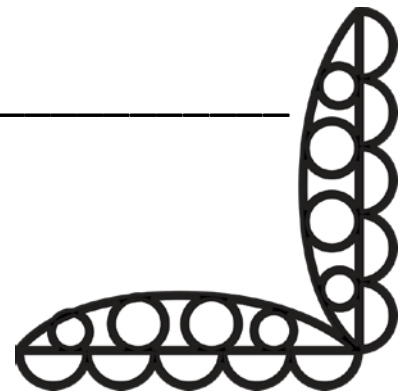
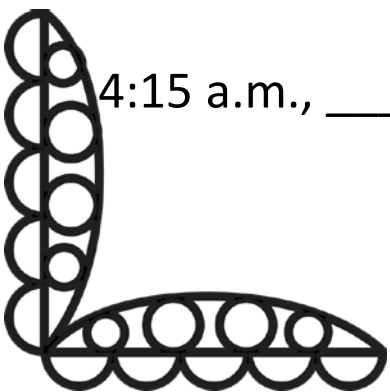
1:00 a.m., _____, _____, _____

10:30 a.m., 10:50 a.m., _____, _____

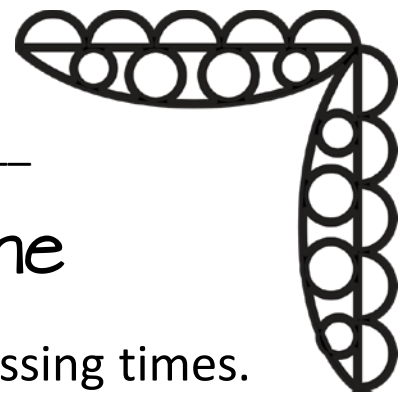

3:40 p.m., _____, _____, _____

8:05 p.m., _____, _____, _____

11:20 p.m., _____, _____, _____



4:15 a.m., _____, _____, _____



Name: _____

Show the Passing Time

Count by 35 minutes below. Write in the missing times.

2:00 p.m., 2:35 p.m., _____, _____

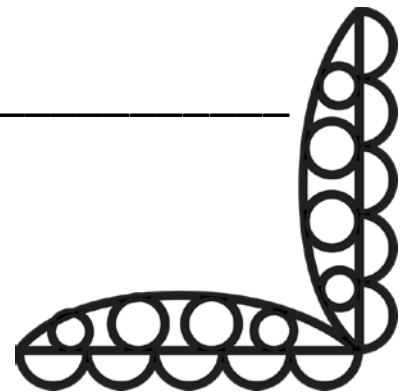
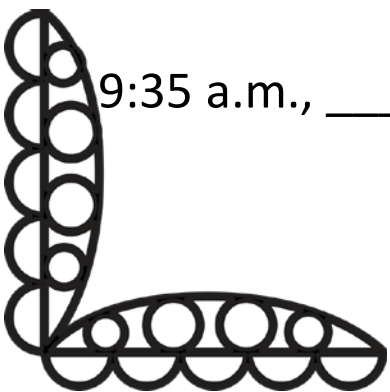
10:05 a.m., _____, _____, _____

7:45 a.m. _____, _____, _____



4:20 p.m., _____, _____, _____

11:30 p.m., _____, _____, _____

5:10 a.m., _____, _____, _____



9:35 a.m., _____, _____, _____



Name: _____

Can you find the elapsed time?

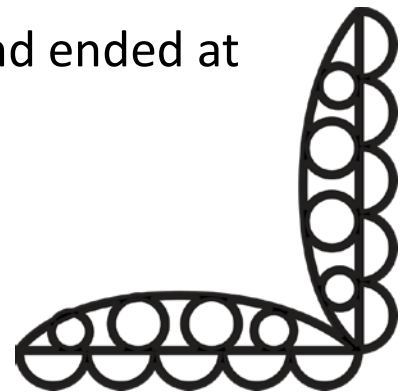

If a game started at 7:05 p.m. and ended at 8:55, how long did it last?


We watched a movie that started at 2:45 p.m. and ended at 4:51 p.m. How long was the movie?

I started reading my new book at 5:55. I finished it at 7:22. How long did it take me to read the book?

We went on a hike in the woods and then a picnic at 10:15 a.m. We got home at 1:28 p.m. How long were we gone?

My dance classes started at 4:30 p.m. today and ended at 7:15 p.m. How long did my dance classes last?





Name: _____



What is missing? Can you fill in the story with the correct times?


Chloe's Morning

It's been a busy hectic morning for Chloe! She set her alarm for 6:30 am but got up 15 minutes late. Oops! This means that she woke up at _____ instead of at 6:30. Her bus comes at 7:15 so she only had _____ minutes to get ready and eat breakfast.

She was on the bus for 20 minutes so she got to school at _____. Chloe ate breakfast in the café and made it to her classroom 15 minutes later at _____. She was ready start her day!

How much time passed from when she woke up until when she entered her classroom? _____







Name: _____

What is missing? Can you fill in the story with the correct times?

Saturday Plans

My family had so many plans on Saturday! We set the alarm for 8:30 and were out the door an hour later at _____ . Our first stop was 15 minutes away at our favorite donut spot. We got there at _____ . 30 minutes later (at _____) we were back in the car and headed to my sister's soccer game. Two hours after this we had to pack up and make it to my art show at _____ . An hour later (at _____) my exhausted family made it back home!




ANSWER KEY

What is elapsed time?


Do you know what elapsed time is?

It tells us how much time has passed.



If we go to the playground at 2:00 and come home at 2:45, how long were we at the playground?

45 minutes



If we go to the library at 10:15 and come home at 11:15, how long were we at the library?

1 hour



ANSWER KEY

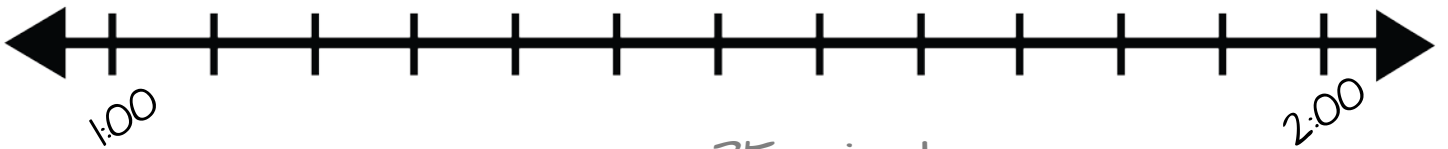
Elapsed Time Number Line



Use the number line to help you find the elapsed time.

Start time: 1:10 a.m.

End time: 1:45 a.m.



The elapsed time is: 35 minutes

Start time: 3:05 p.m.

End time: 3:50 a.m.



The elapsed time is: 45 minutes

Start time: 9:20 p.m.

End time: 10:00 p.m.



The elapsed time is: 40 minutes



ANSWER KEY

How much time has passed?

Find the elapsed time for each start and end time.

Start Time	End Time	Elapsed Time
4:00 a.m.	5:00 a.m.	1 hour
8:15 a.m.	9:00 a.m.	1 hour, 15 minutes
1:15 p.m.	2:45 p.m.	1 hour, 30 minutes
3:30 p.m.	7:00 p.m.	3 hours, 30 minutes
11:00 a.m.	2:15 p.m.	3 hours, 15 minutes
9:10 p.m.	11:30 p.m.	2 hours, 20 minutes
2:00 a.m.	3:35 a.m.	1 hour, 35 minutes
10:45 a.m.	1:00 p.m.	2 hours, 15 minutes



ANSWER KEY

How much time has passed?

Find the elapsed time for each start and end time.

Start Time	End Time	Elapsed Time
6:45 a.m.	9:30 a.m.	2 hours, 45 minutes
noon	2:45 p.m.	2 hours, 45 minutes
8:15 p.m.	11:05 p.m.	1 hour, 50 minutes
10:30 a.m.	3:15 p.m.	4 hours, 45 minutes
2:55 p.m.	6:05 p.m.	3 hours, 10 minutes
11:30 p.m.	1:10 a.m.	1 hour, 40 minutes
4:35 p.m.	9:10 p.m.	4 hours, 40 minutes
1:25 a.m.	4:45 a.m.	3 hours, 20 minutes



ANSWER KEY

How much time has passed?

Find the end time for each start time and elapsed time.

Start Time	End Time	Elapsed Time
7:10 a.m.	7:30 a.m.	20 minutes
10:20 p.m.	11:05 p.m.	45 minutes
2:50 p.m.	3:05 p.m.	15 minutes
4:00 a.m.	4:10 a.m.	10 minutes
9:45 p.m.	10:15 p.m.	30 minutes
6:40 a.m.	7:05 a.m.	25 minutes
11:20 a.m.	11:25 a.m.	5 minutes
3:25 p.m.	4:05 p.m.	40 minutes

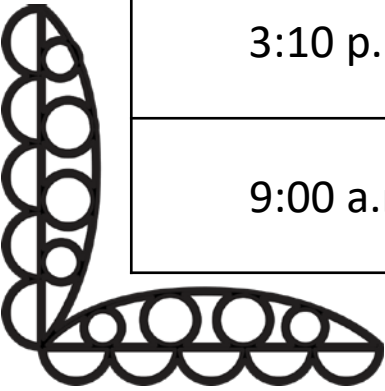


ANSWER KEY

How much time has passed?

Find the end time for each start time and elapsed time.

Start Time	End Time	Elapsed Time
8:15 p.m.	10:25 p.m.	2 hours, 10 minutes
2:35 p.m.	5:40 p.m.	3 hours, 5 minutes
11:05 a.m.	1:40 a.m.	2 hours, 35 minutes
4:55 p.m.	6:40 p.m.	1 hour, 45 minutes
1:20 a.m.	4:40 a.m.	3 hours, 20 minutes
10:40 a.m.	1:20 p.m.	2 hours, 40 minutes
3:10 p.m.	6:15 p.m.	3 hours, 5 minutes
9:00 a.m.	11:25 a.m.	2 hours, 25 minutes





ANSWER KEY

Time Hunt

Color the squares that show 15 minutes of elapsed time.

3:15 a.m.
to
3:30 a.m.

7:10 a.m.
to
7:40 a.m.

11:45 p.m.
to
1:00 p.m.

9:30 p.m.
to
9:45 p.m.

5:35 a.m.
to
5:50 a.m.

1:50 a.m.
to
2:05 a.m.

12:05 p.m.
to
12:30 p.m.

4:40 p.m.
to
4:55 p.m.


2:25 a.m.
to
2:40 a.m.

8:20 p.m.
to
8:40 p.m.

10:20 a.m.
to
10:50 a.m.

6:50 p.m.
to
7:05 p.m.

11:05 a.m.
to
11:20 a.m.





ANSWER KEY

Show the Passing Time

Count by 20 minutes below. Write in the missing times.

6:00 p.m., 6:20 p.m., 6:40 p.m., 7:00 p.m.

1:00 a.m., 1:20 a.m., 1:40 a.m., 2:00 a.m.

10:30 a.m., 10:50 a.m., 11:10 p.m., 11:30 p.m.

3:40 p.m., 4:00 p.m., 4:20 p.m., 4:40 p.m.

8:05 p.m., 8:25 p.m., 8:45 p.m., 9:05 p.m.

11:20 p.m., 11:40 p.m., 12:00 a.m., 12:20 a.m.

4:15 a.m., 4:35 a.m., 4:55 a.m., 5:15 a.m.



ANSWER KEY

Show the Passing Time

Count by 35 minutes below. Write in the missing times.

2:00 p.m., 2:35 p.m., 3:10 p.m., 3:40 p.m.

10:05 a.m., 10:40 a.m., 11:15 a.m., 11:50 a.m.

7:45 a.m. 8:20 a.m., 8:55 a.m., 9:30 a.m.

4:20 p.m., 4:55 p.m., 5:30 p.m., 6:05 p.m.

11:30 p.m., 12:05 a.m., 12:40 a.m., 1:15 a.m.

5:10 a.m., 5:45 p.m., 6:20 p.m., 6:55 p.m.

9:35 a.m., 10:15 p.m., 10:50 p.m., 11:25 p.m.



ANSWER KEY

Can you find the elapsed time?



If a game started at 7:05 p.m. and ended at 8:55, how long did it last?

1 hour, 50 minutes

We watched a movie that started at 2:45 p.m. and ended at 4:51 p.m. How long was the movie?


2 hours, 6 minutes

I started reading my new book at 5:55. I finished it at 7:22. How long did it take me to read the book?

1 hour, 27 minutes

We went on a hike in the woods and then a picnic at 10:15 a.m. We got home at 1:28 p.m. How long were we gone?

3 hours, 13 minutes



My dance classes started at 4:30 p.m. today and ended at 7:15 p.m. How long did my dance classes last?

2 hours, 45 minutes





ANSWER KEY

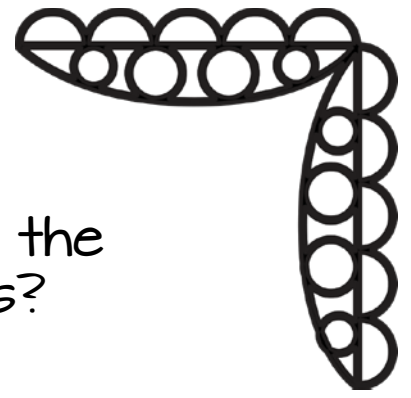
What is missing? Can you fill in the story with the correct times?

Chloe's Morning

It's been a busy hectic morning for Chloe! She set her alarm for 6:30 am but got up 15 minutes late. Oops! This means that she woke up at 6:45 a.m. instead of at 6:30. Her bus comes at 7:15 so she only had 45 minutes to get ready and eat breakfast.

She was on the bus for 20 minutes so she got to school at 7:35 a.m.. Chloe ate breakfast in the café and made it to her classroom 15 minutes later at 7:50 a.m.. She was ready start her day!

How much time passed from when she woke up until when she entered her classroom? 1 hour, 10 minutes



ANSWER KEY

What is missing? Can you fill in the story with the correct times?

Saturday Plans

My family had so many plans on Saturday! We set the alarm for 8:30 and were out the door an hour later at 9:30 a.m.. Our first stop was 15 minutes away at our favorite donut spot. We got there at 9:45 a.m.. 30 minutes later (at 10:15 a.m.) we were back in the car and headed to my sister's soccer game. Two hours after this we had to pack up and make it to my art show at 12:15 p.m.. An hour later (at 1:15 p.m.) my exhausted family made it back home!

