



# Find a Fact



Find at least 5 multiplication and 5 division facts below. Circle the fact and write in  $\times$  or  $\div$  and an  $=$  sign.



|    |   |    |    |    |    |    |    |
|----|---|----|----|----|----|----|----|
| 5  | 5 | 25 | 10 | 3  | 4  | 12 | 21 |
| 9  | 3 | 27 | 2  | 4  | 8  | 9  | 7  |
| 8  | 5 | 4  | 9  | 36 | 5  | 8  | 3  |
| 9  | 9 | 81 | 6  | 5  | 40 | 72 | 3  |
| 6  | 7 | 42 | 21 | 7  | 3  | 20 | 6  |
| 3  | 6 | 48 | 6  | 8  | 54 | 10 | 28 |
| 63 | 7 | 9  | 6  | 4  | 6  | 2  | 4  |
| 56 | 7 | 8  | 36 | 3  | 9  | 27 | 7  |




# Find a Fact



Find at least 5 multiplication and 5 division facts below. Circle the fact and write in  $\times$  or  $\div$  and an  $=$  sign.

|    |    |    |    |    |    |    |    |
|----|----|----|----|----|----|----|----|
| 5  | 5  | 25 | 6  | 9  | 54 | 7  | 10 |
| 2  | 9  | 3  | 3  | 7  | 7  | 49 | 2  |
| 2  | 9  | 72 | 9  | 8  | 35 | 7  | 5  |
| 4  | 18 | 3  | 6  | 6  | 24 | 8  | 3  |
| 42 | 6  | 7  | 8  | 4  | 6  | 7  | 42 |
| 4  | 5  | 6  | 30 | 24 | 8  | 4  | 32 |
| 4  | 3  | 12 | 4  | 4  | 16 | 9  | 4  |
| 9  | 7  | 63 | 6  | 42 | 7  | 6  | 3  |



# Find a Fact



Find at least 5 multiplication and 5 division facts below. Circle the fact and write in  $\times$  or  $\div$  and an  $=$  sign.




|    |   |    |    |    |    |    |    |
|----|---|----|----|----|----|----|----|
| 5  | 5 | 25 | 10 | 7  | 70 | 2  | 4  |
| 8  | 4 | 5  | 20 | 2  | 10 | 7  | 8  |
| 6  | 7 | 42 | 64 | 8  | 8  | 14 | 32 |
| 48 | 7 | 8  | 2  | 16 | 7  | 9  | 63 |
| 3  | 6 | 18 | 10 | 36 | 9  | 4  | 6  |
| 48 | 8 | 6  | 40 | 8  | 5  | 7  | 35 |
| 7  | 3 | 27 | 3  | 9  | 7  | 8  | 56 |
| 45 | 9 | 5  | 6  | 30 | 54 | 9  | 6  |




# Find a Fact

Find at least 5 multiplication and 5 division facts below. Circle the fact and write in  $\times$  or  $\div$  and an  $=$  sign.



|    |    |    |    |    |    |    |    |
|----|----|----|----|----|----|----|----|
| 5  | 5  | 25 | 20 | 8  | 8  | 64 | 10 |
| 8  | 7  | 56 | 4  | 3  | 3  | 9  | 5  |
| 14 | 6  | 10 | 5  | 8  | 7  | 6  | 42 |
| 7  | 3  | 6  | 9  | 7  | 63 | 3  | 8  |
| 2  | 18 | 60 | 6  | 8  | 4  | 8  | 32 |
| 9  | 8  | 72 | 6  | 7  | 7  | 49 | 9  |
| 48 | 6  | 8  | 36 | 9  | 6  | 8  | 48 |
| 21 | 3  | 7  | 4  | 28 | 90 | 10 | 9  |







# Find a Fact

Find at least 5 multiplication and 5 division facts below. Circle the fact and write in  $\times$  or  $\div$  and an  $=$  sign.

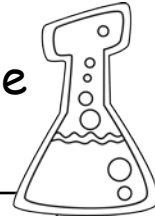

|    |    |    |    |    |   |    |    |
|----|----|----|----|----|---|----|----|
| 5  | 5  | 25 | 36 | 4  | 9 | 3  | 3  |
| 3  | 4  | 12 | 56 | 7  | 8 | 5  | 40 |
| 63 | 42 | 6  | 7  | 4  | 6 | 4  | 24 |
| 9  | 3  | 9  | 27 | 28 | 7 | 5  | 35 |
| 7  | 5  | 35 | 7  | 21 | 3 | 7  | 6  |
| 63 | 15 | 6  | 8  | 48 | 8 | 3  | 81 |
| 7  | 7  | 49 | 56 | 3  | 7 | 21 | 9  |
| 8  | 56 | 7  | 8  | 2  | 8 | 16 | 9  |



# Find a Fact



Find at least 5  
multiplication and 5  
division facts below.  
Circle the fact and write  
in  $\times$  or  $\div$  and an  $=$  sign.




|    |    |    |    |    |    |    |    |
|----|----|----|----|----|----|----|----|
| 5  | 5  | 25 | 6  | 6  | 36 | 2  | 7  |
| 6  | 7  | 9  | 63 | 3  | 6  | 3  | 18 |
| 49 | 7  | 7  | 3  | 42 | 7  | 6  | 5  |
| 8  | 7  | 56 | 7  | 8  | 4  | 32 | 4  |
| 40 | 5  | 8  | 21 | 63 | 9  | 7  | 20 |
| 36 | 30 | 7  | 8  | 7  | 56 | 4  | 24 |
| 9  | 6  | 54 | 16 | 4  | 4  | 28 | 3  |
| 4  | 5  | 48 | 6  | 8  | 64 | 8  | 8  |





# Find a Fact

Find at least 5 multiplication and 5 division facts below.  
Circle the fact and write in  $\times$  or  $\div$  and an  $=$  sign.




|    |    |    |    |    |    |    |    |
|----|----|----|----|----|----|----|----|
| 5  | 5  | 25 | 7  | 6  | 10 | 5  | 2  |
| 5  | 42 | 7  | 6  | 6  | 45 | 9  | 5  |
| 6  | 2  | 6  | 12 | 36 | 7  | 4  | 28 |
| 30 | 8  | 8  | 64 | 32 | 8  | 4  | 2  |
| 7  | 16 | 4  | 4  | 8  | 7  | 56 | 8  |
| 18 | 82 | 9  | 9  | 3  | 4  | 12 | 16 |
| 2  | 8  | 56 | 8  | 7  | 9  | 7  | 63 |
| 9  | 3  | 6  | 18 | 6  | 8  | 48 | 8  |





# Find a Fact

Find at least 5 multiplication and 5 division facts below. Circle the fact and write in x or ÷ and an = sign.



|    |    |    |    |    |    |    |    |
|----|----|----|----|----|----|----|----|
| 5  | 5  | 25 | 9  | 7  | 6  | 42 | 72 |
| 6  | 70 | 7  | 10 | 4  | 3  | 9  | 8  |
| 2  | 3  | 6  | 2  | 9  | 18 | 9  | 9  |
| 4  | 9  | 35 | 7  | 5  | 32 | 81 | 4  |
| 6  | 3  | 8  | 24 | 24 | 8  | 7  | 9  |
| 7  | 27 | 21 | 7  | 3  | 4  | 7  | 36 |
| 42 | 72 | 8  | 9  | 8  | 32 | 49 | 5  |
| 7  | 90 | 9  | 10 | 8  | 8  | 64 | 9  |

