



Fact Hunt

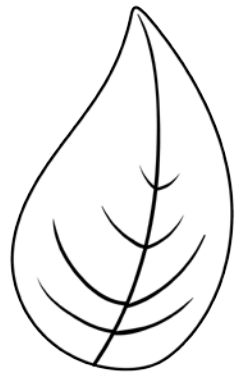
Find at least 5 multiplication and 5 division facts below. Circle the fact and write in \times or \div and an $=$ sign.

5	5	25	10	3	4	12	21
9	3	27	2	4	8	9	7
8	5	4	9	36	5	8	3
9	9	81	6	5	40	72	3
6	7	42	21	7	3	20	6
3	6	48	6	8	54	10	28
63	7	9	6	4	6	2	4
56	7	8	36	3	9	27	7

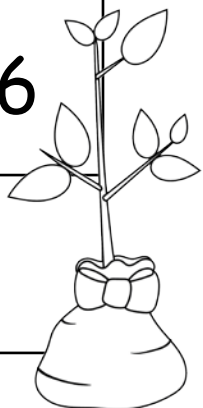


Fact Hunt


Find at least 5 multiplication and 5 division facts below.
Circle the fact and write in x or ÷ and an = sign.



5	5	25	10	7	70	2	4
8	4	5	20	2	10	7	8
6	7	42	64	8	8	14	32
48	7	8	2	16	7	9	63
3	6	18	10	36	9	4	6
48	8	6	40	8	5	7	35
7	3	27	3	9	7	8	56
45	9	5	6	30	54	9	6



Fact Hunt




Find at least 5 multiplication and 5 division facts below. Circle the fact and write in \times or \div and an $=$ sign.

5	5	25	9	7	6	42	72
6	70	7	10	4	3	9	8
2	3	6	2	9	18	9	9
4	9	35	7	5	32	81	4
6	3	8	24	24	8	7	9
7	27	21	7	3	4	7	36
42	72	8	9	8	32	49	5
7	90	9	10	8	8	64	9



Fact Hunt




Find at least 5
multiplication and 5
division facts below.
Circle the fact and write
in \times or \div and an $=$ sign.


5	5	25	6	9	54	7	10
2	9	3	3	7	7	49	2
2	9	72	9	8	35	7	5
4	18	3	6	6	24	8	3
42	6	7	8	4	6	7	42
4	5	6	30	24	8	4	32
4	3	12	4	4	16	9	4
9	7	63	6	42	7	6	3



Fact Hunt



Find at least 5 multiplication and 5 division facts below. Circle the fact and write in \times or \div and an $=$ sign.




5	5	25	7	6	10	5	2
5	42	7	6	6	45	9	5
6	2	6	12	36	7	4	28
30	8	8	64	32	8	4	2
7	16	4	4	8	7	56	8
18	82	9	9	3	4	12	16
2	8	56	8	7	9	7	63
9	3	6	18	6	8	48	8






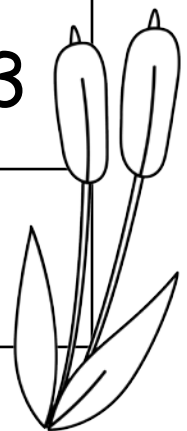

Fact Hunt



Find at least 5 multiplication and 5 division facts below. Circle the fact and write in x or ÷ and an = sign.




5	5	25	6	6	36	2	7
6	7	9	63	3	6	3	18
49	7	7	3	42	7	6	5
8	7	56	7	8	4	32	4
40	5	8	21	63	9	7	20
36	30	7	8	7	56	4	24
9	6	54	16	4	4	28	3
4	5	48	6	8	64	8	8






Fact Hunt




Find at least 5
multiplication and 5
division facts below.
Circle the fact and write
in \times or \div and an $=$ sign.

5 \times 5 = 25	36	4	9	3	3		
3	4	12	56	7	8	5	40
63	42	6	7	4	6	4	24
9	3	9	27	28	7	5	35
7	5	35	7	21	3	7	6
63	15	6	8	48	8	3	81
7	7	49	56	3	7	21	9
8	56	7	8	2	8	16	9





Fact Hunt



Find at least 5
multiplication and 5 division
facts below. Circle the
fact and write in \times or \div and
an = sign.



5	5	25	20	8	8	64	10
8	7	56	4	3	3	9	5
14	6	10	5	8	7	6	42
7	3	6	9	7	63	3	8
2	18	60	6	8	4	8	32
9	8	72	6	7	7	49	9
48	6	8	36	9	6	8	48
21	3	7	4	28	90	10	9

