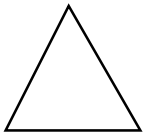
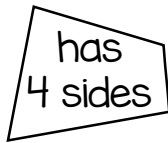


POLYGONS



triangle



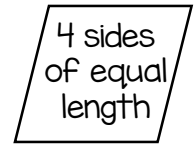
quadrilateral



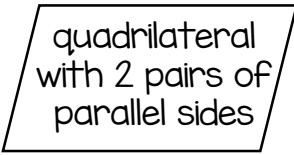
square



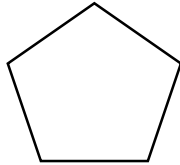
rectangle



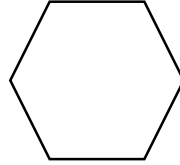
rhombus



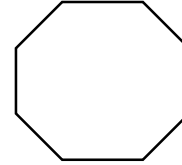
parallelogram



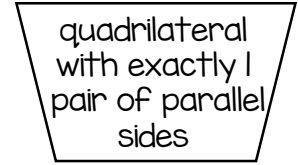
pentagon



hexagon



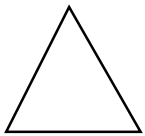
octagon



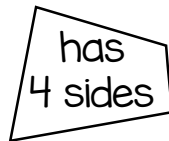
trapezoid

©www.thecurriculumcorner.com


POLYGONS




triangle



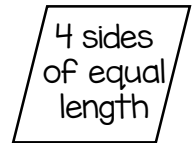
quadrilateral



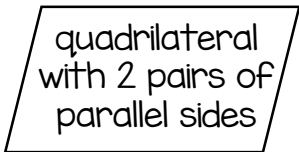
square



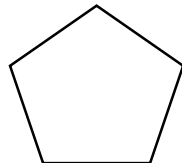
rectangle



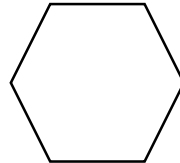
rhombus



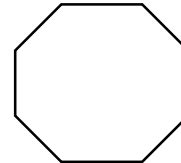
parallelogram



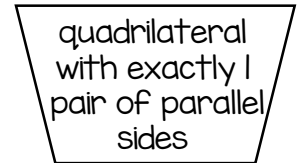
pentagon



hexagon



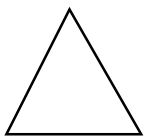
octagon



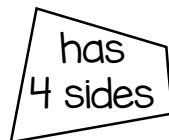
trapezoid

©www.thecurriculumcorner.com

POLYGONS




triangle



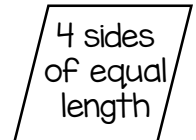
quadrilateral



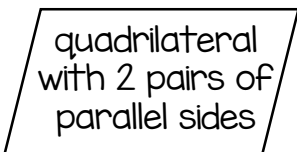
square



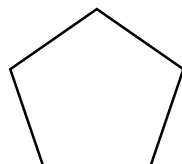
rectangle



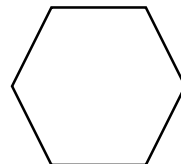
rhombus



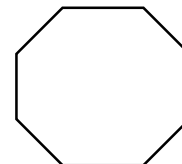
parallelogram



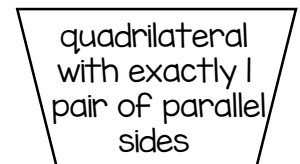
pentagon



hexagon



octagon

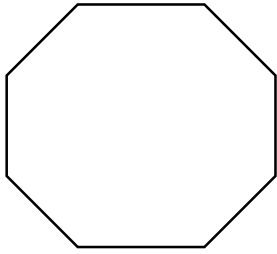


trapezoid

©www.thecurriculumcorner.com

1.

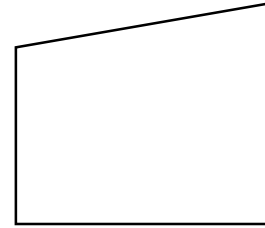
IDENTIFY THE SHAPE



©www.thecurriculumcorner.com

2.

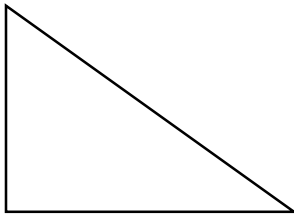
IDENTIFY THE SHAPE



©www.thecurriculumcorner.com

3.

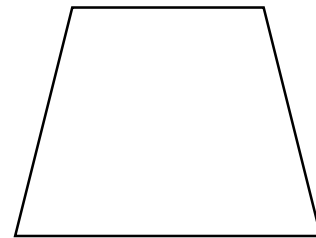
IDENTIFY THE SHAPE



©www.thecurriculumcorner.com

4.

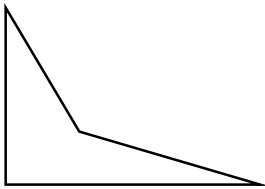
IDENTIFY THE SHAPE



©www.thecurriculumcorner.com

5.

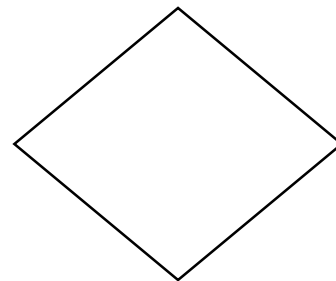
IDENTIFY THE SHAPE



©www.thecurriculumcorner.com

6.

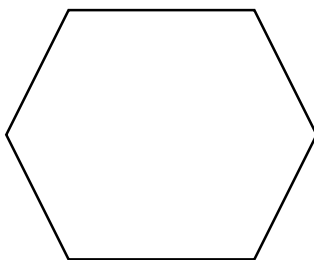
IDENTIFY THE SHAPE



©www.thecurriculumcorner.com

7.


IDENTIFY THE SHAPE



©www.thecurriculumcorner.com

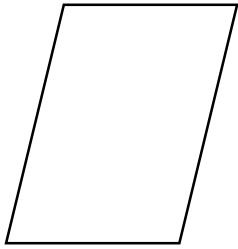
8.

IDENTIFY THE SHAPE



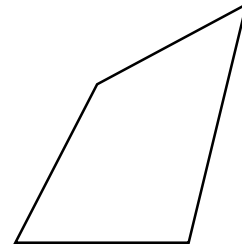
©www.thecurriculumcorner.com

9. IDENTIFY THE SHAPE



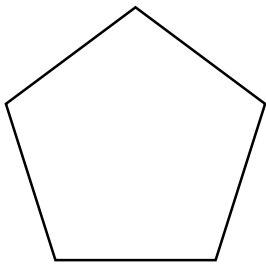
©www.thecurriculumcorner.com

10. IDENTIFY THE SHAPE



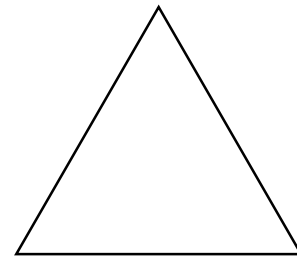
©www.thecurriculumcorner.com

11. IDENTIFY THE SHAPE



©www.thecurriculumcorner.com

12. IDENTIFY THE SHAPE



©www.thecurriculumcorner.com

13. IDENTIFY THE SHAPE

I have four sides and four right angles.

©www.thecurriculumcorner.com

14. IDENTIFY THE SHAPE

I have four sides, none of my angles are alike.

©www.thecurriculumcorner.com

15. IDENTIFY THE SHAPE

I have four equal sides. My opposite angles are equal.

©www.thecurriculumcorner.com

16. IDENTIFY THE SHAPE

I have eight sides.

©www.thecurriculumcorner.com

17. IDENTIFY THE SHAPE

I have four sides. My opposite sides are parallel.

©www.thecurriculumcorner.com

18. IDENTIFY THE SHAPE

Young children will sometimes call me a diamond.

©www.thecurriculumcorner.com

19. IDENTIFY THE SHAPE

I have three sides.

©www.thecurriculumcorner.com

20. IDENTIFY THE SHAPE

I have four sides. I have two obtuse angles and 2 acute angles.

©www.thecurriculumcorner.com

21. IDENTIFY THE SHAPE

I have five sides.

©www.thecurriculumcorner.com

22. IDENTIFY THE SHAPE

I am shaped like a stop sign.

©www.thecurriculumcorner.com

23. IDENTIFY THE SHAPE

I have four equal sides. All of my angles are equal.

©www.thecurriculumcorner.com

24. IDENTIFY THE SHAPE

I have six sides.

©www.thecurriculumcorner.com

Name: _____

POLYGONS TASK CARDS

1.	2.	3.	4.
5.	6.	7.	8.
9.	10.	11.	12.
13.	14.	15.	16.

17.	18.	19.	20.
21.	22.	23.	24.
25.	26.	27.	28.
29.	30.	31.	32.

Name: _____

POLYGONS TASK CARDS

My task is to complete:

Answer Key

POLYGONS TASK CARDS

1. octagon	2. quadrilateral	3. triangle	4. trapezoid
5. quadrilateral	6. rhombus	7. hexagon	8. square
9. parallelogram	10. quadrilateral	11. pentagon	12. triangle

13. rectangle or square	14. quadrilateral	15. rhombus	16. octagon
17. parallelogram or rectangle	18. rhombus	19. triangle	20. rhombus or parallelogram
21. pentagon	22. octagon	23. square	24. hexagon