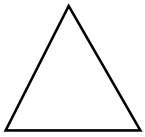
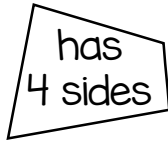


**POLYGONS**



triangle



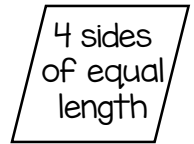
quadrilateral



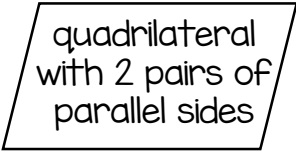
square



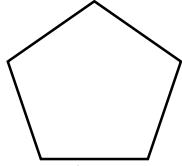
rectangle



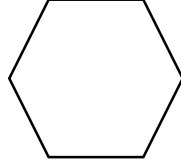
rhombus



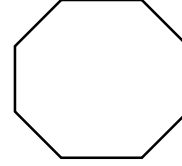
parallelogram



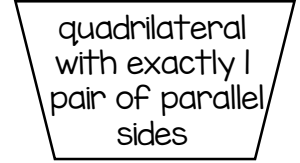
pentagon



hexagon




octagon



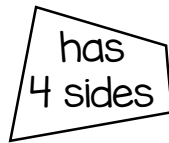
trapezoid

©www.thecurriculumcorner.com


**POLYGONS**




triangle



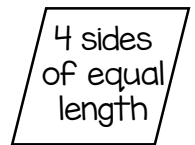
quadrilateral



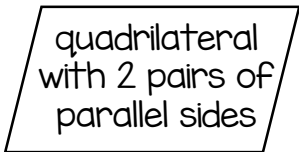
square



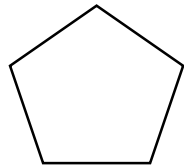
rectangle



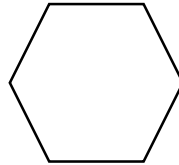
rhombus



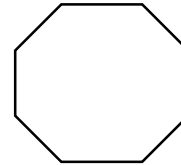
parallelogram



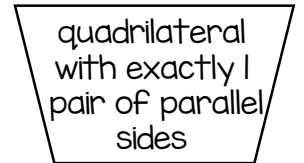
pentagon



hexagon



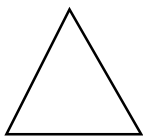
octagon



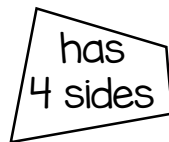
trapezoid

©www.thecurriculumcorner.com

**POLYGONS**



triangle



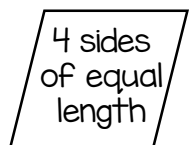
quadrilateral



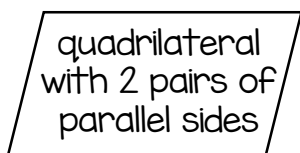
square



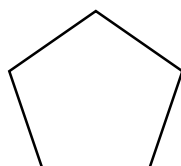
rectangle



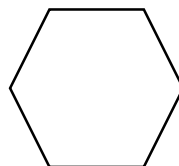
rhombus



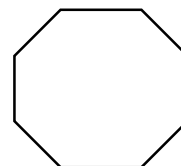
parallelogram



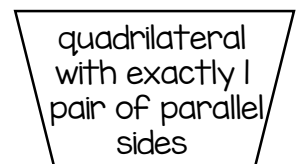
pentagon



hexagon



octagon

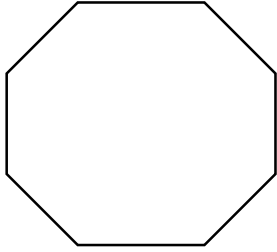


trapezoid

©www.thecurriculumcorner.com

**1.**

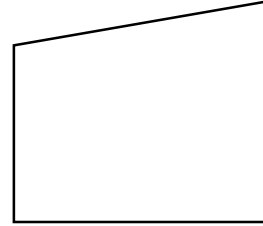
**IDENTIFY THE SHAPE**



©www.thecurriculumcorner.com

**2.**

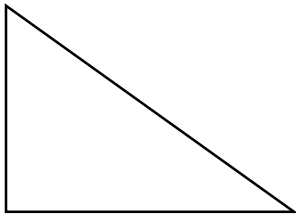
**IDENTIFY THE SHAPE**



©www.thecurriculumcorner.com

**3.**

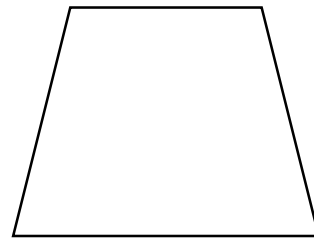
**IDENTIFY THE SHAPE**



©www.thecurriculumcorner.com

**4.**

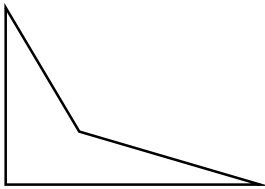
**IDENTIFY THE SHAPE**



©www.thecurriculumcorner.com

**5.**

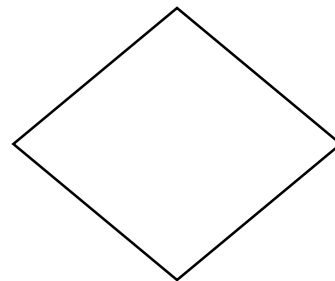
**IDENTIFY THE SHAPE**



©www.thecurriculumcorner.com

**6.**

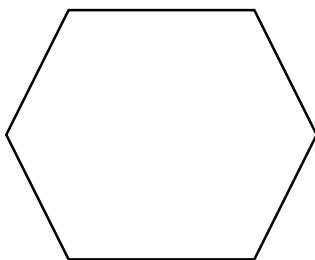
**IDENTIFY THE SHAPE**



©www.thecurriculumcorner.com

**7.**


**IDENTIFY THE SHAPE**



©www.thecurriculumcorner.com

**8.**

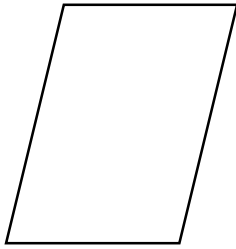
**IDENTIFY THE SHAPE**



©www.thecurriculumcorner.com

9.

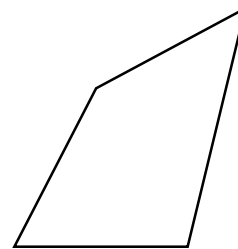
IDENTIFY THE SHAPE



©www.thecurriculumcorner.com

10.

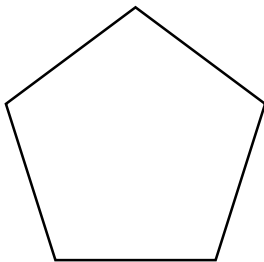
IDENTIFY THE SHAPE



©www.thecurriculumcorner.com

11.

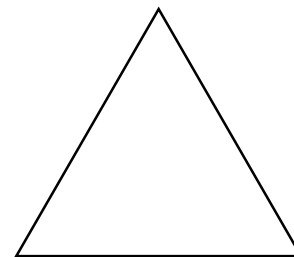
IDENTIFY THE SHAPE



©www.thecurriculumcorner.com

12.

IDENTIFY THE SHAPE



©www.thecurriculumcorner.com

13.

IDENTIFY THE SHAPE

I have four sides and four right angles.

©www.thecurriculumcorner.com

14.

IDENTIFY THE SHAPE

I have four sides, none of my angles are alike.

©www.thecurriculumcorner.com

15.

IDENTIFY THE SHAPE

I have four equal sides. My opposite angles are equal.

©www.thecurriculumcorner.com

16.

IDENTIFY THE SHAPE

I have eight sides.

©www.thecurriculumcorner.com

**17. IDENTIFY THE SHAPE**

I have four sides. My opposite sides are parallel.

©www.thecurriculumcorner.com

**18. IDENTIFY THE SHAPE**

Young children will sometimes call me a diamond.

©www.thecurriculumcorner.com

**19. IDENTIFY THE SHAPE**

I have three sides.

©www.thecurriculumcorner.com

**20. IDENTIFY THE SHAPE**

I have four sides. I have two obtuse angles and 2 acute angles.

©www.thecurriculumcorner.com

**21. IDENTIFY THE SHAPE**

I have five sides.

©www.thecurriculumcorner.com

**22. IDENTIFY THE SHAPE**

I am shaped like a stop sign.

©www.thecurriculumcorner.com

**23. IDENTIFY THE SHAPE**

I have four equal sides. All of my angles are equal.

©www.thecurriculumcorner.com

**24. IDENTIFY THE SHAPE**

I have six sides.

©www.thecurriculumcorner.com

Name: \_\_\_\_\_

## POLYGONS TASK CARDS

1.	2.	3.	4.
5.	6.	7.	8.
9.	10.	11.	12.
13.	14.	15.	16.

17.	18.	19.	20.
21.	22.	23.	24.
25.	26.	27.	28.
29.	30.	31.	32.

Name: \_\_\_\_\_

## POLYGONS TASK CARDS

My task is to complete:


# Answer Key

## POLYGONS TASK CARDS

1. octagon	2. quadrilateral	3. triangle	4. trapezoid
5. quadrilateral	6. rhombus	7. hexagon	8. square
9. parallelogram	10. quadrilateral	11. pentagon	12. triangle



13. rectangle or square	14. quadrilateral	15. rhombus	16. octagon
17. parallelogram or rectangle	18. rhombus	19. triangle	20. rhombus or parallelogram
21. pentagon	22. octagon	23. square	24. hexagon