


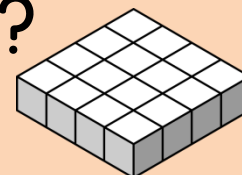
1

What is the volume  
of this solid  
figure?



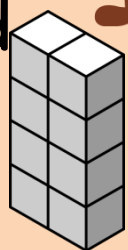
2

What is the volume  
of this solid  
figure?




3

What is the volume  
of this solid  
figure?





4

What is the volume  
of this solid  
figure?




5

What is the volume  
of this solid  
figure?




6

What is the volume  
of this solid  
figure?




7

What is the volume  
of this solid  
figure?




8


What is the volume  
of this solid  
figure?



9




What is the volume  
of this solid  
figure?



10




What is the volume  
of this solid  
figure?



11




What is the volume  
of this solid  
figure?



12



What is the volume  
of this solid  
figure?

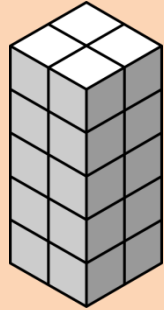




13




What is the volume  
of this solid  
figure?




14

What is the volume  
of this solid  
figure?




15

What is the volume  
of this solid  
figure?



16

What is the volume  
of this solid  
figure?



Name: \_\_\_\_\_

## Finding Volume