


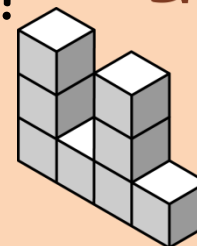
1

What is the volume of this figure?




2

What is the volume of this figure?




3

What is the volume of this figure?




4

What is the volume of this figure?



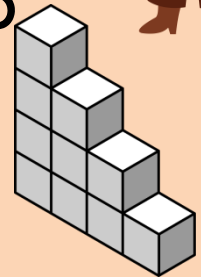
5

What is the volume of this figure?




6

What is the volume of this figure?



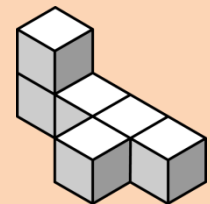
7

What is the volume of this figure?



8


What is the volume of this figure?



9




What is the volume of this figure?




10

What is the volume of this figure?




11

What is the volume of this figure?



12

What is the volume of this figure?



Name: \_\_\_\_\_

## Finding Volume