

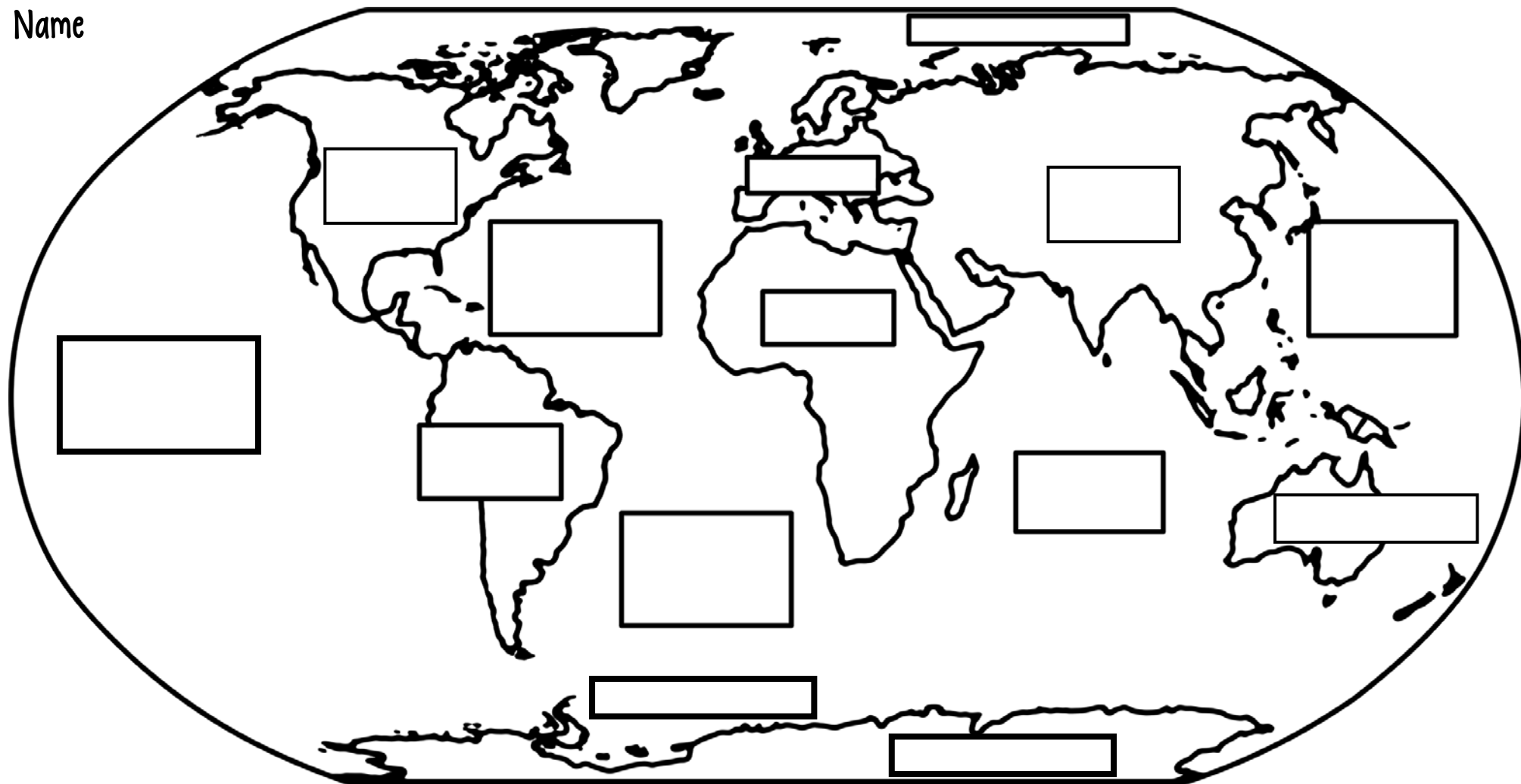


WORLD GEOGRAPHY

Name: _____



Name _____



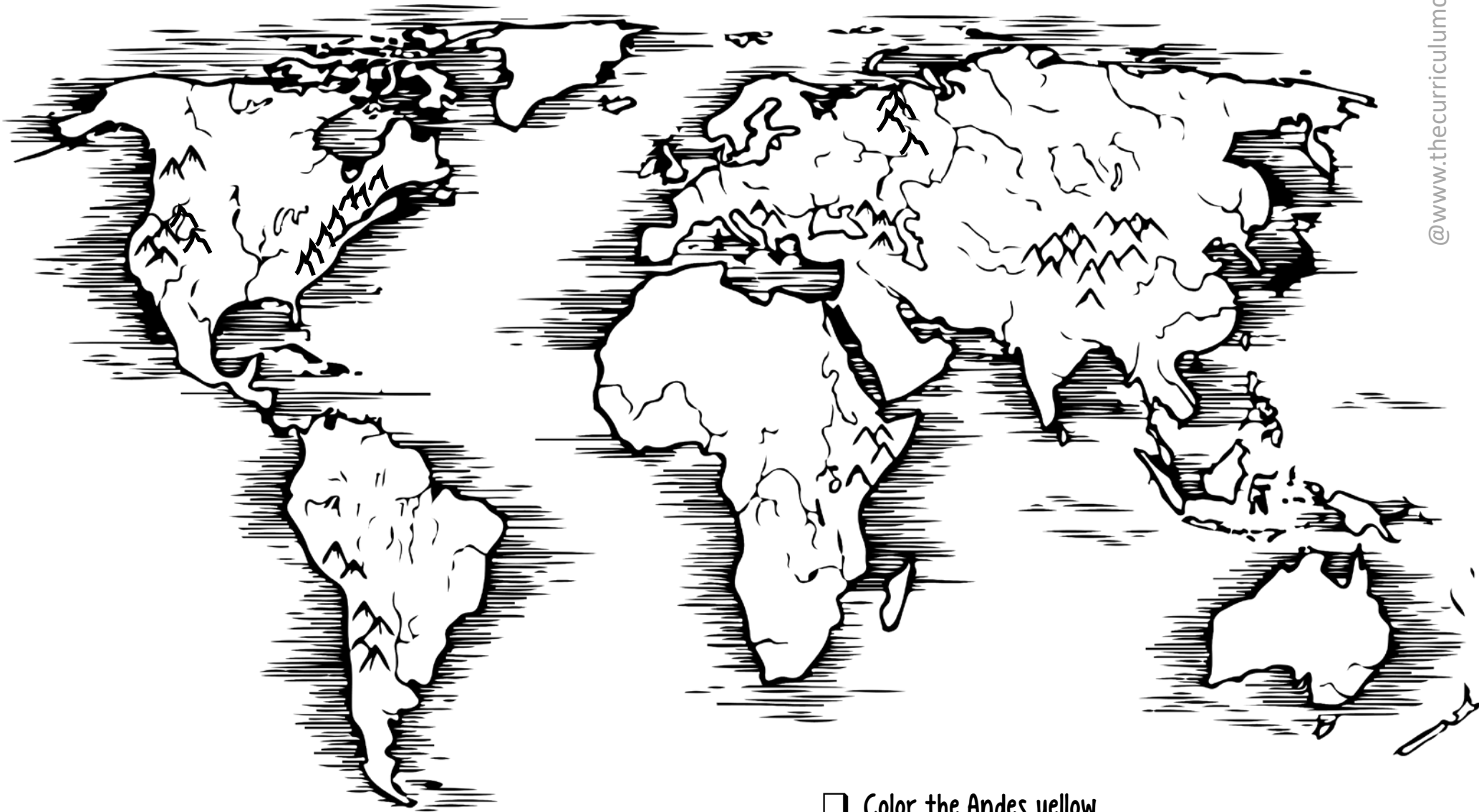
- ☐ Color North America green.
- ☐ Color South America orange.
- ☐ Color Europe purple.
- ☐ Color Asia pink.
- ☐ Color Africa red.
- ☐ Color Australia yellow.
- ☐ Color Antarctica gray.
- ☐ Color the oceans blue.

Label the continents:

- ☐ North America
- ☐ South America
- ☐ Europe
- ☐ Asia
- ☐ Africa
- ☐ Australia
- ☐ Antarctica

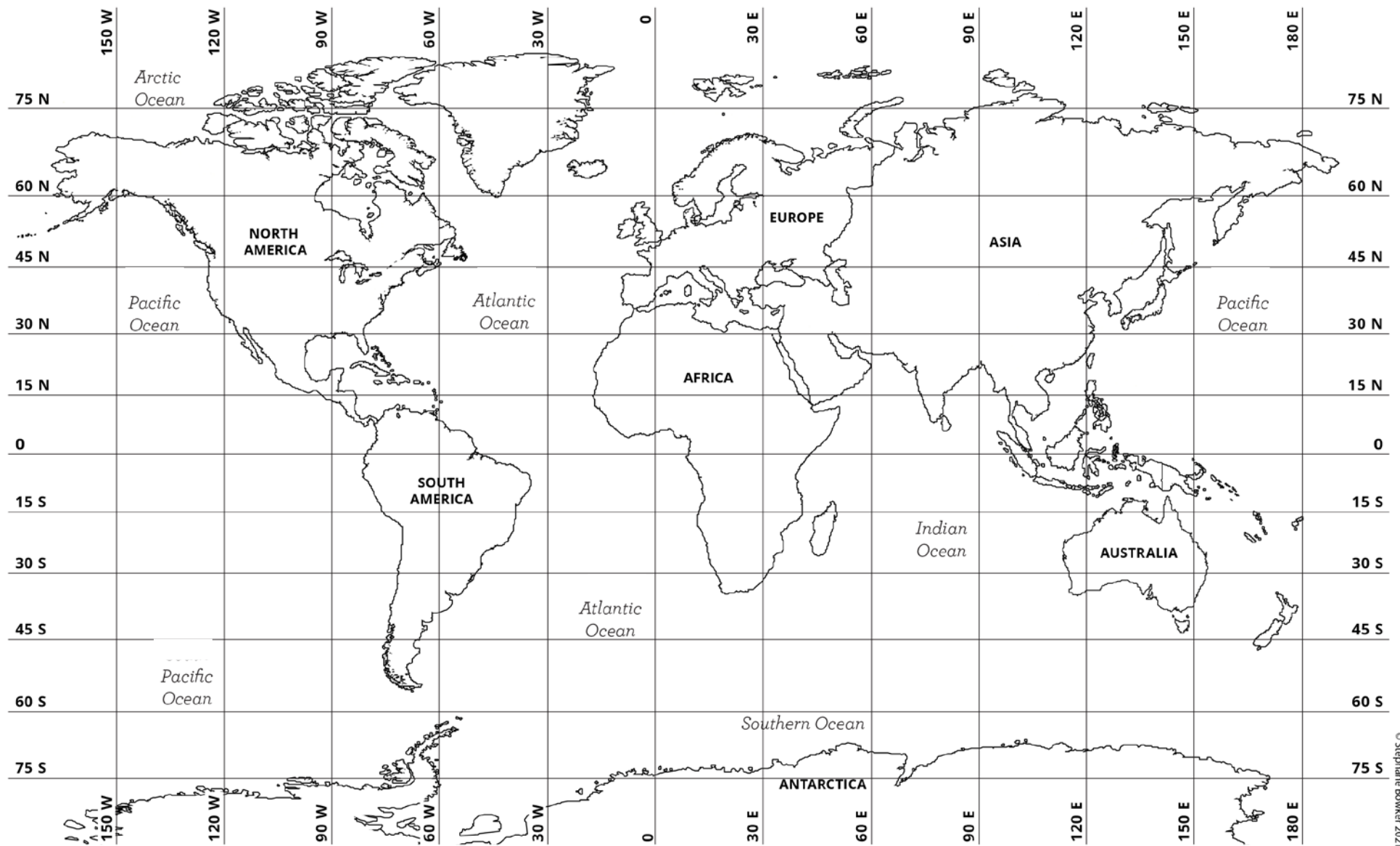
Label the oceans:

- ☐ Pacific Ocean (2 spots)
- ☐ Atlantic Ocean (2 spots)
- ☐ Indian Ocean
- ☐ Arctic Ocean
- ☐ Southern Ocean



- ☐ Color the Himalayas orange.
- ☐ Color the Ural Mountains blue.
- ☐ Color the Caucasus Mountains purple.
- ☐ Color the Canadian Rockies gray.

- ☐ Color the Andes yellow.
- ☐ Color the Alps green.
- ☐ Color the Rocky Mountains brown.
- ☐ Color the Ethiopian Highlands red.
- ☐ Color Mt. Kilimanjaro pink.



© Stephanie Bowker 2021

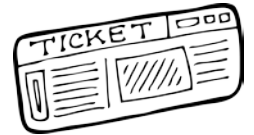
What continent or ocean will you find in each location?

45° N, 90° W		15° S, 60° W	
30° S, 150° E		60° N, 30° E	
15° S, 30° E		60° N, 120° E	



Name: _____

The city is...	You will find this city in...
Rome	
Paris	
Vancouver	
London	
Mexico City	
Madrid	
Athens	
Rio de Janeiro	
Buenos Aires	
Lima	
Havana	
Toronto	



- ☐ Label the country we live in. Color it blue. Don't forget to color Hawaii and Alaska!
- ☐ Label the country connected to us on the northern border of the contiguous United States. Color it green.
- ☐ Label the country connected to us on the southern border of the contiguous United States. Color it yellow.
- ☐ Geographically, Greenland is in North America. Label it and color it purple.
- ☐ Italy is in Europe. It is shaped like a boot. Color it red.
- ☐ France is in Europe. Color it orange.
- ☐ England is in Europe. Color it red.
- ☐ Spain is in Europe. Color it pink.
- ☐ Greece is in Europe. Color it green.
- ☐ Brazil is in South America. Color it orange.
- ☐ Argentina is in South America. Color it yellow.
- ☐ Peru is in South America. Color it red.
- ☐ Cuba is an island in the Caribbean. Color it pink.
- ☐ Puerto Rico is an island in the Caribbean. It is a part of what country?

- ☐ Find and label Australia. Color it purple.
- ☐ Which continent is the highest, driest, coldest, and windiest location on earth? Label this location on your map. Be sure to spell this name correctly. Color it gray.

Name: _____

☐ Label the oceans. Draw blue waves to indicate the water.

☐ Pacific Ocean

☐ Atlantic Ocean

☐ Indian Ocean

☐ Arctic Ocean (Be careful when spelling this word!)

☐ Southern Ocean

☐ Find Thailand on the map. Color it red.

☐ Find India on the map. Color it yellow.

☐ Find Japan on the map. Color it pink.

☐ Find South Africa on the map. Color it orange.

☐ Find Egypt on the map. Color it green.

☐ Find Madagascar on the map. Color it purple.

☐ Find Kenya on the map. Color it yellow.

☐ Find New Zealand on the map. Color it green.

Are you finished? Check each of the following:

☐ I have spelled all words correctly.

☐ I have colored each section neatly.

☐ Staple this checklist to your map.

What continent are these countries a part of?

What continent are these countries a part of?

☐ This is my best sixth grade work!

☐ My name is on the back of my map.

☐ Turn in your map and this checklist.

Map of the World

